



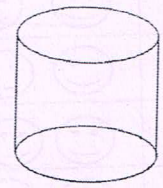
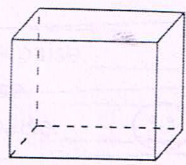
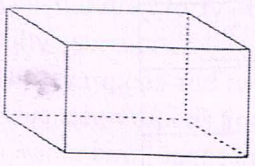
Kumbhanath Society, Aavkar Hall Road, Maninagar, Ahmedabad-8. Ph. 25450086 • www.gnchool.com

STD-2ND SUB-MATHS S.A -2 ASSINGMENT[CH-8 TO 15] MARKS-300

Q.1 WRITE THE NUMBER OF LINES (HORIZONTAL , VERTICAL AND SLANTING) WHICH MAKE EACH OF THESE LETTERS OF THE ALPHABET.

- | | |
|---|---|
| 1. A Horizontal= _____
Slanting= _____ | 5. H Horizontal= _____
Vertical= _____ |
| 2. k Slanting= _____
Vertical= _____ | 6. V Slanting= _____
Vertical= _____ |
| 3. E Horizontal= _____
Vertical= _____ | 7. L Horizontal= _____
Vertical= _____ |
| 4. M Slanting= _____
Vertical= _____ | 8. X Slanting= _____
Vertical= _____ |

Q.2 IDENTIFY THE THE SOLID FIGURE AND THEN WRITE THE NUMBER OF FACES ,EDGES, AND VERTICES.






Faces: _____
Edges: _____
Vertices: _____


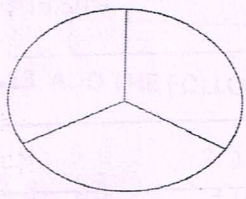
Faces: _____
Edges: _____
vertices: _____

Faces: _____
Edges: _____
Vertices: _____

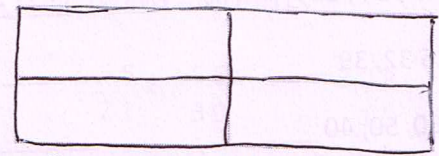
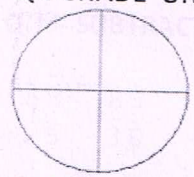
Q.3 SHADE ONE-HALF (1/2) OF EACH FIGURE.




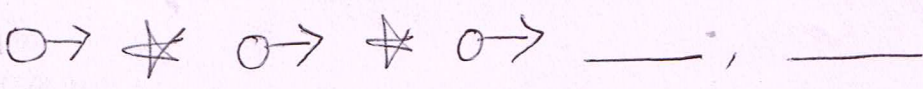
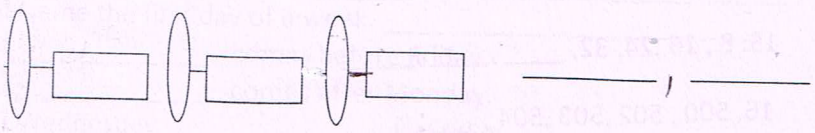
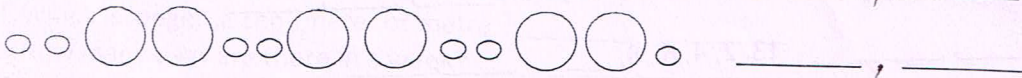

Q.4 SHADE ONE-THIRD (1/3) OF EACH FIGURE.










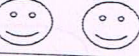




Q.5 SHADE ONE-FOURTH (1/4) OF EACH FIGURE.



Q.6 Draw the next two figures in the following patterns.



Q.7 The following table shows the number of birthdays of the students of class 2-b in each month.

Month	Number of Students
January	
February	
March	
April	
May	
June	
July	
August	
September	
October	
November	
December	

Count the Smilies and answer the following questions.

- In which months do 4 children have their birthdays? _____
- Which month has the most number of birthday? _____
- Which month has the least number of birthdays and how many? _____
- How many birthdays does the month of October have? _____

Q.8 WRITE THE NEXT THREE TERMS IIN EACH SEQUENCE.

- 0, 3, 6, 9 _____, _____, _____
- 4, 9, 14, 19 _____, _____, _____
- 10, 15, 20, 25 _____, _____, _____
- 18, 25, 32, 39 _____, _____, _____
- 40, 35, 30, 25, _____, _____, _____
- 70, 60, 50, 40 _____, _____, _____
- 2, 4, 8, 16, _____, _____, _____
- 5, 10, 20, 40 _____, _____, _____
- 5, 10, 15, 20, _____, _____, _____
- 100, 200, 300, 400, _____, _____, _____
- 90, 95, 100, 105, _____, _____, _____
- 2, 4, 6, 8, _____, _____, _____
- 200, 205, 210, 215, _____, _____, _____
- 8, 16, 24, 32, _____, _____, _____
- 301, 302, 303, 304, _____, _____, _____
- 500, 502, 503, 504, _____, _____, _____

Q.9 CIRCLE THE EVEN NUMBERS IN THE FOLLOWING.

3 6 15 17 20 24 29 41 6 11 7 22
18 13 9 28 50 63 72 93 61 10 91 87

Q.10 WRITE THE UNIT OF WEIGHT IN WHICH YOU WILL MEASURE THE FOLLOWING.

1. Eraser- _____ 2. Your weight- _____ 3. Bag of rice- _____
4. Biscuit packet- _____ 5. Soap-bar _____ 6. Four toffees- _____
7. Gold ring- _____ 8. Pencil- _____ 9. Bag of wheat- _____
10. Your suitcase and bedding- _____

Q.11 WRITE IN FIGURES.

1. Seven rupees and forty-five paise. _____
2. Twenty-nine rupees and nine paise. _____
3. One hundred forty-three rupees and fifty paise. _____
4. Fifty-six rupees. _____
5. Ninety rupees and twenty-five paise. _____
6. Seventeen rupees and fifty paise. _____
7. Twenty two rupees and eight paise. _____

Q.12 WRITE IN WORDS.

1. ₹ 7.50 = _____
2. ₹ 25.90 = _____
3. ₹ 55.07 = _____
4. ₹ 175.35 = _____
5. ₹ 8.25 = _____
6. ₹ 10.60 = _____
7. ₹ 35.50 = _____

Q.13 ADD THE FOLLOWING AMOUNTS.

$\begin{array}{r} 1.72 \quad 50 \\ + 35 \quad 25 \\ \hline \end{array}$	$\begin{array}{r} 2.145 \quad 35 \\ + 083 \quad 40 \\ \hline \end{array}$	$\begin{array}{r} 3.035 \quad 25 \\ + 472 \quad 45 \\ \hline \end{array}$	$\begin{array}{r} 4.145 \quad 25 \\ + 326 \quad 45 \\ \hline \end{array}$	$\begin{array}{r} 5.16 \quad 35 \\ + 45 \quad 50 \\ \hline \end{array}$
---	---	---	---	---

Q.14 SUBTRACT THE FOLLOWING AMOUNTS.

$\begin{array}{r} 1.68 \quad 85 \\ - 15 \quad 30 \\ \hline \end{array}$	$\begin{array}{r} 2.55 \quad 55 \\ - 21 \quad 30 \\ \hline \end{array}$	$\begin{array}{r} 3.28 \quad 58 \\ - 15 \quad 25 \\ \hline \end{array}$	$\begin{array}{r} 4.95 \quad 75 \\ - 59 \quad 50 \\ \hline \end{array}$	$\begin{array}{r} 5.275 \quad 65 \\ - 143 \quad 40 \\ \hline \end{array}$
---	---	---	---	---

Q.15 FILL IN THE BLANKS.

1. Which is longer, a centimeter or metre? _____
2. How many days are there in a week? _____
3. Name the first day of a week. _____
4. _____ comes before Friday.
5. _____ comes after Monday.
6. Wednesday _____ Friday.

7. Monday _____ Wednesday.
8. If today is Sunday, yesterday was _____
9. There are _____ months in a year.
10. _____ is the second month of the year.
11. There are 7 _____ in a week.
12. The season when it becomes very hot is _____
13. _____ is the month just after September.
14. _____ is the month just before February.
15. April, _____, _____ and November have _____ days.
16. Name the fourth day of a week. _____
17. Name the fourth day of a week. _____
18. Name the third day of a week. _____
19. Name the last day of a week. _____
20. Saturday _____ Monday

Q.16 MATCH CORRECTLY THE ITEMS IN COLUMN A TO THEIR DESCRIPTION IN COLUMN B.

A	B
1. Weight	Small unit of capacity
2. Capacity	the measure of how heavy an object is
3. Metre	unit of capacity = 1000 millilitres
4. Litre	unit of length = 100 centimetres
5. Kilogram	the amount that a container can hold
6. Millilitre	unit of weight = 10000 grams

Q.17 SOLVE THE FOLLOWING.

1. Sunil weighs 45 kg and Anil weighs 56 kg. What is their total weight?
2. The weight of a chair is 10 kg. A table is 25 kilo grams heavier than the chair, what is the weight of the table?
3. A bag of onions weighs 520 grams. A bag of potatoes weighs 810 grams. How much lighter is the bag of onions than the bag of potatoes?
4. A man weighs 72 kg and his wife weighs 59 kg. How much more does the man weigh than his wife?
5. A milk dairy sells 145 litres of milk everyday. How much milk will it sell in 4 days?
6. A cow gives 8 litres of milk everyday. How much milk will she give in a week?
7. Ashish bought an ice-cream for 28 and a burger for 45 for lunch. How much money did he spend in all?
8. Mandira fills an empty container with 20 litres of water. She then pours all the water equally into some jugs. Each holds 4 litres of water. How many jugs does she use?
9. Sumit bought a cap and a hairband 100. If the cost of the hairband is 12.50, find the cost of the cap.
10. Sita's mother gave her 40 to buy some fruits. She went to the market and lost 15 on her way. How much money is left with her?



Gurunanak & Chandraketu Pandya English Medium School

Shri Rajanikant Vyas & Chandraketu Pandya English Medium Higher Secondary School

(Pre-Primary, Primary, Secondary & Higher Secondary - Science and Commerce Stream)

Kumbhanath Society, Aavkar Hall Road, Maninagar, Ahmedabad-8. Ph. 25450086 • www.gncschool.com

STD-2ND SUB-APTITUDE S.A-2 ASSINGMENT [CH-5 TO 8] MARKS-300

QUE-1 DO AS DIRECTED

- 1) $2 + 4 + 6 + 7 = 10 +$ _____
- 2) $6 \times 8 = 40 +$ _____
- 3) $28 \div 7 = 1 +$ _____
- 4) $6 + 6 + 6 + 6 = 3 \times$ _____
- 5) Fill in the missing numbers : 7 , 14 , 21, _____ , _____ , 42.
- 6) The next odd number after 191 is _____
- 7) $567 =$ _____ hundreds + _____ tens + _____ ones.
- 8) Encircle the smallest number : 564, 370 , 271 , 425 , 682.
- 9) The number that comes just before 689 is _____
- 10) April has _____ days.
- 11) What must be added to 233 to make it 339 ? _____
- 12) A rectangle has _____ side.
- 13) Fourth day of a week is _____
- 14) A triangle has _____ vertices.
- 15) What is 15 less than 165 ? _____
- 16) 2 Dozens $\cdot 12 =$ _____
- 17) $3 \times 3 = 10 \cdot$ _____
- 18) The greatest 3-digit number is _____
- 19) $84 + 6 = 100 \cdot$ _____
- 20) $8 + 7 = 10 +$ _____
- 21) $120 \cdot$ _____ = 112
- 22) $77 \cdot$ _____ = 10×7
- 23) $50 - 36 = 10 +$ _____
- 24) What is 16 less than 168? _____
- 25) Seventh day of a week is _____
- 26) Find the next number : 55 , 60 , 65 , 70 , 75 , _____
- 27) $17 + 13 = 5 \times$ _____
- 28) $99 +$ _____ = 200
- 29) April has _____ days.
- 30) Who am I ? if you add 1 to me , I will become one less than 500. _____
- 31) The greatest 2-digit number + The smallest 2-digit number = _____
- 32) $235 +$ _____ = 400
- 33) 2 tens - 9 ones = $12 \cdot$ _____
- 34) What do you get if you take 17 from 297 ? _____
- 35) What is 35 more than 205 ? _____
- 36) If $106 + 49 = 155$, then $155 - 106 =$ _____
- 37) 4 tens + 5 ones = _____ tens + 15 ones
- 38) Find the next number: 10, 20, 30, 40, 50, 60, _____
- 39) Fill in the missing numbers : 5 , 10 , 15, _____ , _____ , 30.
- 40) The next even number after 182 is _____
- 41) The number that comes just before 345 is _____
- 42) The number that comes just after 666 is _____
- 43) Second day of a week is _____
- 44) Encircle the biggest number : 164, 470 , 971 , 525 , 982.
- 45) $80 +$ _____ = 100

0 → Match the Patterns with the correct parts.

0 → Carry on the pattern.

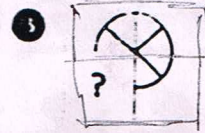


1						
2						
3						
4						
5						
6						
7						
8						



STD-2nd


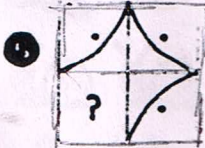

Sub-Aptitude

Q-1 → Which figure completes the larger square?



1 - _____

2 - _____



3 - _____

4 - _____

5 - _____



6 - _____



Q-2 → Match the dogs with their shadows



1 - _____



2 - _____

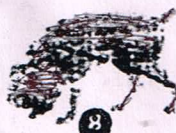
3 - _____

4 - _____



5 - _____


6 - _____





7 - _____


8 - _____


Q-3 → Carry on the Number Patterns.


1. 


2. 


3. 

4. 





5. 





6. 





7. 





8. 

Q-4 → Match the birds with their shadows.

1.  1.  2.  3. 

4.  5.  6.  7. 

8.  9.  10.  11. 

12.  13.  14.  15. 

1. _____
2. _____
3. _____
4. _____
5. _____
6. _____
7. _____
8. _____



Q.1 WRITE OPPOSITE.

- | | | | |
|----------------|------------------|--------------------|------------------|
| 1.Happy- _____ | 2.Night- _____ | 3.Beautiful- _____ | 4.Hard- _____ |
| 5.Wild- _____ | 6.Heavy- _____ | 7.High- _____ | 8.Good- _____ |
| 9.Full- _____ | 10.Bright- _____ | 11.Open- _____ | 12.Thick- _____ |
| 13. Big- _____ | 14.Late- _____ | 15. Fat- _____ | 16.Strong- _____ |
| 17.Rich- _____ | 18.In- _____ | 19.True- _____ | 20.Up - _____ |

Q.2 FILL IN THE BLANKS WITH SUITABLE VERBS CHOSEN FROM AM, IS, ARE, WAS, AND WERE

- 1.India _____ a large country.
- 2.The earth _____ round.
- 3.I _____ a pupil of class 2nd.
- 4.These words _____ verbs.
- 5.They _____ hungry after their long walk.
- 6.Zafer and Karan _____ my classmates.
- 7.I _____ sorry I broke the flower pot.
8. Tom _____ caught by the farmer when he tried to climb the Apple tree.
- 9.The children _____ happy that the holidays have started.
10. _____ Varun and Dhruv your friend?

Q.3 ADD -ING TO THE FOLLOWING VERBS. REMEMBER TO DOUBLE THE LAST LETTER.

- | | | | |
|----------------|----------------|---------------|----------------|
| 1.knit- _____ | 2.Sip- _____ | 3.Pot- _____ | 4.Rob- _____ |
| 5.Let- _____ | 6.knot- _____ | 7.Fit- _____ | 8.Pin- _____ |
| 9. Grip- _____ | 10. Cut- _____ | 11.Get- _____ | 12. Fun- _____ |

Q.4 PICK OUT THE NOUNS AND ADJECTIVES FROM THE BRACKETS AND WRITE THEM IN THE SPACES GIVEN.

[Wealthy, Drums, Deep, Cupboard, Unhappy, Cottage, Blunt, Girl, Shoes, Sharp, Shirt, Pink, Brother, Shiny, Train, Thin]

ADJECTIVES

NOUNS

Q.5 UNDERLINE THE RIGHT VERB.

1. Ships (sail ,walk) across the sea.
2. Honey (smell , tastes) sweet.
3. The plane (ran , flew) from Goa to Mumbai.
4. The girl (appears , thinks) to be pleased.
5. Roses (smell , drink) sweet.

Q.6 WRITE SHORT FORM.

- | | | |
|------------------------|--------------------|----------------------|
| 1. I Will - _____ | 2. We Will - _____ | 3. Could not - _____ |
| 4. Can not - _____ | 5. Do not - _____ | 6. You Will - _____ |
| 7. Did not - _____ | 8. Are not - _____ | 9. Would not - _____ |
| 10. Should not - _____ | | |

Q.7 WRITE ANY TWO MEANINGFUL HIDDEN WORDS.

- | | |
|---------------------|--------------------|
| 1. Opened - _____ | 2. Hear - _____ |
| 3. Yellow - _____ | 4. Inside - _____ |
| 5. Village - _____ | 6. Slowly - _____ |
| 7. Market - _____ | 8. African - _____ |
| 9. Together - _____ | 10. Smiled - _____ |

Q.8 FILL IN THE BLANKS .

1. I have a right hand and a _____ hand.
2. My father bought me new _____
3. My grandfather gave me a _____ for my birthday.
4. This metal is hard but wool is _____
5. _____ is the first month.
6. There are _____ months in a year.
7. The last month of the year is _____
8. A tall building is called a _____
9. An Insect _____
10. A Tiger has black and _____ stripes.
11. If you plant a seed it might _____
12. A rose is a _____
13. The cold season is called _____
14. _____ is the name of a meal.
15. Fish lives in a _____
16. A colour _____
17. The hot season is called _____
18. I brought my new bicycle to school. I wanted to _____ it to my classmates.

Q.9 CHANGE THE FIRST LETTER TO MAKE A NEW WORD.

- 1.Box- __ ox 2. Bar- __ ar 3. Bow- __ ow 4.Look- __ ook 5.Tap- __ ap 6. Red- __ ed

Q.10 CHANGE THE SECOND LETTER TO MAKE A NEW WORD.

1. Son- S __ n 2. Tan- t __ n 3. Ball- b __ ll 4. Pin- p __ n 5. Cap- c __ p 6. Top- t __ p

Q.11 UNJUMBLE THE LETTER TO MAKE A WORD.

1. Tnu- _____ 2. Geg - _____ 3. Cta - _____ 4. Rac - _____ 5. Otw - _____ 6. Top - _____

Q.12 Tick (✓) each pair of words that sound the same. put a cross (×) if they don't.

1. boot root _____ 2. cook book _____ 3. sharp letter _____ 4. door floor _____
5. some come _____ 6. cry fly _____ 7. track truck _____ 8. Neck peck _____

Q.13 Write the missing letters.

1. sp _ _ n 2. St _ _ et 3. C _ _ y 4. sp _ _ sh 5. b _ _ ick 6. b _ _ ck

Q.14 Fill in the blanks with suitable pronouns.

- _____ is a lazy boy.
- _____ am very poor.
- _____ go to school daily.
- Where are the children ? Call _____ here.
- The burger is bad throw _____ away.
- This sum is too hard for _____
- Come here , boys _____ shall work now.
- _____ am a soldier.
- _____ is a bird.
- _____ are brother and sister.

Q.15 Fill in the blanks with correct pre-position.

{ in, by, into, over, at, of, with, under, across, on }

- The garden is full _____ flower.
- The snake crawled _____ the hole.
- The bagger sat _____ the tree.
- A man wearing a helmet is sitting _____ the car.
- The girl draws a map _____ her pen.
- We met his sister _____ the station.
- All the children were punished _____ the teacher.
- The dog jumped _____ the fence.
- The cow is grazing _____ the grass.
- There is a bridge _____ the river.

Q.16 Fill in the blanks with a, an, or the.

1. All of admire _____ beauty.
2. _____ beauty of Kashmir is very famous.
3. We have bought _____ L.C.D television set.
4. We are looking for _____ new house.
5. _____ peacock is a colourful bird.
6. _____ earth revolves around the sun.
7. We went for _____ picnic on sunday.
8. Do you have _____ umbrella with you ?
9. _____ Arabin sea is to the west of Mumbai.
10. _____ Himalayas are India's tallest mountains.

Q.17 Make sentences from the following groups of words.

1. Sunday we on play
2. silence keep the class in
3. i do must home work my
4. enjoyed our we holidays
5. ice cream like i eat to
6. dog barking is the
7. at twinkle night stars the
8. useful very water is
9. everywhere air is
10. 8 eat at o'clock we

PROCEED THE NOUNS AND ADJECTIVES FROM THE BRACKETS AND WRITE THEM IN THE SPACES GIVEN.

Don't, Peace, Capricious, Unhappy, Cottage, Quiet, Call, Shoot, Stamp, Only, Brother, Shiny, Craft, Plug

