



Gurunanak & Chandraketu Pandya English Medium School
Shri Rajanikant Vyas & Chandraketu Pandya English Medium Higher Secondary School
(Pre-Primary, Primary, Secondary & Higher Secondary - Science and Commerce Stream)

Kumbhanath Society, Aavkar Hall Road, Maninagar, Ahmedabad-8. Ph. 25450086 • www.gnchool.com

Sub-m.v std-3rd S.A -1 EXAM chap-1to6 date marks-150

Q-1 Number these sentences in the correct order. [20]

- 1-The squirrel came up with an idea.
- 2- The villagers saw juicy fruits and bright flowers hanging from the trees.
- 3-The king of the jungle was enjoying his afternoon nap.
- 4- The animals told him they would lose their homes once the trees were cut.
- 5- The animals set to work on the squirrel' idea.
- 6- The village headman said that from that day no trees would be cut.
- 7- Water- Vihar pond became full of mosquitoes and files.
- 8- Tarr-Tarr ran away because he was scared of Hiss-Hiss.
- 9- Now there was no need to close down the pond.
- 10- The animals went to the tank where Tarr-Tarr was hiding and spoke to him lovingly.
- 11- Tarr-Tarr agreed to come back.
- 12-Tweety was anugaly bird and so the other birds_____

Q-2 Fill in the blanks. [30]

- 1-Sneha's grandparents did not want to go _____.
- 2- Sneha's _____ wanted to go to a place where they could swim.
- 3- Rohan suggested that they go to _____.
- 4- Mother wanted to sit on the _____ and relax.
- 5- Things were not as _____ as they seemed.
- 6-Maya's sadness went away because she changed her way of _____.
- 7-Tweety was an ugly bird and so the other birds_____
- 8- The _____ ordered his men to get the prettiest bird for the_____
- 9-The rats saved the birds by _____ the net.
- 10- The king,s men did not want to take Tweety as it was not _____ like the other _____

Q-3 Write True or False. [30]

- 1- Siddharth didn't help the sick puppy.
- 2- Tuffy barked to warn Siddhrth of the danger.
- 3- The Baby 's life was saved by Tuffy.
- 4- Siddharth did not treat Tuffy as a part of the family.
- 5-Sneha's father wanted to plan a trip for the winter holidays.
- 6- Everyone liked the idea of having fun on the beach.
- 7- In the end, no one was happy with decision taken.
- 8- Sneha's grandparents were unhappy about going to Goa.
- 9- Listening to each other helped Sneha's family to make the right decision.
- 10- Tweety was kind and clever.
- 11- The birds flew down to eat fruits.
- 12- Tweety;s mother told it be proud of itself.
- 13 Tweety could not save the birds.

Q-4Answer in one word. [20]

- 1-What for did the villagers want to cut the trees.
- 2-Who heard them talking about it.
- 3-Who gave the idea of hanging fruits and flowers all over the tree.
- 4- Who felt ashamed of themselves.
- 5- Who were perched on the branches of the trees.

Q-5 Circle the correct word according to the story. [10]

- 1-Nobody/Everybody in Water-Vihar wanted to play with Tarr-Tarr.

- 2-Tarr-Tarr hide in tank nearby Garden/House.
 3-Only Woof-Woof/Hiss-Hiss saw Tarr-Tarr hiding.
 4- The Ants/Mosquitoes laid their eggs in the pond.
 5- Tarr-Tarr used to Eat/Help the flies and mosquitoes.

Q-7 Match the following sentences. [10]

- | | |
|---------------------------------|------------------------------|
| 1- People made fun of siddharth | [a] the life of the baby. |
| 2- Tuffy saved | [b] on fire. |
| 3- Siddharth saw sick puppy | [c] for keeping a stray dog. |
| 4- Siddharth ,s house was | [d] lying on the road. |

Q-6 Fill in the blanks. [10]

- 1-King Midas had _____
 2-midas was a _____
 3-Marigold is the name of a _____
 4-A farmer is a person who _____
 5-A puppy is young _____
 6-You use your _____ to touch.
 7-The story tell of a _____

Q-7 write in cursev



Gurunanak & Chandraketu Pandya English Medium School
Shri Rajanikant Vyas & Chandraketu Pandya English Medium Higher Secondary School
 (Pre-Primary, Primary, Secondary & Higher Secondary - Science and Commerce Stream)

Kumbhanath Society, Aavkar Hall Road, Maninagar, Ahmedabad-8. Ph. 25450086 • www.gnicschool.com

SUB-MATHS

STD-3RD

S.A-1 EXAM

MARKS -300

DATE

Q-1 Tick the correct answer.

{ 20 }

A number, when subtracted from 7000, leaves a difference of 2639. What is the number?

- a] 5471 b] 5361 c] 4361 d] 3639

2- A male bear weighs about 550 pounds. A female bear weighs about 285 pounds. How much more does the male bear weigh?

- 265 pounds b) 375 pounds c) 365 pounds d) 835 pounds

3- The value of $5016 - 2894 + 3997$ is

- a) 6000 b) 6120 c) 6191 d) 6119

4- Which is another way to write $5+5+5+5+5$?

- a) 6×5 b) $30 \div 5$ c) 6×5 d) $5 \times 5 \times 5 \times 5 \times 5$

Q-2 Fill in the blanks.

{ 20 }

- | | |
|---|---|
| a) $8930 \times \underline{\hspace{2cm}} = 0$ | b) $\underline{\hspace{2cm}} \times 469$ |
| c) $7 \times (8 \times 0) = \underline{\hspace{2cm}}$ | d) $9 \times (\underline{\hspace{2cm}} \times 2) = 54$ |
| e) $35 \times 100 = \underline{\hspace{2cm}}$ | f) $220 \times 3 \text{ tens} = \underline{\hspace{2cm}}$ |
| g) $4 \div 4 = \underline{\hspace{2cm}}$ | h) $0 \div 19 = \underline{\hspace{2cm}}$ |
| i) $5 \div 1 = \underline{\hspace{2cm}}$ | j) $29 \div 1 = \underline{\hspace{2cm}}$ |

Q-3 Word problem.

{ 20 }

- 1) A man earned Rs. 7860/- in a month. He spent Rs. 5937/-. How much money did he save?
- 2) Usha needs Rs. 3000/- to buy a hand-bag of her choice. She has Rs. 1750/-. How much more money does she need?
- 3) 8530 students appeared in a certain examination. 6302 of them passed. How many failed?
- 4) 243 people ride a train every hour. How many people ride the train in two hours?
- 5) A machine can wrap 235 boxes of toys in one hour. How many boxes of toys can it wrap in 28 hours?
- 6) There are 24 hours in a day. How many hours are there in an ordinary year?

Q-4 Multiply.

{ 20 }

a) 52	b) 74	c) 61	d) 55	e) 63
X 14	X 21	X 48	X 11	X 91
_____	_____	_____	_____	_____

Q-5 Subtract.

{ 20 }

a) 592	b) 798	c) 862	d) 905	e) 438
341	654	430	703	315
_____	_____	_____	_____	_____

Q-6 Divided.

{ 20 }

a) 639 --- 2	b) 557 --- 3	c) 497 --- 3	d) 552 --- 9	e) 593 --- 4
--------------	--------------	--------------	--------------	--------------

Q-7 Fill in boxes to make the given statement true. { 20 }

- a) $14 \times [] = 70$ b) $13 \times [] = 117$ c) $18 \times [] = 108$ d) $13 \times [] = 104$
e) $12 \times [] = 60$.

Q-8 Solve these problems.

{ 20 }

- 1) 18 Girls and 2 Girls in each team. How many teams?
- 2) 16 ears and 2 ears on each Rabbit. How many Rabbits?
- 3) 24 24 soldiers and 5 rows. How many rows?
- 4) 54 birds and 9 in each house. How many houses?
- 5) 12 wheels and 4 wheels on each cars. How many cars?
- 6) 18 trees in 3 rows. How many trees in each rows?
- 7) 20 toffees and 5 toffees for each girl how many girl?

Q-9 Write the missing numbers and say their names aloud.

(20)

- 1) 3857 to 3876. (2) 5939 to 5958.

Q.10 Write greatest and the smallest. 4 – digits numbers using the given digits. [10]

- 1) 5,3,2,6. (2) 7,0,1,5. (3) 4,8,0,5. (4) 8,4,0,9. (5) 5,7,1,4. (6) 0,4,0,9.

Q.11 Addition.

(20)

1) Th H T O	(2) Th H T O	(3) Th H T O	(4) Th H T O	(5) Th H T O
1 5 0 2	2 3 4 6	1 7 0 0	1 2 4 8	3 5 7 1
+ 2 4 1 3	+ 5 2 1 3	+ 3 2 0 0	+ 2 6 1 0	+ 4 0 1 8

Q-12 discover the pattern and Write the missing number.

[20]

- 1- 201 203 205 207 _____
2- 120 125 130 135 _____
3- 270 290 310 _____
4- 207 317 427 _____

Q-13 Write each numeral as a sum of hundreds ,tens and ones.

[20]

- (a) $579 = [] \text{ hundreds} + [] \text{ tens} + [] \text{ ones}$
(b) $798 = [] \text{ hundreds} + [] \text{ tens} + [] \text{ ones}$
(c) $503 = [] \text{ hundreds} + [] \text{ tens} + [] \text{ ones}$
(d) $273 = [] \text{ hundred} + [] \text{ tens} + [] \text{ ones}$
(e) $549 = [] \text{ hundred} + [] \text{ tens} + [] \text{ ones}$

Q-14 Tick () the numbers or numbers that Match each statement.

[20]

- (a) There is 3 in the hundreds place. 3487 [] 1340 [] 2354 []
(b) There is 6 in tens place, 4625 [] 4060 [] 632 []
(c) There is 7 in the thousands place, 7490 [] 7373 [] 1730 []
(d) There is 0 in the ones place, 4490 [] 3093 [] 570 []

Q-15 Find the Sam.

[20]

(1) H T O	(2) H T O	(3) H T O	(4) H T O
6 8 5	5 1 4	5 4 1	4 0 0
+ 3 0 2	+ 2 7 3	+ 4 4 6	1 9 0

1) What number comes just before the product of the place value of 2 in 729 and the face value of the 3 in 135? _____.

2) Use the digit 5,2,8 to right the smallest and the greatest three digits numbers . Smallest number_____ Greatest number _____.

3) 2040 = _____ thousand _____ hundreds _____ tens _____ ones.

4) 9999 = _____ thousand _____ hundreds _____ tens _____ ones.

5) What is the standards from of 6 thousands 70 tens 5 ones?_____.

Q-7 Fill in boxes to make the given statement true. { 20 }

a) $14 \times [] = 70$

b) $13 \times [] = 117$

c) $18 \times [] = 108$

d) $13 \times [] = 104$

e) $12 \times [] = 60$.

Q-8 Solve these problems. { 20 }

1) 18 Girls and 2 Girls in each team. How many teams?

2) 16 ears and 2 ears on each Rabbit. How many Rabbits?

3) 24 24 soldiers and 5 rows. How many rows?

4) 54 birds and 9 in each house. How many houses?

5) 12 wheels and 4 wheels on each cars. How many cars?

6) 18 trees in 3 rows. How many trees in each rows?

7) 20 toffees and 5 toffees for each girl how many girl?

Q-9 Write the missing numbers and say their names aloud. (20)

1) 3857 to 3876.

(2) 5939 to 5958.

Q.10 Write greatest and the smallest. 4 – digits numbers using the given digits. [10]

1) 5,3,2,6. (2) 7,0,1,5. (3) 4,8,0,5. (4) 8,4,0,9. (5) 5,7,1,4. (6) 0,4,0,9.

Q.11 Addition.

(20)

1) Th H T O

(2) Th H T O

(3) Th H T O

(4) Th H T O

(5) Th H T O

1 5 0 2

2 3 4 6

1 7 0 0

1 2 4 8

3 5 7 1

+ 2 4 1 3

+ 5 2 1 3

+ 3 2 0 0

+ 2 6 1 0

+ 4 0 1 8

Q-12 discover the pattern and Write the missing number.

[20]

1- 201 203 205 207 _____

2- 120 125 130 135 _____

3- 270 290 310 _____

4- 207 317 427 _____

Q-13 Write each numeral as a sum of hundreds ,tens and ones.

[20]

(a) $579 = [] \text{ hundreds} + [] \text{ tens} + [] \text{ ones}$

(b) $798 = [] \text{ hundreds} + [] \text{ tens} + [] \text{ ones}$

(c) $503 = [] \text{ hundreds} + [] \text{ tens} + [] \text{ ones}$

(d) $273 = [] \text{ hundred} + [] \text{ tens} + [] \text{ ones}$

(e) $549 = [] \text{ hundred} + [] \text{ tens} + [] \text{ ones}$

Q-14 Tick () the numbers or numbers that Match each statement.

[20]

(a) There is 3 in the hundreds place. 3487 [] 1340 [] 2354 []

(b) There is 6 in tens place, 4625 [] 4060 [] 632 []

(c) There is 7 in the thousands place, 7490 [] 7373 [] 1730 []

(d) There is 0 in the ones place, 4490 [] 3093 [] 570 []

Q-15 Find the Sam.

[20]

(1) H T O

(2) H T O

(3) H T O

(4) H T O

6 8 5

5 1 4

5 4 1

4 0 0

+ 3 0 2

+ 2 7 3

+ 4 4 6

1 9 0

. Q-16 Fill in the blanks.

(10)

1) What number comes just before the product of the place value of 2 in 729 and the face value of



Gurunanak & Chandraketu Pandya English Medium School
Shri Rajanikant Vyas & Chandraketu Pandya English Medium Higher Secondary School
 (Pre-Primary, Primary, Secondary & Higher Secondary - Science and Commerce Stream)

Kumbhanath Society, Aavkar Hall Road, Maninagar, Ahmedabad-8. Ph. 25450086 • www.gnchool.com

STD:3SUB:GUJARTIS A 1.

MARKS:300

DATE

Q-1 ખાલી જગ્યા પૂરો

[[30]

- 1 આપણે _____ સ્નાન કરવું જોઈ
- 2 ક્યારે હમેશા _____ મા જ નખવો જોઈએ.
- 3 આપણે રોજ _____ ઓળવા જોઈએ
- 4 અપણે આપણી આસપાસ ની જગ્યા સાફ અને _____ રાખવી જોઈએ.
- 5 શરદી _____ કે છીકઆવે ત્યારે આપણે ચોખ્ખા રુમાલ દ્વારા કે નાક ઢાંકવું જોઈએ

Q-2 ખુદતા અક્ષર મુકી ખાલી જગ્યા લખો

[45]

- 1 મગન _____ જમ [ગરમ,ઠંડ]
- 2 છત પર _____ ચઢ [ઝડપટ, ધીમે]
- 3 નમન _____ કર [ભજન ,ભગત]
- 4 અમન _____ કર [નમન , નયન]
- [6]કવન _____ કર [કથા, ગાથા]
- [7]માલા _____ જપ [માળા ,માન]
- [8]માયા _____ લખ [કાજલ, કાગળ]
- [9]માનવ _____ ખા [ગાજર , દાડમ]
- [10] _____ તબલા વગાડ [માનસ,માનવ] _____ [
- [1.1] કમળ _____ ખા [કેળ, બદમ]
- [12] માયા _____ નો ચારો લાવ [ગાય,બળદ]
- [13] છાયાગાજરનો _____ બનાવ [હલવો,બરફી]
- [14] અમન _____ કર [નમન,નયન]
- [15] કલમપકડ _____ નહિ [કમળ,કલમ.]

પ્ર ૨ પ્રશ્નોના જવાબ લખો

[30]

- ૧ આપણે રોજ કેવો ખોરાક ખાવો જોઈએ ?૨ આપણે હમેશા કેવીરીતે બેસવું કે ઉભા રહેવું જોઈએ
- ૩ આપણે શાળા એ કયા સમયે પહોચી જવું જોઈએ ?૪ આપણે કેવા કપડા પહેરવા જોઈએ ?
- ૫ આપણે રાત્રે ક્યારે સુઈ જવું જોઈએ ?
- 6 પિતા જીના પિતા જી ને શું કહેવાય
7. પિતાજીના ભાઈ ને શું કહેવાય.
- 8 કાકાના દિકરા ને શું કહેવાય
- 9 આપણે રોજ ક્યારે બ્રશ કરવું જોઈએ

10. કચરો હંમેશા શેમાં નાખવો જોઈ.

Q-4સુંદર અક્ષરે લખો

[30]

બતક પકડ

મગન ભવન ચલ

કમળ પંકજ છે

કલમથી કમળ લખ

ગરમ ગરમ ચાખ

માલા માળ જપ

માનવ તબલા વગાડ

કમળ બદામ ખા

વાદળ વરસાદ આપ

માનસ ગાજર કાપ

કમળ બદામખા

આકાશ ચમચા ગણ

કમલ કજલ લાવ

માનવ તબલા વગાડ

માયા કાગળ લખ

૧ જોડકા જોડો

[30]]

કાગડો

Peacock

મોર

Crow

ચકલી

Ostrich

શાહમૃગ

Sparrow

કબુતર

Vulture

ગીધ

Pigeon

પોપટ

Swam

હંસ

Parrot

લક્કડખોદ

Owl

ધુવડ

Woodpecker

જિરાફ

Monkey

વાંદરો

Giraffe

વાઘ

Lion

ગેડો

Tiger

સિંહ

Rhinoceros

હાથી

Fox

શિયાળ	Zebra
ઝીબ્રા	Elephant
રીછ	Deer
હરણ	Bear

પ્ર ૩ ખરા ખોટા લખો

[30]

૧. શિયાળ નાં બચ્ચા ને ગલ્ફ ળી યૂ કહેછે []
૨. ઘોડા ના બચા ને વાછરડુ કહે છે []
૩. ઘેટા ના બચાને ગાડરુ કહે છે []
૪. બકરી ના બચાને લવારુ કહેછે []
૫. બિલાડી નાં બચ્ચા ને બિલાડું કહેછે []
૬. આપણે શાળા નું ઘરકામ રવિવારે કરવું જોઈએ []
૭. શાળા માં મોડા પહોંચિએ તો નાં ચાલે []
૮. રાત્રે વહેલા સુંઈ જવું []
૯. આપણે રોજ સવારે થોડું ચાલવું જોઈએ []
૧૦. આપણે રોજ કસરત કરવી જોઈએ []

પ્ર ૩ જોડકા જોડો

[૧૮]

- | | |
|-----------|----------|
| ૧. બકરી | ગાડરુ |
| ૨. ઘેટું | વછેરુ |
| ૩. ગધેડું | લવારું |
| ૪. ઘોડો | વાછરડુ |
| ૫. હાથી | ખોલકું |
| ૬. ગાય | ગલ્ફડીયુ |
| ૭. ભેસ | મીદડુ |
| ૮. બિલાડી | મદનીયુ |
| ૯. કુતરો | પાડરું |

Q-4 સુંદર અક્ષરે લખો

[20]

- માછલી પાણી માં તરે છે _____
- દિવાળી દીપક નો તહેવાર છે _____
- સરકારી અધિકારી છે _____
- મહારાની ખાનદાની મનમાની છે _____
- રાજા ની દિકરી છે _____
- માલી બગીચા માં છે _____
- રાજકુમારી રાજા ની દિકરી છે _____

પ્ર ૫ ચિત્રજોઈનામલખો

[25]

1. _____

5

2 _____

6 _____

3 _____

7 _____

4 _____

8 _____

9 _____

10 _____



Gurunanak & Chandraketu Pandya English Medium School

Shri Rajanikant Vyas & Chandraketu Pandya English Medium Higher Secondary School

(Pre-Primary, Primary, Secondary & Higher Secondary - Science and Commerce Stream)

Kumbhanath Society, Aavkar Hall Road, Maninagar, Ahmedabad-8. Ph. 25450086 • www.gnchool.com

Sub-Cambridge

Std-3rd

F.A-2 EXAM

Date

Marks- 140

Q-1 Fill in the blanks with WHO, WHICH, WHEN, WHET: [20]

1- _____ will he come?

2- _____ movie did you watch on Sunday?

3- _____ is your name?

4- _____ are you doing?

5- _____ is shouting?

6- _____ will to came to my home?

7- _____ won the game?

8- _____ is at the gate?

Q-2 Fill in the blanks with WAS, WERE, THERE WAS, THERE WERE: [20]

1- Tenali Rama _____ a wise minister.

2- last Friday _____ holiday.

3- _____ a fat cow under the tree.

4- the children _____ playing in the park.

5- _____ many birds and animals in the forest.

Q-3 Choose the correct option:

[20]

1- She _____ English.

a) speaks

b) speak

2- The sun _____ in the west

a) set

b) seat

3- Our School _____ at 8:30 in the morning.

a) begin

b) begins

4- Jaggery _____ sweet.

a) is

b) are

5- We _____ television during weekends.

a) watch

b) watches

6- My father washes _____ our car on Sunday.

a) wash

b) washes

Q-4 Choose the present continuous form of verb:

[10]

1- The boys _____ in the pool.

a) are swimming

b) swims

2- Sunny _____ a story.

a) is reading

b) are reading

3- I _____ village scene.

a) am drawing

b) is drawing

4- Raj and Rohan _____ to the lack.

a) are going

b) is going

Q-5 Rearrange the letters to make a word:

[10]

1- rnai

2- lebl

3- tars

4- hspi

5- alts

Q-6 Complete each of the word: [10]

[father, ball, room, bird, fish]

1- star

2- grand

3- black

4- foot

Q-7 Complete each word by joins any of the two words: [10]

1- match port box

2- over shell coat

3- stand box mail

Q-8 Choose the correct options: [20]

1- I _____ fruits in the market [sell/ shell]

2- There are _____ apple. [for/ four]

3- I am going _____ the park. [to/ two]

4- The _____ rises in the east. [son/sun]

5- Did you _____ that roar. [here/ hear]

Q-9 Complete each word. Use these letter patterns. [10]

[cl cr dr tw wh ck th sw]

1- du_____ 5- _____ rone

2- _____ istle 6- _____ ing

3- _____ ock 7- _____ enty

4- _____ eam 8- _____ um

Q-10-Complete each sentence. [10]

[happy tree dinner glass apple egg]

1- The banyan is a huge _____.

2- if you drop a _____ it will break.

3- My hen laid an _____

4- Rohit is sad but Rani is _____

5- We are having fish for _____

6- An _____ is a fruit.



Gurunanak & Chandraketu Pandya English Medium School

Shri Rajanikant Vyas & Chandraketu Pandya English Medium Higher Secondary School

(Pre-Primary, Primary, Secondary & Higher Secondary - Science and Commerce Stream)

Kumbhanath Society, Aavkar Hall Road, Maninagar, Ahmedabad-8. Ph. 25450086 • www.gnchool.com

STD-3RD

SUB-COMPUTER

SA1 EXAM

Total MARKS: 300

Q-1 Tick [] the correct option. [50]

1-The small pictures with names on a desktop are called _____.

[] icons [] graphs [] applications

2- The Start button is located on a _____.

[] Taskbar [] Title bar [] Status bar

3- Windows is a type of _____.

[] system software [] application software [] Hardware

4- _____ is the background screen of windows.

[] Wallpaper [] Screen saver [] Desktop

5- _____ button shrinks the windows from the screen to the Taskbar.

[] Minimize [] Restore [] Close

6- MS use is a computer program for _____.

[] Watching movies [] drawing and painting [] storing work

7- We use _____ tool to draw a polygon.

[] [] []

9- We use _____ tool to draw a curved line.

[] [] []

10- To close an MS paint program, select Close option from the _____ menu.

[] Home [] View [] Paint

11- Instructions and commands given to a computer are called _____.

[] storage devices [] outputs [] inputs

12- A computer accepts, examines calculates the result. This is called _____.

[] printing [] processing [] scanning

13- Which computer are used for weather forecasting ? _____

[] Supercomputer [] Microcomputer [] Minicomputer

14- _____ are very small and known as personal computers.

[] Mainframe computer [] Minicomputer [] Microcomputer

15- A computer is a machine that works on the principal of _____ cycle.

[] IPO [] POI [] OPI

16-Mouse and CPU are examples of_____.

☐ hard ware ☐ software ☐ windiws

17- MS Paint is an example of_____.

☐ hardware ☐ software ☐ windows

18- A software cannot be_____.

☐ touched ☐ used ☐ operated

19- Which of the following is not a word processing program?

☐ MS Word ☐ Windows 7 ☐ AppleWorks

20_____ is the main software program of a computer that helps it to run and perfrom all its tasks.

☐ CU ☐ ALU ☐ MU

Q-2 Write true ☐ or false ☐ [30]

1- Microsoft Windows is the least commonly used operating system. ☐

2- The icons on a desktop represent programs, files or folders. ☐

3- When you switch on a system, a message 'Starting Windows' appears. ☐

4- We cannot open two windows at a time.

5- Windows XP is not as secure as Windows 7. ☐

6- Some hardware parts of a computer are ot visible to us.

7- Shift key is the longest key on a keyboard.

8- There are four control

Q-3 Define the following. [10]

1- Desktop 2- Taskbar 3-Folder

Q-4 Match the Following columns. [8]

Column A

Columns B

1- [a] Maximize button

2- [b] Minimize button

3- [c] Close button

4- [d] Restore button

Q-5Fill in the blanks with the correct words. [30]

1- A _____ is the background picture on the desktop.

2- A file can be_____,_____ or _____.

3- An icon opens in a new _____ when we double-click on it.

4- _____ themes can be implemented in them.

5- The Start button appears on left side of a _____.

6- Title bar shows the _____ of a program.

7- Folders keep the files _____ by grouping them.

8-Microsoft Windows is called a _____.

9- _____ is visible outside the CPU.

10- The physical parts of a computer are called _____.

11- _____ is the set of instructions to a computer.

12- MS paint and MS Word are examples of _____ software.

13- _____ are the most powerful computer.

14- _____ are mostly used for scientific research purposes.

15- _____ are used in cricket scoreboards.

Q-6 Identify and name the following tools. [10]

1- _____ 2- _____

3- _____ 4- _____

5- _____

Q-7 Complete the steps. [12]

1- Steps to save your drawing in

[a] Click on the _____ menu.

[b] Click on the _____ option.

[c] A _____ box will appear on screen.

[d] Type the _____ name.

[e] Choose a location for the in the _____ box.

[f] Click on the _____ button to save the file.

2- Steps to open a saved drawing in paint:

[a] Click on the _____ menu.

[b] The _____ box appears.

[c] Choose the _____ option.

[d] Click on the _____ button to open the file.

[e] Select your _____ form the list.

[f] Select the location of the file in the _____ box.

Q-8 Unscramble the following words. [20]

1- MUPCOTRE _____

2-POCRSINGES _____

3- OCPMOTERUMICR _____

4- PATLOP _____

5- OPUTUT _____

Q-9 Arrange the following computer in sequence according to their size. [10]

Minicomputer Microcomputer Supercomputer Mainframe computer

1. _____ 2. _____ 3. _____ 4. _____

Q-9 Guess who am i [20]

1- I am a smart electronic machine.

2. I am the most commonly used computer.

3- I am the most powerful computer.

4- I am an instruction given to a computer.

5- I am the processed data.

Q-10 Write the total number of the following types of keys in a keyboard. [10]

1- Function keys [] 2- Alphabet keys [] 3- Number keys [] 4- Arrow keys [] 5- Enter keys []

Q-11 Write the full from of the following abbreviations. [10]

1- CPU _____

2- ALU _____

3- ROM _____

4- RAM _____

5- CD-ROM _____

Q-12 Give two examples of each. [10]

1-Database Software _____

2- Word Processing Software _____

3- Multimedia Software _____



Gurunanak & Chandraketu Pandya English Medium School

Shri Rajanikant Vyas & Chandraketu Pandya English Medium Higher Secondary School

(Pre-Primary, Primary, Secondary & Higher Secondary - Science and Commerce Stream)

Kumbhanath Society, Aavkar Hall Road, Maninagar, Ahmedabad-8. Ph. 25450086 • www.gnchool.com

Std:3 Sub: Env

SA1

Total MARKS:

300

Q-1 Fill in the blanks.

[50]

- 1- Tissues are made up of _____.
- 2- Different tissues form an _____.
- 3- Organs responsible for sensing things are called _____.
- 4- The _____ system throws out the waste from the body.
- 5- Food is one of our basic _____.
- 6- Potatoes and bananas are sources of _____.
- 7- Honey is made from the _____ of flowers.
- 8- A Balanced diet is one that contains all the _____.
- 9- All living things need _____ to live.
- 10- Water should be made _____ for drinking.
- 11- _____ is the main source of water.
- 12- We need to store water as it is _____.
- 13- We must store Water in _____ containers.
- 14- Our _____ help us to perform various activities.
- 15- We should _____ old people.
- 16- We should not make _____ of physically challenged people.
- 17- Our elders become _____ with age.
- 18- We pay tribute to our _____ on the independence Day.
- 19- We sing _____ songs on our national festivals .
- 20- The annual function is also called _____ in some schools >
- 21- On birthdays , we organise a _____ and invite our _____.
- 22- We cut a _____ on birthdays.
- 23- A _____ in the house is a very big occasion to celebrate.
- 24- A party is organised to _____ the buying of a new house.
- 25- Family is a _____ of people who are related to each other and live _____.
- 26- A small family is also known as a _____ family.
- 27- all the family members gather together on _____.

Q-2 Write the functions of the:

[20]

- 1- Excretory system
- 2- Respiratory system
- 3- Nervous system
- 4- Digestive system

Q-3 Write 'T' for true and 'F' for False.

[30]

- 1- Food provides us energy to do work.
- 2- Fast help our body to grow.
- 3- Food should not be kept covered.
- 4- Food should be rich in Vitamins to protect us from diseases.
- 5- We always eat cooked food.
- 6- Water is Precious.
- 7- We should not store water.
- 8- We should boil water kill germs.
- 9- We should turn off the tap after use.
- 10- We eat leaves of this plant.

11- Milk is obtained from.

Q-4 Match the following.

[50]

- 1- Ice
- 2- Drinking water
- 3- Water vapour
- 4- River
- 5- Drinking water
- 6- Rainwater harvesting
- 7- Using drinking water to wash a car
- 8- Leaking taps
- 9- Independence day
- 10- Republic Day

- [a] source of water
- [b] liquid
- [c] solid
- [d] gas
- [e] wastage of water
- [f] clean and pure
- [g] repair quickly
- [h] sloping roof
- [i] 26th January
- [j] 5th September

- 11- Teachers Day
- 12- Childrens' Day
- 13- Gandhi Jayanti
- 14- Eyesight
- 15- Ear
- 16- Sick
- 17- Blind

- [k] 2nd October
- [l] 15th August
- [m] 14th November
- [n] Braille
- [o] medicines
- [p] hearing aid
- [q] spectacles

Q-5 Name the system used for the following.

[20]

- 1- Breathing_____
- 2- Reproducing_____
- 3- Giving shape to the body_____
- 4- Breaking food_____

Q-6 Answer the following question.

[50]

- 1- What are cells?
- 2- Name the sense organs of the body.
- 3- Why do living need food?
- 4- What is a balanced diet?
- 5- Why do we cook food?
- 6- Write is precious.
- 7- We need to store rainwater.
- 8- We must save, purify and reuse water.
- 9- How is water made suitable for drinking?
- 10- Why is earth known as the 'blue planet'?
- 11- What is a family?
- 12- What do you understand by the term 'joint family'?
- 13- What things do the members of a family share together?
- 14- What are hereditary features?
- 15- Who are twins?
- 16- What do we learn from our family members?
- 17- How do you celebrate your birthday?
- 18- How do you celebrate a wedding in the family?
- 19- What are the important occasions that we celebrate in a family?
- 20- What do you understand by community singing?
- 21- What are the different festivals celebrated in the school?
- 22- When and why do we celebrate Teachers' Day?
- 23- When and why do we celebrate Children's Day?
- 24- What is the importance of Sports Day?

25-What is Braille?

26- Who is a deaf person?

27- How can a dumb person express his feelings?

Q-7 Tick[] the correct statements and cross[] out the incorrect ones. [50]

1- I am a part of my family.

2- We should obey and respect our elders.

3- All the family members participate in wedding celebrations.

4- I should not help my mother at home.

5- Husband of father's sister is called uncle.

8- We celebrate our birthday with friends and relatives.

9- People wish a birthday boy celebrated to have fun with friends.

10- Many rituals are performed before a wedding.

11- Community singing develops a feeling of togetherness in us.

12- We sing various patriotic songs on our national festivals.

13- Pt. Jawaharlal Nehru was the first Prime Minister of India.

14- Dr. s. Radhakrishna was the first President of India.

15- Dr. s. Radhakrishna was a teacher?

16- We eat leaves of this plant.

17- Milk is obtained from:

18- Which of the following is a cereal?

19- Children's Day is celebrated on the birthday of Mahatma Gandhi.

20- Celebration are fun and bring our family members and friends together.

Q-8 Encircle [] the add one out. [30]

1- Blind Deaf Braille Dumb

2- Ear Eyes Nose Sing Language

3- Blind Deaf Dumb Doctor

4- Blood Heart Circulation Brain

5- Eyes Ears Nose Stomach

6- Nose Ears Lungs Windpipe

7- Mouth Intestine Stomach Brain

8- River mountain lake pond

9- Bathing cooking swimming combing

10- ice water water vapour petrol

11- fish octopus monkey duck



Gurunanak & Chandraketu Pandya English Medium School

Shri Rajanikant Vyas & Chandraketu Pandya English Medium Higher Secondary School

(Pre-Primary, Primary, Secondary & Higher Secondary - Science and Commerce Stream)

Kumbhanath Society, Aavkar Hall Road, Maninagar, Ahmedabad-8. Ph. 25450086 • www.gnchool.com

Std :- 3rd

Subject:- Aptitude

Date :-

marks

Q1. Tick the right choice. [20 marks]

1. Summer: cooler :: winter : ? _____

a) Heater b) Washing machine c) coat d) Fridge

2. Water: Glass:: Tea: ?

a) tea pot b) cup c) saucer d) tray

3. Shuttle cock : cone :: Globe : ? _____

a) Circle b) cube c) cuboids d) sphere

4. Circle: Cub: cone :: match box :? _____

a) square b) sphere c) cuboids d) sphere

5. Earthworm: crawl:: Crow? _____

a)fly b) swim c) dance d) sleep

Q2. Tick from the answer set which come next. [10 marks]

1	A	C	E	G
2	A	Z	B	Y
3	P	Q	R	S
4	AB	BC	CD	DE
5	AB	BD	CE	DF

H	J	K	I
C	X	D	N
T	O	U	Z
FG	EF	DG	GH
FE	EF	FH	EG

Q3. Fill in the boxes [5 marks]

1	AB	CD		GH	IJ	KL		OP
2								
3								
4								
5								

Q4. Give next two for each of the following [20 marks]

1	A	A	B	B	C	C		
2	X	Y	X	Y	X	Y		
3	100	110	120	130	140	150		
4	901	802	703	604	505	406		
5	109	208	307	406	505	604		

1- Some girls are standing in a line facing the camera. Sonali is Third from the left. How many girls are standing to her left?

2- Seven boys are standing in a line. Mohit is third from the right. What is his Position from the left?

3-100[3] 200 200[6]400 500[7]200 300[]600

2,20 3,30 6,60 9,90

4-[200] [300] [600]

5-This figure is a hexagon (6-sided figure). It has 9 dots in it. Draw three straight line segments inside it to divide the dots equally.

Repeating Patterns – 1

Tick (✓) from the answer figures which comes next.

Problem Figures

Answer Figure

1.



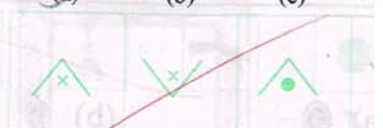
2.



3.



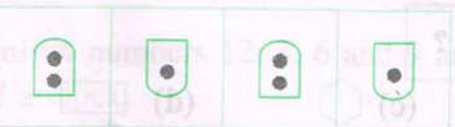
4.



5.




6.



7.



8.







































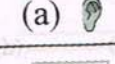























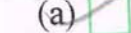



PART - B : NON-VERBAL APPTITUDE

8

ANALOGY

Analogy (Objects)

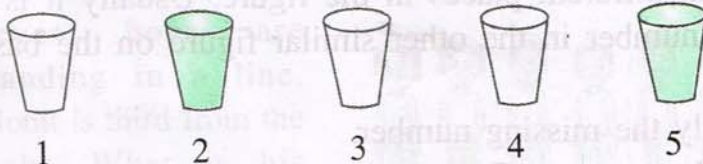
Tick (✓) the right choice.

1.  :  ::  : 
 (a)  (b)  (c)  (d) 
2.  :  ::  : 
 (a)  (b)  (c)  (d) 
3.  :  ::  : 
 (a)  (b)  (c)  (d) 
4.  :  ::  : 
 (a)  (b)  (c)  (d) 
5.  :  ::  : 
 (a)  (b)  (c)  (d) 
6.  :  ::  : 
 (a)  (b)  (c)  (d) 
7.  :  ::  : 
 (a)  (b)  (c)  (d) 
8.  :  ::  : 
 (a)  (b)  (c)  (d) 


7

PUZZLE TIME

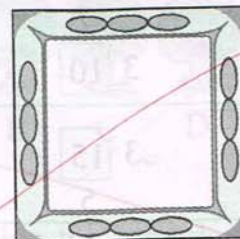
1. Out of these six glasses, three contain coke and three contain



Just by exchanging a pair of glasses can you make it look like



2. You are given two square photoframes.



Can you put them in a way so that they form three squares

3. Only 4 numbers 12, 3, 6 and 9 are written on the face of a clock.

Draw a dotted line on the face of the clock so that sum of numbers on each side is equal.

4. This figure is a hexagon (6-sided figure). It has 9 dots in it. Draw three straight line segments inside it to divide the dots equally.

10

CLASSIFICATION

Classification (Objects)

Cross (X) out the odd one.

1.



(a)



(b)



(c)



(d)



(e)

2.



(a)



(b)



(c)



(d)



(e)

3.



(a)



(b)



(c)



(d)



(e)

4.



(a)



(b)



(c)



(d)



(e)

5.



(a)



(b)



(c)



(d)



(e)

6.



(a)



(b)



(c)



(d)



(e)

7.



(a)



(b)



(c)



(d)



(e)

8.



(a)



(b)



(c)



(d)



(e)



Gurunank & Chandraketu Pandya English Medium School
Shri Rajanikant Vyas & Chandraketu Pandya English Medium Higher Secondary School
 (Pre-Primary, Primary, Secondary & Higher Secondary - Science and Commerce Stream)

Kumbhanath Society, Aavkar Hall Road, Maninagar, Ahmedabad-8. Ph. 25450086 • www.gnchool.com

STD-3RD SUB-HINDI S.A – 1 EXAM DATE- MARKS-300

प्र-१ सही उत्तर चुनकर सही का निशान लगाइए।

[५०]

- १- सोनाली कहा से पत्र लिख रही है? [] नंद नगरी से [] नन्दन वन से [] नन्द गाय से
- २- सोनाली के नानी नाना कहा रहते हैं? [] गावसे [] शहर में [] विदेश में []
- ३- गाव में किसका मन लग गया? [] सिमी का [] सोनाली का [] दोनों का
- ४- कोन बिस्तर से उठकर मंजन करने लगा? [] दादाजी [] अमन [] पिताजी
- ५- तब अमन किसके पास गया? [] माँ के पास [] पिताजी के पास [] दादाजी के पास
- ६- तीनों मित्रों के साथ क्या कर रहे थे? [] पढ़तीथे [] खेलते थे [] दोनों ही बातें
- ७- उनके पड़ोस में कोन आए? [] शर्मा जी [] वर्मा जी [] माथुर जी
- ८- राहुल ने बीनू को गेंद के साथ और क्या पकड़ाया? [] फुल [] किताब [] एक कागज
- ९- किसने अंत में क्षमा मागी? [] राहुल ने [] तीनों मित्रों ने [] सबने
- १०- सूरज कब उगता है? [] सवेरे [] रातमें [] शाम में
- ११- असमान में चाँद कब चमकता है? [] दिन में [] दोपहर में [] रातमें
- १२- यह धरती कैसी है? [] बहुत छोटी [] बड़े से गोले के सामान [] चोकोर
- १३- सूरज कहा चमका? [] धरती [] आसमान [] घर
- १४- सुबह होने से अँधेरा कहा से मिट जाता है? [] आसमान से [] बगीचे से [] सब जगह से
- १५- धरती का कोना कोना कब जाग उठा? [] सूरज के आने [] चाँद के आने [] दिन ढलने
- १६- खेल दिवस पर क्या होताहै? [] तरह तरह के खेल होते हैं [] भास होते हैं [] दोनों ही बातें
- १७- काम्या ने किस दोड़ में भाग लिया? [] बोरी दोड़ [] मेदक दोड़ [] चमच नौबू वाली दोड़
- १८- रूपा क्या लाई? [] खिलौना [] पुस्तक [] फूलदान []
- १९- शोशा कोण लाई? [] रूपा [] रूपा की माँ [] रूपा की बहन
- २०- राजा मिदास के पास किसका भंडार था? सोने के गहने का [] अनाज का [] कीमती कपड़ों का
- २१- राजा भूखा क्यों रह गया? वह जिस चीज को हाथ लगता ,सब सोने की हो जाती [] निकर ने राजा को खाना नहीं दिया [] राजा मिदास सुबह देर से उठा
- २२- राजा कुब रोने लगा? जब उसे भूख लगी [] जब उसकी बेटी सोने की मूर्ति बन गई [] जब सोने के गहने कम होने लगे []

प्र-२ प्रश्नों के उत्तर लिखिए।

[६०]

- १- गाव में कोन कोन से खेत है?
- २- गुड किससे बनता है?
- ३- किसने, कहा से और किसे पत्र लिखा है?
- ४- टंकी का सारा पानी कैसे खत्म हो गया?
- ५- बीनू द्वारा गेंद मागे जाने पर राहुल ने क्या किया?
- ६- कागज पड़कर तीनों कुछ बोल क्यों न सके?
- ७- आप उन मित्रों की जगह होते तो क्या करते?
- ८- बच्चा अपनी माँ क्या पूछ रहा है?
- ९- माँ ने उसे क्या समझाया?

- १०- आपस में लड़ना अच्छी बात क्यों नहीं है ?
- ११- राजा मिदास क्या कहता था ?
- १२- देव दूत ने उसे कए वरदान दिया ?
- १३- राजा मिदास को लालच की सजा कैसे मिली ?
- १४- देवदूत ने अपना वरदान वापस क्यों लिया ?
- १५- इस चित्र कथा से आपको क्या शिक्षा मिलती है ?
- १६- कविता मई बचो से क्या करने को कहा गया है ?
- १७- आसमान में सूरज के निकल आने पर क्या क्या होता है ?
- १८- सूरज निकलने पर भी सोना ठीक क्यों नहीं है ?
- १९- आलस कियो त्याग देना चाहिये ?
- २०- सभी बचे बस्ता क्यों नहीं ले जा रहे थे ?
- २१- काम्या किस दोड़ में प्रथम आई ?
- २२- काम्या के स्कूल मई सबसे मजेदार दोड़ कोण सी थी ?
- २३- खेलने से क्याक्या लाभ होते हैं ?
- २४- रूपा की माँ की कोण सी बुरी आदत थी ?
- २५- अखिल कहा खेल रहा था ?
- २६- रूपा की माँ ने सीसे से क्या किया ?
- २७- रूपा को माँ की कोण शी बात समझ मई आ गई ?
- २८- अपने गुस्से को काबू मे रखना क्यों जरूरी है ?
- २९- तीनों मित्रों को ऐसा कियो लगा की घमंडी राहुल नहीं , बल्कि वे खुद हैं ?
- ३०- आप उन मित्रों की जगह होते तो क्या करते ?

प्र-३ वाक्य पढ़कर सही [] या गलत [] का निशान लगाए । [२०]

- १- सोनाली को नाना का गावं अच्छा खाना बहुत अच्छा लगता है । []
- २- गाँव में सरसों का खेत नहीं है । []
- ३- सोनाली को क्या रियों से मुली और गाजर उखाड़कर खाना बहुत अच्छा लगता है । []
- ४- ताजा गुड़ खाना वे स्वाद लगता है । []
- ५- गावं में सोनाली को अपनी सहेलियों की बिलकुल याद नहीं आई । []
- ६- काम्या सुबह जल्दी उठी/ []
- ७- आज काम्या स्कूल मई बाल दिवस है । []
- ८- काम्या ने मेढक दोड़ में भाग लिया । []
- ९- बोरी दोड़ मई बचो ने भाग नहीं लिया । []
- १०- बहुत से बचो ने इनाम जीते । []

प्र-४ विलोम शब्द लिखिए । [५०]

- | | | | | | | |
|-----------|-----------|------------|-----------|-----------|-----------|----------|
| १. ताजा - | २- गावं- | ३- दिन- | ४- बंद - | ५- अच्छा- | ६- गलत- | ७- लाभ- |
| ८- दुःख- | ९- मित्र- | १०- कीमती- | ११- प्यार | १२- रोना | १३- आना | १४- अपना |
| १५- राजा | १६- असली | १९- भलाई | २०- बेजान | २१- उदास | २२- प्रकट | २३- पत्र |
| | | | | | २४- आनंद | २५- माता |

प्र-५ वाक्यों के खाली स्थान भरिये ।

[२०]

[झुका पछताना नहाने खत्म बूंद- बूंद सोने वरदान चीज भलाई लालच प्रकट]

- १- टंकी का सारा पानी _____ हो गया ।
- २- अमन ने अपना सिर _____ लिया ।
- ३- फव्वारे से _____ में ज्यादा पानी खर्च होता है ।
- ४- अगर पानी यूँ ही खराब होता रहा , तो एक दिन हम सबको _____ पड़ेगा ।
- ५- पानी की _____ कीमती है ।
- ६- एक रात अचानक मिदास के सामने एक देवदूत _____ हुआ ।
- ७- हे राजन । आज से तुम जिस _____ को भी छुओगे, वह _____ की हो जाएगी ।
- ८- भगवन । आप अपना _____ वापस ले लीजिये ।
- ९- _____ मनुष्यों को अँधा बना देती है ।
- १०- इसके बाद राजा ने अपने _____ के भंडार को प्रजा की _____ में लगा दिया।

प्र-६ पर्यावाची शब्द लिखिए । [२०]

- | | | | | |
|---------|-----------|----------|---------|------------|
| १-माँ- | २-सुवह | ३- सूरज- | ४- रात- | ५- धरती- |
| ६-पत्र- | ७- आनन्द- | ८- माता- | ९-भूल- | १०- मित्र- |

प्र-७ काव्य पंक्तियाँ पूरी कीजिए । [१०]

मेरे बेटे,-----,
यह-----गोला ।
-----चमकता ,

प्र-८ नीचेके वाक्यों को देख कर लिखिए । [२०]

- १-नल 'में' पानी नहीं आ रहा है ।
- २-अब मैं क्या करूँ ?
- ३-पानी की बूंद-बूंद कीमती है ।
- ४-उसने नल बंद नहीं किया ।
- ५-पानी को सोच समझकर खर्च करो ।
- ६- गावँ में सरसों के खेत नहीं हैं
- ७- सोनाली को क्यारियों से मुली और गाजर उखाड़कर खाना बहुत अच्छा लगता है ?
- ८-ताजा गुड़ खाना बेस्वाद लगता है ।
- ९- गावँ में सोनाली को अपनी सहेलियों की विलकुल याद नहीं आई ।

प्र-९ एक से अनेक बनिए । [२०]

- | | | | | | | | | | |
|-------------|----------|---------|---------|---------|-----------|---------|---------|---------|----------|
| १- कुर्सी - | २- गहना- | ३- रोटी | ४- कमरा | ५- बेटी | ६- मूर्ति | ७- खुशी | ८- तोता | ९- पंखा | १०-लड़का |
|-------------|----------|---------|---------|---------|-----------|---------|---------|---------|----------|

प्र-१०- एक शब्द मई उत्तर दीजिये । [२०]

- १- एक दिन रूपा क्या लाई?
- २- गुस्से से रूपा की आँखें कैसे हो गई ?
- ३- माँ ने उसे क्या दिखाया ?
- ४- रूपा का चेहरा गुस्से में कैसा दिख रहा था ?
- ५- अब रूपा ने किस पर कावू करना शुरू किया ?

प्र-११शब्दों से वाक्य बनाये । [१०]

- | | |
|-------------|------------|
| १- नमस्ते - | २- प्रसन - |
| ३- याद- | ४- सहेली - |
| ५- गावँ - | |

