



Gurunanak & Chandraketu Pandya English Medium School

Shri Rajanikant Vyas & Chandraketu Pandya English Medium Higher Secondary School
(Pre-Primary, Primary, Secondary & Higher Secondary - Science and Commerce Stream)

Kumbhanath Society, Aavkar Hall Road, Maninagar, Ahmedabad-8. Ph. 25450066 • www.gnscschool.com

STD-3RD

SUB-MATHS

S.A. 2

MARKS: 300

Q-1 Time now is.

[a] [11:00] What was the time half an hour ago? _____ [10]

[b] [7:35] What time will it be 15 minutes from now? _____

[c] [12:20] What was the time 5 minutes ago? _____

Q-2 Tick [] the correct answer.

[10]

1- Our summer holidays this year begins on 20 May, and we return to school on 4, July for how many days are we on holidays?

[a] 50days [b] 44days [c] 46 days [d] 45days

2- Which of the following is not a leap year?

[a] 1992 [b] 1984 [c] 2028 [d] 2042

3- A competition lasted 115 minutes. It lasted

[a] 1h 40 min [b] 1h 55 min [c] 1h 45 min [d] 1 h 50 min

4- The top of a table is a [plane/curved] surface.

5- The egg has a [plane/curved] surface.

6- The globe has a [plane/curved] surface.

7- The blackboard has a [plane/curved] surface.

8- The book has a [plane/curved] surface.

Q-3 Fill in the blanks.

[10]

1- A point shows a definite _____

2- A line segment has _____ end points.

3- The initial of a ray is called its _____

4- AB _____ BA.

5- A square has _____ sides and _____ corners.

6- A triangle has _____ sides and _____ vertices.


7- _____ sides of a rectangle are equal.


8- A _____ has no corners.

9- All the sides of a square are _____.

10- The diagonals of a square are _____.

Q-4 find the pattern in each and complete it.

[a]  _____ [20]

[b]  _____

[c] 0, 2, 4, 6, _____

[d] 24, 22, 20, 18, _____

[e] 27, 25, 23, 21, _____

[f] 7, 9, 11, 13 _____

[g] 5, 10, 15 _____

[h] 12, 24, 36 _____

[i] 7, 14, 21, _____

[j]  _____

- Q. 5. Given below is the table showing the favourite summer vacation activity of students of class 3. Use the information to draw a pictograph.

Activity	Swimming	Reading	Crafts	Hiking	Sightseeing
Number of Students	45	30	25	15	60

Take ☺ = 5 students as the key.





- Q. 6. The number of animals in a zoo are given in the following table.

Tigers	Elephants	Giraffes	Bears	Deer	Lions
10	15	3	6	12	3

Draw a pictograph to show the above information by taking the key as: 🐘 = 3 animals

- Q. 7. The pictograph given below displays the sports played by class 3 students at a school.

Sports played by class 3 students

Football	
Cricket	
Badminton	
Swimming	

Key: 🏠 = 10 students

Use the pictograph to answer the following questions:

- Which is the most popular sport among class 3 students? _____
- Which is the least popular sport? _____
- How many more students play football than badminton? _____
- How many students play cricket? _____
- How many students in all are there in class 3? _____

- Q.8. Write the fraction for each of the following.
- Three out of 5 fruits are mangoes.
 - Five out of every 8 students in Mrs Singh's class are boys.
 - Three out of every 10 children in the school, their lunch in the school canteen.
 - Eight out of every 25 children in the school, are day scholars.
 - Peter could answer correctly 9 out of 10 questions in the mathematics test.
 - Ajay spent 3 rupees out of the 8 rupees that he had.

Q.9. Tick (✓) the correct answer. [20]

1. Priya has 9 picture frames. She put pictures in 4 of the frames. What fraction of the frames have pictures in them?

(a) $\frac{9}{4}$ (b) $\frac{5}{9}$ (c) $\frac{4}{9}$ (d) $\frac{4}{3}$
2. Sandy wants to shade $\frac{2}{3}$ of a shape. He has already shaded 4 squares. How many more squares does he need to shade?

(a) 6 (b) 2 (c) 4 (d) 8
3. $\frac{2}{3}$ of 15 marbles shown here =

(a) 6 (b) 10 (c) 9 (d) 8
4. The width of your index finger is about 1 cm.
5. It takes about 10 minutes to walk 1 km.
6. The most appropriate units of measurement for measuring the height of a tree is m / cm / Km.

Q.10 [A] Addition :-

- (a) $35\text{ L } 482\text{ mL} + 219\text{ L } 730\text{ mL} + 2\text{ L } 89\text{ mL}$
 (b) $375\text{ L } 803\text{ mL} + 135\text{ L } 4\text{ mL} + 13\text{ L } 200\text{ mL}$
 (c) $2103\text{ L} + 7\text{ L } 159\text{ mL} + 259\text{ L } 903\text{ mL}$
 (d) $130\text{ L } 521\text{ mL} + 67\text{ L } 680\text{ mL } 12\text{ L } 25\text{ mL}$

→ [B] Subtraction :-

- (a) $317\text{ L } 600\text{ mL} - 208\text{ L } 769\text{ mL}$
 (b) $264\text{ L } 315\text{ mL}$ from $431\text{ L } 678\text{ mL}$

→ [C] Multiply :-

- (a) $7\text{ L } 390\text{ mL}$ by 2, 5, 7, 8 (b) $231\text{ L } 412\text{ mL}$ by 27

Q.11 [A] Fill in the boxes.

[20]

- (1) $5\text{ m} = []\text{ cm}$ (5) $312\text{ g} = []\text{ g}$
 (2) $1\text{ L} = []\text{ mL}$ (6) $2000\text{ mL} = []\text{ L}$
 (3) $2000\text{ g} = []\text{ kg}$
 (4) $500\text{ cm} = []\text{ m}$

[B] Compare write $<$ $>$ or $=$ in each.

- (1) $80\text{ cm} [] 1\text{ m}$ (4) $1500\text{ m} [] 2\text{ km}$
 (2) $1\text{ kg} [] 990\text{ g}$ (5) $2\text{ L} [] 1800\text{ mL}$
 (3) $500\text{ cm} [] 5\text{ m}$ (6) $1000\text{ g} [] 10\text{ kg}$

Q.12 word Problems.

[10]

- (1) Savita has ₹. 65. How much money will have left if she spends ₹. 26.30 for a book?
 (2) Rekha had ₹. 500 when she went shopping now has ₹. 75.25 when she returned home. How did she spend on shopping?
 (3) Nakul saw an encyclopedia marked at ₹. 300.00 has ₹. 210.85. How much more money does he need to buy the encyclopedia?
 (4) Rakesh buys an eraser for 75 paise and a pencil for 80 paise. How much does he spend in all?
 (5) A family shops for ₹. 345.55 in the first week and spends ₹. 689.65 in the following week. How much was spent over the two weeks?

Q. 13 Draw pictograph too the number of player in team for each of the sports give in the table below
 Take ☺ = 2 players

Sport	Tennis	Cricket	Basketball	Ice Hockey	Football
Number of players in a team	2	11	5	6	11

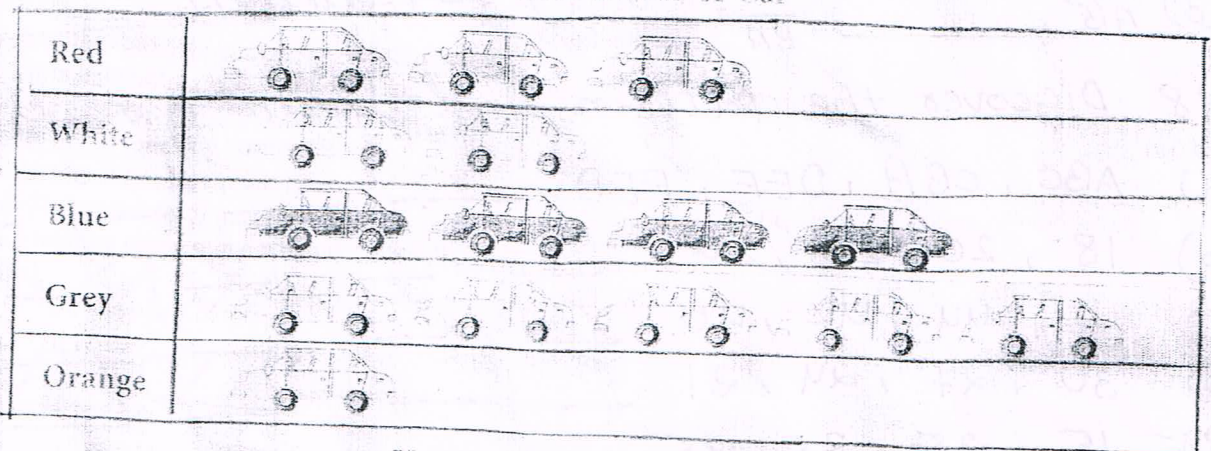
Number of Players in Teams

Tennis	
Cricket	
Basketball	
Ice Hockey	
Football	

Q. 14

Given below is a pictograph showing favourite colour of a car of the junior school children in a school. Read the pictograph and answer the questions given below.

Favourite Colour of Car



Key:  = 10 cars

- (a) Which colour of the car is most popular? _____
- (b) How many people like red cars? _____
- (c) How many more people like blue car than an orange car? _____
- (d) Which is the least popular colour in cars? _____
- (e) How many children in all have been asked their favourite car colour? _____
- (f) How many cars shall a half coloured picture represent? _____

Q.15 How many minutes are there in

- 1- a quarter hour?
- 2- half an hour?
- 3- one and a half hours?
- 4- one and a quarter hours?
- 5- one and a three quarter hours?

Q.16 Match each description to the name of the solid.

- | | |
|---------------------------------------|--------------|
| [a] 6 flat square faces | [1] Sphere |
| [b] 1 flat and 1 curved face | [2] Cuboid |
| [c] 1 curved face and no flat surface | [3] Cylinder |
| [d] 2 flat and 1 curved surface | [4] Cube |
| [e] 6 flat rectangular faces | [5] Cone |

Q.17 Fill in the blanks.

- (a) A point shows a definite _____
- (b) A line segment has _____ end points.
- (c) The initial point of a ray is called its _____
- (d) \overrightarrow{AB} _____ \overrightarrow{BA}

Q.18 Discover the pattern and write the next four terms

- (a) ABC, CBA, DEF, FED _____
- (b) 18, 20, 22, 24 _____
- (c) 46, 44, 42, 40 _____
- (d) 30, 27, 24, 21 _____
- (e) 15, 25, 35, 45 _____
- (f) 11A, 13B, 15C, 17D _____
- (g) 9, 15, 21, 27 _____

ch - 8, 9, 10 ch - 6, 7, 8.



Gurunanak & Chandraketu Pandya English Medium School
Shri Rajanikant Vyas & Chandraketu Pandya English Medium Higher Secondary School
(Pre-Primary, Primary, Secondary & Higher Secondary - Science and Commerce Stream)

Kumbhanath Society, Aavkar Hall Road, Maninagar, Ahmedabad 8. Ph. 25450086 • www.gneschool.com

STD 3rd

F.A 3

GUJARATI

Marks 90

Date

પ્ર 1 ખાલિ જગ્યા પુરો

1. ----- નાના પ્રાણીઓને ગડી જાય છે.
2. ----- પોતાની મરજી મુજબ પોતાના રંગ બદલિ શકે છે.
3. ----- દિવાલ પર ચોટી શકે છે.
4. ----- પોતાના જેરિ ડખ શિ પ્રાણી ઓ ને મારી ના ખે છે.
5. કાન પ્રજુરાને ----- પગ હીય છે.

[20]

પ્ર 2 જોડકા જોડો

1. ઘો Lizard
2. અજગર Python
3. સાપ Earthworm
4. અળસિયુ Snake
5. ગરોળ Dragon

[10]

પ્ર 3 એક વાક્ય મા જવાબ લખો

1. દરજી શુ કામ કરે છે
2. કડીયો શુ કામ કરે છે
3. ટપાલિ શુ કામ કરે છે
4. દાકતર શુ કામ કરે છે
5. શિક્ષક શુ કામ કરે છે
6. માડી શુ કામ કરે છે
7. મોચી શુ કામ કરે છે
8. સુથાર શુ કામ કરે છે
9. લુહાર શુ કામ કરે છે
10. કુભાર શુ કામ કરે છે.

[40]

પ્ર 4 ખરા ખોટા લખો

- 1 કુભાર તાબા પિતડ ના વાસરો બનવે છે []
- 2 સેનિક આપણ દેશ ની રક્ષા કરે છે. []
- 3 ખેડૂત ખેતર ખેડી અનાજ ઊગાડે છે []
- 4 વકીલ ન્યાયાલય મા કેસ લહે છે []
- 5 પાર્ટીલોન ટેન ચલાવે છે []

[10]

પ્ર 5 સુદર અક્ષરે લખો

- વાદરો કુદે છે -----
- કુતરો દોડે છે -----
- ખેડૂત કામ કરે છે -----
- નદી મા પુર આવે છે -----
- કાગડો ચતુર છે -----

[10]

૯. આપણું રાષ્ટ્રીય પ્રાણી કયું છે .

૯. આપણું રાષ્ટ્રીય ફળ કયું છે .

૧૦. આપણું રાષ્ટ્રીય પક્ષી કયું છે?

પ્ર ૪ સુદર અક્ષરે લખો

વાદરો કુદે છે

કુતરો દોડે છે

ખેડુત ફળ ચલાવે છે

નદી મા પુર આવે છે

કબુતર ચણ ચણે છે

આ રેતી છે

રેતી મા અમે રમી એ છીએ .

૧૧. રેતી અમને ગમે છે .

આ નદી છે

નદી અમને ગમે છે .

આ વડ છે

વડ અમને ગમે છે



Gurunanak & Chandraketu Pandya English Medium School
Shri Rajanikant Vyas & Chandraketu Pandya English Medium Higher Secondary School
(Pre-Primary, Primary, Secondary & Higher Secondary - Science and Commerce Stream)

Kumbhanath Society, Aavkar Hall Road, Maninagar, Ahmedabad-8. Ph. 25450086 • www.gncschool.com

STD 3

F.A 4

SUB Gujarati

Date

M

[24]

પ્ર 1 જોડકા જોડો

વીછી	Housefly
વદો	Scorpion
માખી	Cockroach
કરોળીયો	Mousquito
મચ્છર	Butterfly
પતંગિયુ	Spider
મધમાખી	Moth
અગિયો	Honeybee
ઇચળ	Locuts
ગોઠળ ગાય	Centipede
તીડ	Larva
કાન ખજુરો	Snail

[24]

પ્ર 2 ખાલી જગ્યા પુરો

- [1] સસલા ને પોતાની ચાલ પર ----- હતું.
- [2] કાચબા ની સાથે -- શરત લગાવી.
- [3] સસલા એ વિચાર્યું ----- આરામ કરી લઉં.
- [4] કાચબો ધીરે ધીરે ----- રહ્યો.
- [5] ----- પોતાના લક્ષ પર પહોંચી ગયો.
- [6] ધમડ નું ----- ખરાબ આવે છે.
- [7] ગાય ----- ખાય છે.
- [8] ગાય ----- આપે છે.
- [9] ગાય નું ----- પવિત્ર ગણાય છે.
- [10] ----- ખુબ મોટી નદી છે.
- [11] નિશાન નો ----- વાગ્યો.
- [12] ----- રણ નું વહાણ છે.

[30]

પ્ર 3 પ્રશ્નો ના જવાબ લખો

1. હિંદુ ધર્મ ના લોકો પુજા કરવા ક્યા જાય છે.
2. ક્યા ધર્મ ના લોકો ગુરૂ દ્વારા મા જાય છે.
3. જૈન ધર્મ ના લોકો પુજા કરવા ક્યા જાય છે.
4. ક્યા ધર્મ ના લોકો અગિયારી મા જાય છે.
5. દેવળ એ ક્યા ધર્મ ના લોકો નું દેવસ્થાન છે.
6. મુસ્લિમ ધર્મ ના લોકો ના દેવસ્થાન ને શું કહે છે.
7. આપણું રાષ્ટ્રીય ફુલ કયું છે.



Gurunanak & Chandraketu Pandya English Medium School
Shri Rajanikant Vyas & Chandraketu Pandya English Medium Higher Secondary School
(Pre-Primary, Primary, Secondary & Higher Secondary - Science and Commerce Stream)

Kumbhanath Society, Aavkar Hall Road, Maninagar, Ahmedabad-8. Ph. 25450086 • www.gnchool.com
STD-3RD SUB-CAMBRIDGE 5.A-2 EXAM MARKS 300 DATE-

Q-1 Complete each sentence.

[5]

(Happy tree dinner Glass apple egg)

1 the banyan is a huge _____.

2 My hen laid an _____.

3 Rohit is sad but Rani is _____.

4 We are having fish for _____.

5 If you drop a _____.

6 An _____ is a fruit.

Q-2 Make a new word by adding self to the given words .

[5]

1. my _____ 2. one _____ 3. Him _____

4. It _____ 5. Your _____ 6. Her _____

Q-3 Tick the correct spelling.

[5]

1. night nite 2. Cream creem

3. apple aple 4. Baby baby

5. buter butter 6. Sixty sixty

Q-4 Write each word besides it's rhyming word.

[10]

(Milk tie smell thirty more down back nine)

1. dirty _____ 2. Fell _____ 3. Fine _____

4. track _____ 5. sky _____ 6. Silk _____

7. Town _____ 8. Store _____

Q-5 Find five words and complete the sentences.

[5]

(Over zoo sixty week stop)

1. I saw a tiger at the _____.

2. If there is a red light you must _____.

3. After fifty-nine comes _____.

4. The cow jumped _____ the moon.

5. There are seven days in a _____.

(Green goat week five football)

1. cat rat horse _____
2. cricket golf basketball _____
3. day month year _____
4. red blue yellow _____
5. seven eight nine _____

(B) Find out.

1. the number of hours in a day. _____
2. the number of months in March. _____
3. the number of days in June. _____
4. The number of days in a week. _____
5. the number of days in a year. _____

Q-5 What would you.

(Wool boat apple room drum)

1. find in a house? _____
2. find on a tree? _____
3. row across a river? _____
4. get from sheep? _____
5. make music with? _____

Q-6 Write each word beside another that sounds the

Same. The first one has been done for you .

(ball been road wood week their too rein)

1. bawl _____
2. run _____
3. rode _____
4. two _____
5. there _____
6. weak _____
7. would _____
8. bean _____

Q-1 Change the underlined letter to make a new word. [10]

1 b—ll 2 n---ne 3 r---se 4 st—p 5 w---nd 6 ha—d 7 c—ok 8 r—ng
9 fl—g 10 c—st

Q-8 Change the last letter to make a new word. [10]

1 coo--- 2 win--- 3 roo--- 4 han--- 5-boo— 6 fee--- 7 bel-- 8 ten-- 9 bea— 10 dee—

Q-9 Rearrange the letters to make a word. [10]

1- rnai 2- hpsi 3- tgae 4- oder 5- lebl 6- rpoe 7- stne 8- mrdu 9- tars 10- hira

Q-10 Choose the correct word to complete each sentence. [30]

- 1- I hope to _____ my bicycle for Rs 800. [cell\sell]
- 2- The hot _____ burnt the leaves on the trees. [son\sun]
- 3- There are only _____ sweets left in the jar. [won\one]
- 4- Reeta _____ the first prize in the competition. [two\to]
- 5- I am going to _____ a present for my mother. [buy\by]
- 6- I received a letter form Mumbai in the _____ [mail\male]
- 7- The hungry tiger soon ate all the _____ [meet\meat]
- 8- The cat bit the rat on its _____ [tale\tail]
- 9- Last _____ we went to the beach. [wood\would]
- 10- Did you _____ the roar or the jet? [here\hear]

Q-11 Complete each compound word. [10]

[father ball bird room fly fish]

- 1- star _____ 2- grand _____ 3- foot _____
- 4- bath _____ 5- black _____ 6- butter _____

Q-12 Tick the correct word in each sentence. [20]

- 1- I ate some [jelly\jolly] for tea.
- 2- the center of a circle is its [middle\muddle]
- 3- We rang the [bell\ball] at ten o'clock.
- 4- I spread the [bitter\butter] on the bread.
- 5- A baby dog is called a [peppy\puppy]
- 6- It becomes very hot in [simmer\summer]



STD-3rd

SUB-E.N.V

SAR EXAM

DATE-

Q.1 Answer the following question.

(10)

1. Why do we play games?
2. What is sportsmanship?
3. Write a short note on Kabaddi.
4. Write a short note on Gilli-Danda.
5. Name the four main direction.
6. How are maps useful to us?
7. What are landmarks?
8. Name some means of land transport used for carrying goods.
9. What does communication mean?
10. Write any four means of communication.
11. What is pottery?

Q.2 True and false.

(5)

1. Badminton is an outdoor game.
2. Games help us relax and make us happy.
3. Mallakhamba originated in the 12th Century.
4. Cricket is an indoor game.
5. Athletics is played by two to
5. A ship is a means of water transport.

Q.3 Match the following.

(10)

- | | | |
|-------------------|---|------------------------|
| 1. Blackberries | - | wooden block |
| 2. Block print | - | grey colour |
| 3. Batik | - | plats |
| 4. Turmeric | - | yellow colour |
| 5. Natural colors | - | wax |
| 6. Potter's wheel | - | to store food |
| 7. Clay | - | bucket clay |
| 8. Coconut shell | - | large-scale production |
| 9. Kiln | - | earthenware |
| 10. Pottery | - | oven |

Q.4 Fill in the blanks.

(5)

1. Games keep us _____ and _____.
2. Games played by young people involve a lot of _____ activities.
3. We get tired because of _____.
4. The game played by two opposing players is _____.
5. _____ is a club and ball sport.
6. _____ has two teams of five players each.

Q-5 Answer the following questions.

[30]

- 1- Why do we need a house?
- 2- How can we make our house look beautiful?
- 3- Give five examples of living things?
- 4- What are non-living things?
- 5- Write any two Features of living things?
- 6- Write three characteristics of plants?
- 7- How do plants help us to breathe?
- 8- Write three uses of plants?
- 9- Write any three uses of leaves?
- 10- What are domestic animals?

- 11- Why do dogs and cats use their tails?
- 12- Why do we need to save animals?
- 13- Define carnivorous animals.
- 14- Name five creepy-crawlies.
- 15- Why are ants known as social insects?
- 16- How do birds fly?
- 17- Why do birds make nests?
- 18- What is an occupation?
- 19- What do you mean by child labour?
- 20- Why do some children work like adults?

Q-6 Fill in the blanks.

[30]

- 1- Our house provides us _____ as _____.
- 2- Big houses in cities are known _____.
- 3- _____ houses are built on wooden poles. house.
- 4- _____ adds beauty to _____.
- 5- Living things can _____ and _____.
- 6- _____ and _____ are _____.
- 7- Plants breathe through _____ on their leaves. 8- Plants need _____ and _____ to stay alive.
- 9- Sugar is obtained from the _____ plant.
- 10- A tiger is a _____.
- 11- Animals need _____ to grow.
- 12- Animals have _____ organs.
- 13- _____ and _____ are creepy-crawlies.
- 14- An _____ is called a farmer's best friend.
- 15- _____ keep a bird warm.
- 16- A _____ does not build its own _____.
- 17- The Indian government has made laws to check _____.

Q-7 Write 'T' For true or 'F' for false.

[20]

- 1- We must clean our house once a week.
- 2- Apartments are found in villages.
- 3- Caravan is a house on wheels.
- 4- All living things breathe.
- 5- All animals reproduce.
- 6- Non-living move around.
- 7- All plants are of the same size and shape.
- 8- We are dependent on plants.
- 9- We should cut plants.
- 10- Plants cannot make their own food.

Q-8 Name two of each.

[10]

- 1- Small animals _____ and _____.
- 2- Big animals _____ and _____.
- 3- Aquatic animals _____ and _____.
- 4- Animals that chew the cud _____ and _____.
- 5- Scavengers _____ and _____.

Q.9 Name the following birds.

1. A bird with a sharp and hooked beak.
2. A bird that cannot fly.
3. A bird with webbed feet.
4. An excellent glider.

5. A bird which builds its nest on the ground.

Q.10. Encircle (O) the odd one out.

1. crow / sparrow / pigeon / penguin
2. down feathers / flight feathers / wings / horn.
3. grains / fruits / ice cream / seeds.
4. tailor bird / cuckoo / bulbul / Penguin
5. Cow, lion, deer, horse
6. tiger, goat, wolf, leopard
7. vulture, rabbit, cat, dog
8. Camel, dodo, lion, cat.
9. chess, carrom, hockey, ludo
10. lawn tennis, cricket, hockey, pehisi
11. shatranj, gilli danda, Kho, Kho, Cricket
12. Cricket, football, basket ball, Kabaddi

Q.11 Name two of each:-

- ① small animals _____ and _____
- ② Big animals _____ and _____
- ③ Aquatic animals _____ and _____
- ④ Animals that chew the cud - _____ and _____
- ⑤ Scavengers - _____ and _____

Q.12 Give two examples of each of the following:

1. Earthenware pottery.
2. Stoneware pottery.
3. Porcelain pottery.

Q.13 Help the following people to reach their destinations.

1- I am Ram. My aunt lives in London. We are planning to visit her. Which means of transport should we use?

2. I am Rita. I have to go to Agra to meet my cousin. Which means of transport should I use?

3. I am Gauri. I have to go to a neighbourhood market to buy vegetables. Which means of transport should I use?

Q.14 If your right hand is pointing towards the rising sun, name the directions:-

① At your back _____

② On your left side _____

③ In front of you _____