



Gurunanak & Chandraketu Pandya English Medium School
Shri Rajanikant Vyas & Chandraketu Pandya English Medium Higher Secondary School
(Pre-Primary, Primary, Secondary & Higher Secondary - Science and Commerce Stream)

Kumbhanath Society, Aavkar Hall Road, Maninagar, Ahmedabad-8. Ph. 25450086 • www.gnchool.com

4th computer

s a 1

200

Q -1 Tick the correct option

50

- 1 Which of these is operating system a) Wordpad b) M S word windows c) M s windows 7
- 3 Where are deleted files or folders kept on the destop a) computer b) recycle bin c) document
- 4 An icon is a small _____ that is used to open program a) Sysmbol b) alphabet c) picuter
- 5 Which was the frist commerical computer prodeded in the US ?
A) IBM - 701 B) UNIVAC C) ENIAC
- 6 Who made frist mechanical calcuter in 1642 ? A) Gottfried leibniz B) john Napier C) Blaise pascal
- 9 Which of the following software manage and control hadware
A) system software b) Application softwate c) Both of them
- 11 Who developed the Difference Engine A)Konred Zuse b) john napier c) Charles Babbage
Windows exploler is divided into _____parts a) 2 b) 3 c) 4
- 3 Where are deleted files or folders kept on the destop a) computer b) recycle bin c) document
- 4 An icon is a small _____ that is used to open program a) Sysmbol b) alphabet c) picuter
- 7 Who developed the population counting machin A) harmanHollerith B) john Napier C) IBM
- 8 I MB is equal is A) 1000bytes B) 1240 bytes c) 1024 kilobytes
- 10 Which of these can be used in place of a mouse A) Light pen B) Gruphic pen c) Joystick
- 1 where was the abacus invented A) china b) USA c) India
- 2 Who developed the Difference Engine A)Konred Zuse b) john napier c) Charles Babbage
- 3 Data and instructions given to a computer are called a) output b) processes c) Inout
- 4 The device that help us to enter date into a computer are called
a) input device b) processing device c) Output device
- 5 which these is not found on the windows dektop a) Wallpaper b) Icons c) cpu
- 7 who made the first mechanical calculator in 1642 ? a)Gottfried Leibniz B)Joh n Napier C) Blaise Pascal
- 8 which was the frist commercial computer produced in the us? a) IBM – 701 B) UNIVAC C) ENIAC
- 9 What are the device that give us the result of the work done on a computer called?
a) input device b) processing device c) Output device
- 10 1MB is equal to _____ a) 1000bytes b) 1240 bytes c) 1024 kilobyte
- 1 Which of the following software manage and control hadware
A) system software b) Application softwate c) Both of them
- 2 which these is not found on the windows dektop a) Wallpaper b) Icons c) cpu
- 3 windows Explorer is divided into ____prats. A) 2 B) 3 c) 4
- 4 An icon is a small _____ that is used to open program a) Sysmbol b) alphabet c) picuter
- 5 Where are deleted files or folders kept on the destop a) computer b) recycle bin c) document
- 6 Which was the device that give us the result of the work done on a computer called ?
A) input device b) processing device c) Output device
- 7 Which was the following device is meant bfor pointing and seleleting items on a computer screen
A) Light pen B) Gruphic pen c) Joystick
- 8 Which was the following is resposible for performing various arithmetic operation
A) control unit B) A L U C) memory unit
- 9 Who developed the Difference Engine A)Konred Zuse b) john napier c) Charles Babbage
- 10 7 Who developed the population counting machin A) harmanHollerith B) john Napier C) IBM
- 1 _____command picks up the turtlew pen A) PU B) PE C) PD
- 2 _____makes the turtle's pen act like am eraser A) PU B) PE C) PD
- 3 To change the pen colour to red , we use _____command

- A) SETPENCOLOUR 4 B))SETPENCOLOUR4 CSETPENCOLOUR
 4 _____ command will set the thickness of the pen
 A) SETPENSIZE [5 3] B) SETPENCOLOUR [4 4] C) SETPENCOLOUR [2 4]
 5 _____ sets the colours of the Drawing Area in the specified colour
 A) SETSCREEN B) SET LOODCOLOR C) SET SCREENCOLOR
 6 _____ command fills blue colour in the Drawing Area containing the turtle
 A)SET FLOODCOLOR b) SET FLOODCOLOR 1FILL C) SET FLOODCOLOR 1FILL
 7When you give PENUP command in LOGO the turtle point _____
 A) change b) is picked up c)goes down
 8 The frist charater of a procedure should always be a _____
 A letter b) number c) symbol
 9 Which of the following is a secondary memory device a keyboard b Mouse c hard disk
 10 which button perform all the main tasks in Windows a Start b back c next
 11A bit stands for _____ A boolearn digit b binary digit c binary decimal

Q - 1 Answer the followthg question

90

1

What is Logo

- 2 What are LOGO primitives
- 3 What is the different between PEN UP and PENDOWN commends?
- 4 Write the commends to fill green colour in a shape
- 5 Write the colour code for for the following colours (a) Red (b) Yellow (c) Blue
- 6 What is the function of SETPEN SIZE COMMAND IN MSWLOGO ?
- 7 What is procedure in Logo ?
- 8 What are the advantages of procedure.
- 9 What are the different parts of a LOGO procedure ?
- 10 write the steps to write a procedure ?
- 11 who is called the Father of Computer ?
- 12 Name any two early machin .
- 13 Decribe the machin invented by John Napier
- 14 What is an IPO cycle ?
- 15 name any two type of scanner ?
- 16 what are storage device ? Name any two
- 17 How is the data stored in a computer
- 18 What is a Taskbar ?
- 19 What are Icon ?
- 20 Name the various options to arrange windows on the desktop
- 21 Write the five input and out device name ?

Q - 3 fill in the blanks

20

- 1 _____ was the frist calculating device
- 2 In an abdcus, the position of _____ is changed to enter a number.
- 3 Pascaline had a box with eight moveable wheels called _____.
- 4 _____ can be taken as the frist 'read only memory'
- 5 _____ was the founder of IBM
- 6 _____ an operating system, is used world wide
- 7 Wysiwyg stands for _____
- 8 when we swich On a computer, windows _____ screen appears.
- 9 A _____ appears when the computer has beem idle for some time .
- 10 A _____ is a collection of data that is stored together.
- 1 _____ is a group of commands storred together to carry out a job
- 2 the three components of a procedure are _____, _____ and _____.
- 3 We can not use _____ to name a procedure

- 4 We write _____ to end the procedure
 5 _____ means opening a saved LOGO procedure file
 6 Input and out put device are together called computer
 7 An _____ is a small picture that is used to open a program
 Output device give us the _____ of the work done by a computer

Q - 3 Write the short form of the following in logo

- 1 Forward _____ - 2 backward _____ - 3 Left turn _____
 4 Right turn _____ 5 Clear text _____ 6 Hide turtle _____
 7 Show turtle _____ - 8 pen up _____ 9 Clear screen _____
 10 pen down _____

Q – 3 Write true (T) or false (f)

20

- 1 windows Explorer is a very handy tool for managing our files and folders in the computer
 2 you can get back items from the Recycle Bin by clicking on 'Empty recycle Recycle Bin'.
 3 you can have many open windows on a screen at a time
 5 the primary name of a file determines the software to which the file belongs.
 6 Start button performs all important tasks.
 A 1 1 procedure generally has two part , title and body
 2 We can define a procedure using repeat command
 3 we can put space between two words while writing a procedure
 4 We can save a LOGO procedure
 5 A LOGO file is written with the extension of GLO
 6 Z3 was the world's first working programmable , fully automatic computer machine
 7 the clarity of the image on a monitor depends on the size of dots on the screen
 8 Laser printer are non impact printer
 9 inkjet printer are called impact printer

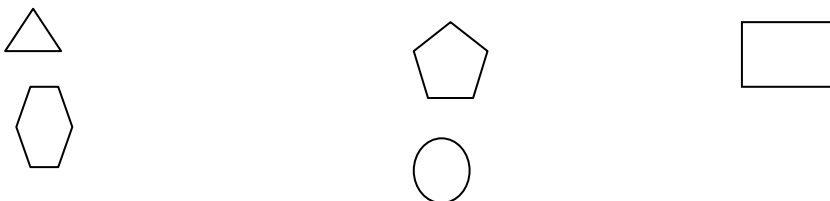
Q – 4 Match the following columns

5

- | Column A | column B |
|--------------------|--|
| 1 Keyboard | (a) Output sound from a computer |
| 2 Barcode Reader | (B) Visual Display unit |
| 3 Biometric Sensor | (c) Most commonly used input device |
| 4 Microphone | (d) Reads small images of lines and spaces |
| 5 Speaker | (e) used to give input as sound |
| 6 Monitor | (f) Used as a popular security device |

Q- 5 Write the commands to draw each of the given shapes

10





STD:4

S.A.-1

Sub:Maths

Q-1 Short type questions:

(80)

Q-1 Write in numerals: Eighty thousand

2) Write in numerals: Seventeen thousand seventeen

3) Write the number name: 5890

4) Write the number name: 8943

5) Write the place value of 8 in 8549

6) Write the place value of 6 in 5684

7) Write the expanded form: 3476

8) Write the expanded form: 8962

9) Write in standard form: $9000 + 500 + 80 + 7$

10) Write in standard form: $3000 + 60 + 4$

11) Write the smallest number of four digits with different digits.

12) Write the largest number of four digits with different digits.

13) Show the numbers on abacus: 8, 10, 514

14) Show the numbers on abacus: 9, 56, 709

15) Write in the Hindu-Arabic: XVI, VII

16) Write in the Hindu-Arabic: LXV, XXV

17) Find The product: 48×20

18) Find the product: 50×36

19) Put the sign: $<, > =$ in 10×3 _____ 8×8

20) Put the sign: $<, > =$ in 12×5 _____ 9×6

21) Write two division sentences: $8 \times 3 = 24$

22) Write two

division sentences: $8 \times 5 = 40$

23) Choose the composite numbers: 18, 17, 27, 10, 21, 19, 33, 43

24) Choose the composite numbers: 12, 21, 19, 7, 33, 23, 43, 45

25) Write the 5 multiple of 8

26) Write the 5 multiple of 7

27) Write in word form: 302.54

28) Write in word form: 652.12

29) Encircle the number that are divisible by 5: 86, 45, 190, 165

30) Encircle the number that are divisible by 10: 95, 115, 120, 500

31) Write the numeral form: one-fourths, seven-ninths

32) Write the numeral form: three-sixths, five-sevenths

33) Draw the number line and show $5/7 - 2/7 = 3/7$.

34) Draw the number line and show $4/8 - 1/8 = 3/8$.

35) Write the fraction in words: $\frac{1}{5}, \frac{9}{11}$

36) Write the fraction in words: $\frac{3}{5}, \frac{4}{7}$

37) Write in word form: 7.19

38) Write the fraction in words: 6.32

39) Write the next four equivalent fractions of $\frac{2}{3}$ & $\frac{2}{5}$

40) Write the next four equivalent fractions of $\frac{3}{5}$ & $\frac{1}{4}$

Q-2 Long type questions;

(40)

1) 3780 visited an amusement park on Monday, 8950 visited on Tuesday, 6300 visited on Wednesday, 5123 visited on Thursday. How many people visited the amusement park on these 4 days?

2) 6543 visited an amusement park on Monday, 5812 visited on Tuesday, 2600 visited on Wednesday, 3842 visited on Thursday. How many people visited the amusement park on these 4 days?

3) Multiply: 2059×76

4) Multiply: 345×55

5) Estimate: 27×32

6) Estimate: 706×392

7) A man had Rs. 960.35 in the bank. He deposited Rs. 421.30 more. What was his balance there after?

8) Parth purchased a ruler worth Rs. 3.10 and a pencil worth Rs. 1.75. How much did he spend in all?

9) Shrey went to a fishing club. There he wanted to hire a Boat = Rs. 410.25, Rod = Rs. 106.30 and Life jacket = Rs. 22.10. How much cost will pay for hire?

4) Kanu carried Rs. 8.20 to a sweetmeat shop. He bought a candy worth Rs. 2.20. How much money did he take back?

5) Sonia buys a bunch of flowers for Rs. 106.35 and some chocolates for Rs. 40.20. If she has left Rs. 64.39. How much money did she have to start with?

6) Isha took her friend 'Pizza world' for party there. One large pizza = Rs. 410.32, Sald bowl = Rs. 60.32, Garlic bread = Rs. 90.50, PEPSI = Rs. 85.62. If she has Rs. 1000, how much she get back she paid for her eatery?

7) Arpan bought jogging shoes for Rs. 765.65, Cup for Rs. 78.36 and key chain for 23.40. He gave shopkeeper a 1000 rupees. What amount did he get back?

8) The black forest pastry cost Rs. 35.20. What is the cost of 7 pastries?

9) A movie ticket cost Rs. 80.25. What is the cost of such 5 tickets?

10) Mr. Sharma invests in 4 banks. Each bank he invests Rs. 4503.78. How much amount he invests in 1 bank?

11) The cost of a box of 15 pencils is Rs. 900. What is the cost of each pencil?

12) A shopkeeper buys 10 pen drives for Rs. 2500. What is the cost of 1 pen drive?

13) 9 large glasses of chocolate milkshake cost Rs. 322.65. What is the cost of 1 glass?

14) Alka has 495 photographs to put in album. She can put 9 photographs on each page. How many pages can she fill?

15) A prize money of Rs. 4422 was distributed equally among 11 players of a football team. How much money did every player get?

16) A lady paid Rs. 700 for 14 cans of cold drinks. How much did she pay for each?

Q-1 Short STD type questions:

(20)

1) Write in numerals: nine thousand seven hundred eighty.

2) Write the number name: 5496

3) Write the place value of 4 in 406

4) Write the expanded form: 3698

5) Write in standard form: $5000 + 300 + 60 + 9$

6) Write the largest number of four digits.

7) Show the numbers on abacus 3,26,487

8) Write in the Hindu-Arabic: LX, XVII

9) Find The product: 30×29

10) Put the sign: $<, > =$ in 8×5 _____ 7×6

Q-2 Long type question:

(10)

1) A school has an enrolment of 5000 boys and 1568 girls. How many boys than girls are there on the rolls of the school?

2) 6387 visited an amusement park on Monday, 4320 visited on Tuesday, 5200 visited on Wednesday, 6523 visited on Thursday. How many people visited the amusement park on these 4 days?

3) Multiply: 804×35

4) Estimate: 34×50

Q-1 Short type questions:

(20)

1) Write in numerals: seven thousand seventy

2) Write the number name: 4952

3) Write the place value of 3 in 320

- 4) Write the expanded form: 5010
- 5) Write in standard form: $6000 + 20 + 9$
- 6) Write the smallest number of four digits.
- 7) Show the numbers on abacus 8,50,009
- 8) Write in the Hindu-Arabic: XXX, VII
- 9) Find The product: 25×60
- 10) Put the sign: $<, > =$ in 8×9 _____ 8×2

Q-2 Long type question:

(10)

- 1) A school has an enrolment of 2000 boys and 1575 girls. How many boys than girls are there on the rolls of the school?
- 2) 7896 visited an amusement park on Monday, 6000 visited on Tuesday, 5000 visited on Wednesday and 2000 visited on Thursday. How many people visited the amusement park on these 4 days?
- 3) Multiply: 508×28
- 4) Estimate: 25×21

Q-1 Short type questions:

(20)

- 1) Write in numerals: Five thousand seventy
- 2) Write the number name: 3871
- 3) write the place value of 5 in 501
- 4) Write the expanded form: 2030
- 5) Write in standard form: $8000 + 70 + 2$
- 6) Write the smallest number of four digits.
- 7) Show the numbers on abacus 7,20,003
- 8) Write in the Hindu-Arabic: VII, XIX
- 9) Find The product: 27×80
- 10) Put the sign: $<, > =$ in 4×6 _____ 8×2

Q-2 Long type question:

(10)

- 1) A school has an enrolment of 3000 boys and 1275 girls. How many boys than girls are there on the rolls of the school?
- 2) 7896 visited an amusement park on Monday, 6293 visited on Tuesday, 5429 visited on Wednesday and 8938 visited on Thursday. How many people visited the amusement park on these 4 days?
- 3) Multiply: 708×29
- 4) Estimate: 27×32

Q-1 Short STD type questions:

(20)

- 1) Write in numerals: nine thousand seven hundred eighty.
- 2) Write the number name: 5496
- 3) write the place value of 4 in 406
- 4) Write the expanded form: 3698
- 5) Write in standard form: $5000 + 300 + 60 + 9$
- 6) Write the largest number of four digits.
- 7) Show the numbers on abacus 3,26,487
- 8) Write in the Hindu-Arabic: LX, XVII
- 9) Find The product: 30×29
- 10) Put the sign: $<, > =$ in 8×5 _____ 7×6

Q-2 Long type question:

(10)

- 1) A school has an enrolment of 5000 boys and 1568 girls. How many boys than girls are there on the rolls of the school?

2)6387 visited an amusement park on Monday,4320 visited on Tuesday,5200 visited on Wednesday 6523 visited on Thursday. How many people visited the amusement park on these 4 days?

3)Multiply: 804×35

4)Esttimate: 34×50

Q-1 Short type questions:

(20)

1)Write in numerals:seven thousand seventy

2)Write the number name:4952

3) write the place value of 3 in 320

4)Write the expanded form:5010

5)Write in standard form: $6000 + 20 + 9$

6)Write the smallest number of four digits.

7)Show the numbers on abacus 8,50,009

8)Write in the Hindu-Arabic: XXX, VII

9)Find The product: 25×60

10)Put the sign: $<, > =$ in 8×9 _____ 8×2

Q-2 Long type question:

(10)

1)A school has an enrolment of 2000 boys and 1575 girls. How many boys than girls are there on the rolls of the school?

2)7896 visited an amusement park on Monday,6000 visited on Tuesday,5000 visited on Wednesday and 2000 visited on Thursday. How many people visited the amusement park on these 4 days?

3)Multiply: 508×28

4)Esttimate: 25×21

Q-1 Short type questions:

(20)

1)Write in numerals:Five thousand seventy

2)Write the number name:3871

3) write the place value of 5 in 501

4)Write the expanded form:2030

5)Write in standard form: $8000 + 70 + 2$

6)Write the smallest number of four digits.

7)Show the numbers on abacus 7,20,003

8)Write in the Hindu-Arabic: VII, XIX

9)Find The product: 27×80

10)Put the sign: $<, > =$ in 4×6 _____ 8×2

Q-2 Long type question:

(10)

1)A school has an enrolment of 3000 boys and 1275 girls. How many boys than girls are there on the rolls of the school?

2)7896 visited an amusement park on Monday,6293 visited on Tuesday,5429 visited on Wednesday and 8938 visited on Thursday. How many people visited the amusement park on these 4 days?

3)Multiply: 708×29

4)Esttimate: 27×32



Gurunanak & Chandraketu Pandya English Medium School
Shri Rajanikant Vyas & Chandraketu Pandya English Medium Higher Secondary School
(Pre-Primary, Primary, Secondary & Higher Secondary - Science and Commerce Stream)

Kumbhanath Society, Aavkar Hall Road, Maninagar, Ahmedabad-8. Ph. 25450086 • www.gnchool.com

STD:4th SUB:APTITUDE S A 1

MARKS:30

Tick the right choice:-

[15]

1. Pencil box : Pencils : ? : Money
(A) bag (B) locker (C) purse (D) zip
2. Cub : Tiger : Chick : ?
(A) Cow (B) hen (C) Rabbit (D) Lizard
3. A : Z, B : Y, C : X, D : ?
(A) U (B) T (C) W (D) V
4. A : D, B : E, C : F, P : ?
(A) S (B) T (C) O (D) X
5. D : EF, C : DE, B : CD, A : ?
(A) PQ (B) AB (C) CD (D) BC
6. AB : DE, BC : EF, CD : FG, PQ : ?
(A) UV (B) TU (C) RS (D) ST
7. ABC : DEF, PQR : STU, GHI : ?
(A) JKM (B) IJK (C) JKL (D) KLM
8. 60 : 700, 70 : 800, 80 : 900, 40 : ?
(A) 400 (B) 500 (C) 300 (D) 200
9. 2 : 6, 10 : 30, 40 : 120, 100 : ?
(A) 250 (B) 200 (C) 330 (D) 300
10. 600 : 700, 1100 : 1200, 1500 : 1600, 1700 : ?
(A) 1900 (B) 1750 (C) 1600 (D) 1800
11. 1234 : 4321, 7296 : 6927, 9873 : ?
(A) 3789 (B) 3987 (C) 3978 (D) 7162
12. AB1 : CD2, CD3 : EF4, PQ7 : RS8, LM3 : ?
(A) OP4 (B) NO2 (C) NO4 (D) ZO6
13. 12A : 23B, 23L : 34M, 78X : 89Y, 10P : ?
(A) 12Q (B) 21R (C) 32Q (D) 21Q
14. AA12 : BB34, PP34 : QQ56, TT56 : ?
(A) UV56 (B) UU45 (C) UU78 (D) UU56
- 15.

C	E	H	L	N	Q	O	P
---	---	---	---	---	---	---	---

→ (a) (b) (c) (d)

Cross the odd one :-

[5]

16. Cup, saucer, spoon, fork, screw, driver, bowl
17. BA, QP, DC, LM, SR
18. Skirt, shirt, barmuda, knife, trousers, vest
19. TV, Computer, Banana, I - Pod, Stereo, Calculator
20. Fan, Shoes, Cooler, Tubelight, TV, Bulb

Fill in the box (any 5) :-

[10]

21.

AA	BC	DD	EF		
----	----	----	----	--	--

22.

ABC	CBA	DEF	FED		
-----	-----	-----	-----	--	--

23.

B	D	F		J	L	
---	---	---	--	---	---	--

24.

AZ	BY	CX		EV	FU	
----	----	----	--	----	----	--

25.

987	876	765	654	543		
-----	-----	-----	-----	-----	--	--

26.

210	320	430	540		
-----	-----	-----	-----	--	--

Tick the right choice:-

[15]

1. Cabbage : Vegetable :: Apple : ?

- (A) Medicine (B) fruit (C) Tree (D) Tooth paste

2. Cub : Tiger :: Chick : ?

- (A) Cow (B) Hen (C) Rabbit (D) Lizard

3. Bus : Road :: Aeroplane : ?

- (A) Fly (B) Sea (C) Sky (D) Swim

4. AB : C, BC : D, CD : E, XY : ?

- (A) X (B) Z (C) Y (D) L

5. D : EF, C : DE, B : CD, A : ?

- (A) PQ (B) AB (C) CD (D) BC

6. AB : DE, BC : EF, CD : FG, PQ : ?

- (A) UV (B) TU (C) RS (D) ST

7. ABC : DEF, PQR : STU, GHI : ?

- (A) JKM (B) IJK (C) JKI (D) KLM

8. 60 : 700, 70 : 800, 80 : 900, 40 : ?

- (A) 400 (B) 500 (C) 300 (D) 200

9. 215 : 216, 816 : 817, 192 : 193, 704 : ?

- (A) 703 (B) 707 (C) 705 (D) 709

10. 600 : 700, 1100 : 1200, 1500 : 1600, 1700 : ?

- (A) 1900 (B) 1750 (C) 1600 (D) 1800

11. 1234 : 4321, 7296 : 6927, 9873 : ?

- (A) 3789 (B) 3987 (C) 3978 (D) 7162

12. AB1 : CD2, CD3 : EF4, PQ7 : RS8, LM3 : ?

- (A) OP4 (B) NO2 (C) NO4 (D) Z02

13. AA12 : BB34, PP34 : QQ56, TT56 : ?

- (A) VV56 (B) UU45 (C) UU78 (D) UU56

14. AAB11 : CCDD22, PPQQ55 : ?

- (A) QQRR66 (B) RRSS66 (C) RRSS77 (D) PQRS67

15.

AB	CD	EF	GH
----	----	----	----

AB	CD	EF	GH
----	----	----	----

- (a) (b) (c) (d)

16.

ABC	BCD	CDE	DEF
-----	-----	-----	-----

FGH	GHI	EFQ	IJK
-----	-----	-----	-----

- (a) (b) (c) (d)

17.

666	555	444	333
-----	-----	-----	-----

222	111	000	777
-----	-----	-----	-----

- (a) (b) (c) (d)

18.

221	331	441	551
-----	-----	-----	-----

771	661	616	166
-----	-----	-----	-----

- (a) (b) (c) (d)

19.

10F	21E	32D	43C
-----	-----	-----	-----

54A	54B	56B	56A
-----	-----	-----	-----

(a) (b) (c) (d)
20.

555T	444S	333R	222Q
------	------	------	------

111R	123P	333Q	111P
------	------	------	------

(a) (b) (c) (d)

Fill in the boxes :-

21.

A	C	E	G	I	K		
---	---	---	---	---	---	--	--

22.

A	A	A	B	B	B	C		
---	---	---	---	---	---	---	--	--

23.

AB	CC	DE	EF		
----	----	----	----	--	--

24.

B	D	F		J	L	
---	---	---	--	---	---	--

25.

210	320	430	540		
.					
.					

[10]

7

PUZZLE TIME

Solve the following puzzles :

1. Find two numbers (except 0) which when added together gives a 2-digit number and when multiplied gives a 1-digit number.


2. Find a commonly used word that ends in T, contains the letters VEN and starts with IN. _____
3. What occurs once in June, twice in August and never in October? .

4. A man has five sons and each has one sister. In all how many children does the man have?

5. A cyclist takes 2 minutes 12 seconds to go one round of a circular track. How long will he take to go 60 rounds of the track. Try to find the answer without actually multiplying.



6. A woman has 10 m of cloth on a single roll and she wants to divide it into 10 lengths of 1 m each. It takes her 10 seconds to cut each length. How long will she take to cut all the 10 pieces?



7. I am a 4-digit even number. All my digits are same. Also, I am greater than 2300 and less than 6000. Who am I? _____

PART - B : NON-VERBAL APTITUDE

8




ANALOGY





Analogy (Objects)




Tick (✓) the right choice.





1.  :  ::  : ?




(a)  (b)  (c)  (d) 





2.  :  ::  : ?




(a)  (b)  (c)  (d) 





3.  :  ::  : ?




(a)  (b)  (c)  (d) 





4.  :  ::  : ?

(a)  (b)  (c)  (d) 

5.  :  ::  : ?

(a)  (b)  (c)  (d) 

6.  :  ::  : ?

(a)  (b)  (c)  (d) 

7.  :  ::  : ?

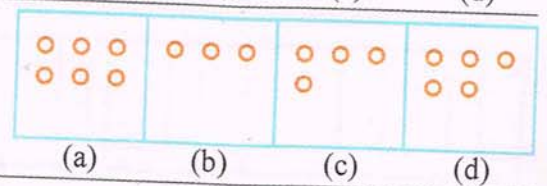

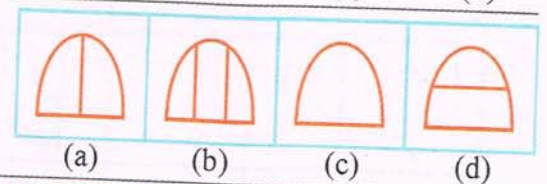

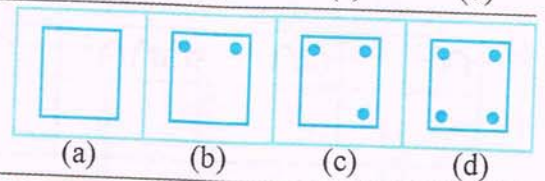
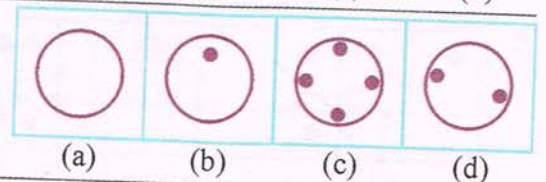
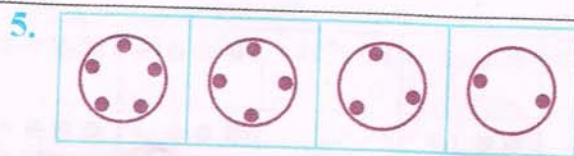
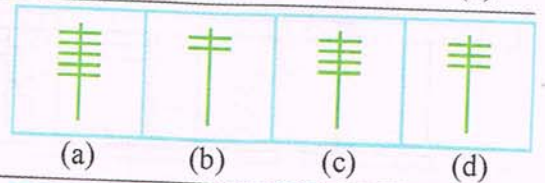
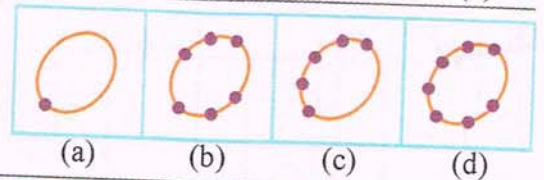
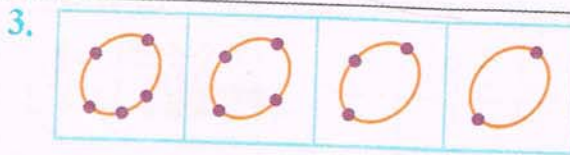
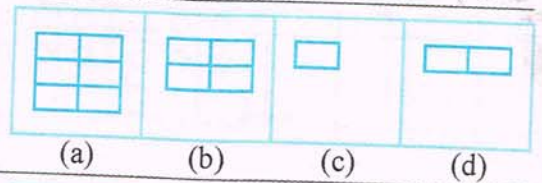
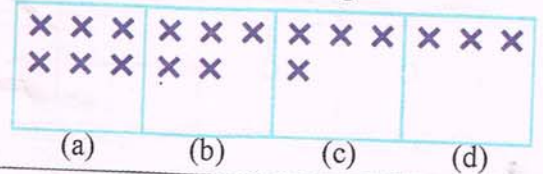

(a)  (b)  (c)  (d) 

Reducing Patterns-1

Tick (✓) from the answer figures which comes next.

Problem Figures

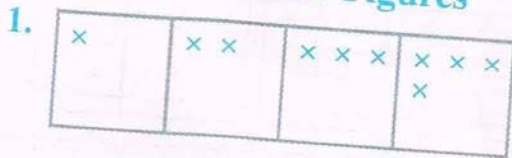
Answers Figures



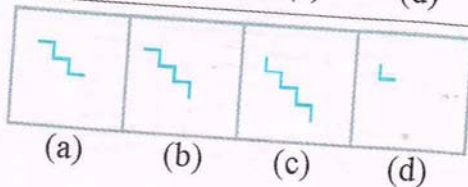
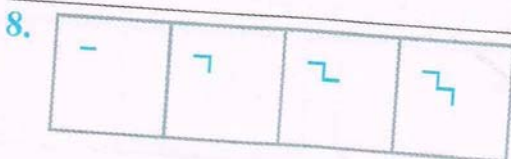
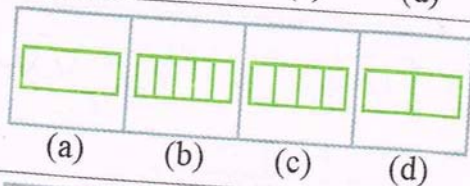
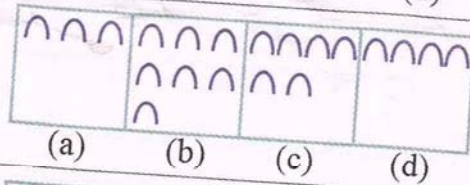

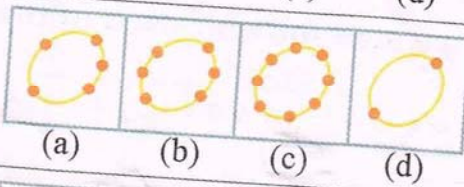
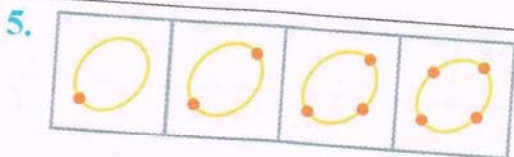
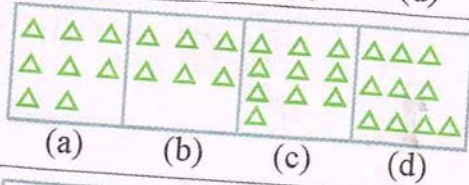
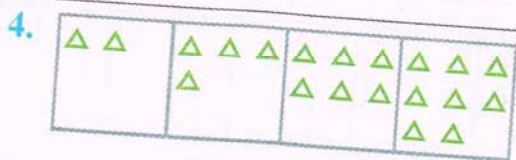
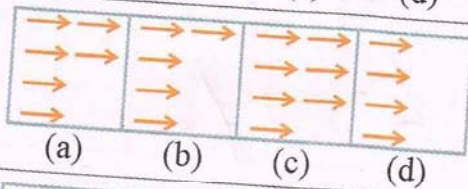
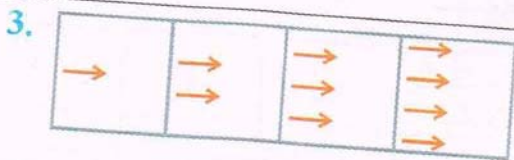
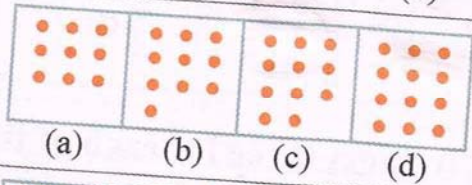
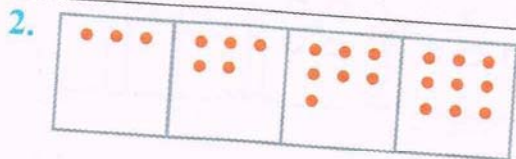
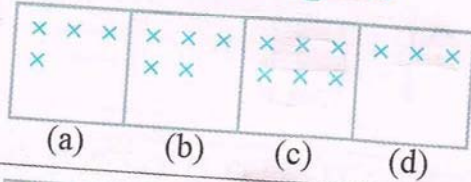
Growing Patterns-1

Tick (✓) from the answer figures which comes next.

Problem Figures




Answers Figures



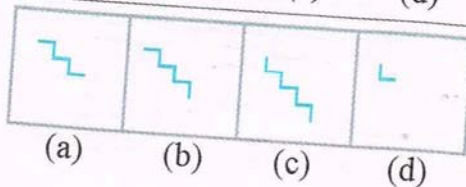
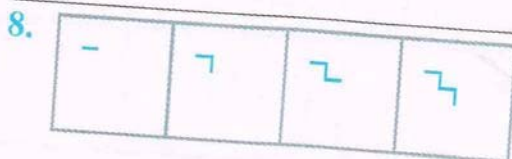
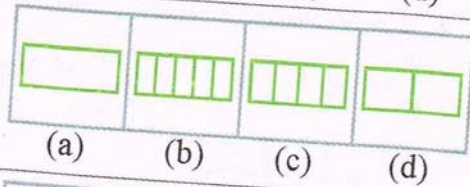
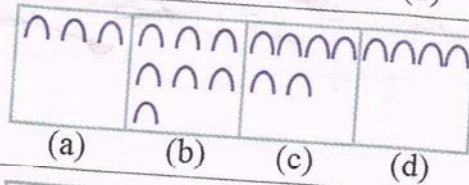

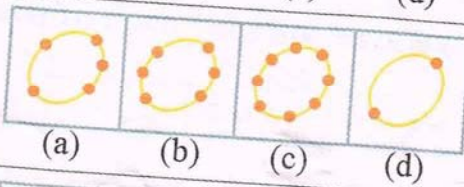
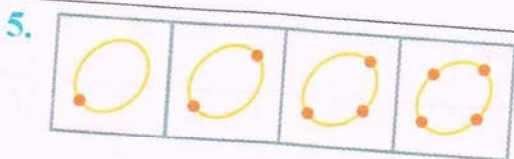
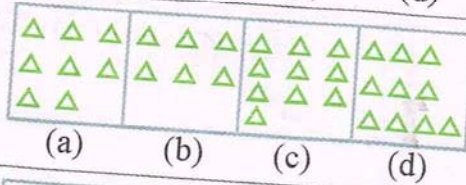
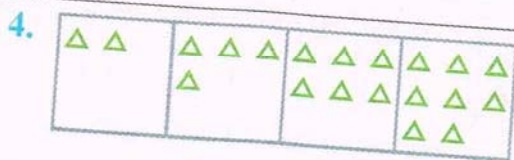
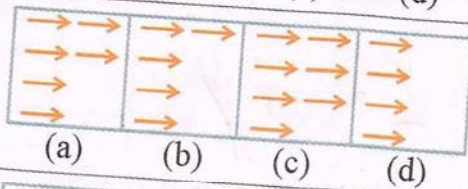
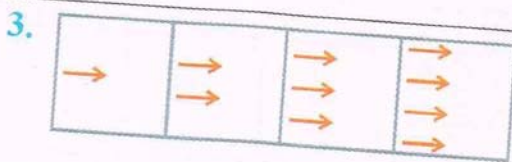
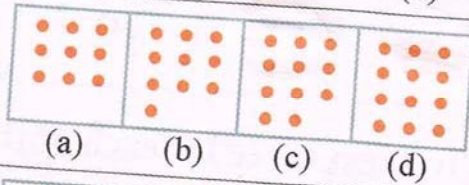
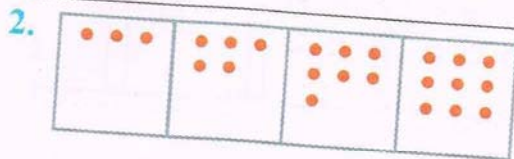
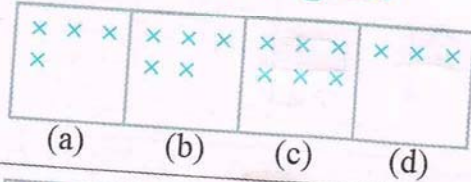
Growing Patterns-1

Tick (✓) from the answer figures which comes next.

Problem Figures







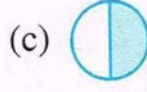
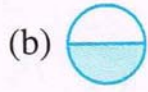
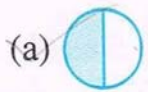
Answers Figures






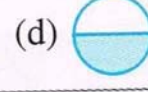
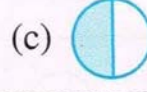

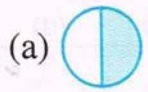
Analogy (Abstract Figures)

Tick (✓) the right choice.

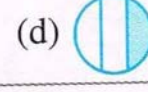
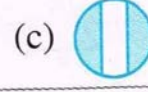
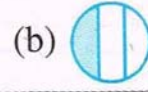
1.  :  ::  : ?



2.  :  ::  : ?





3.  :  ::  : ?



4.  :  ::  : ?





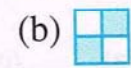

5.  :  ::  : ?



6.  :  ::  : ?








7.  :  ::  : ?











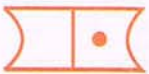

Classification (Abstract Figures)

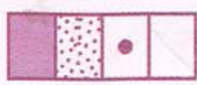

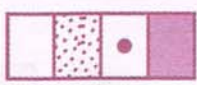


Encircle the tag of the odd one.






1.






				
(a)	(b)	(c)	(d)	(e)
2.






				
(a)	(b)	(c)	(d)	(e)
3.






				
(a)	(b)	(c)	(d)	(e)
4.

				
(a)	(b)	(c)	(d)	(e)
5.

				
(a)	(b)	(c)	(d)	(e)
6.

				
(a)	(b)	(c)	(d)	(e)
7.

				
(a)	(b)	(c)	(d)	(e)
8.

				
(a)	(b)	(c)	(d)	(e)

18) संन्यासी न राजा से कितने पौधे लंगवाए ?
A) एक हजार B) एक सौ C) एक सौ एक

19) किस के अभाव में मनुष्य अस्वस्थ हो जाता है।

A) धन के अभाव B) भ्रम के अभाव C) भोजन के अभाव

Q-3 विलोम शब्द लिखिए (15)

1) मित्र 2) प्रशंसा 3) सुरक्षित 4) धैर्य 5) शीघ्र 6) सम्मानित

विशाल प्रसिद्ध अद्भुत आनंद परिचित लुभाना जीवन लाभ प्रशंसा स्वस्थ प्रसन्न सुखेध

Q-4 शब्दाथ लिखिए (5) 1) अधिवाधिक 2) विकलांग 3) उपकारी

4) आषा 5) थीम पार्क 6) परिचित 7) भावी 8) यज्ञ 9) समाधान

10) प्रतीक्षा 11) मोहित 12) हुंता 13) अद्भुत

Q-5 पर्यायवाची (समानार्थी शब्द) (15)

1) स्कूल 2) रात, दरवाजा, लफटे बहादुरी, बादल संसार वाणी वारिशा राजा भ्रम संपति शरीर

प्रबंध शुश्रूषा सुंदर अक्षरों में लिखो

Q-6 पढ़कर लिखिए (Copy & Down) (20)




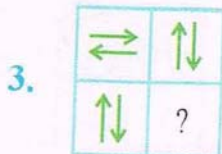
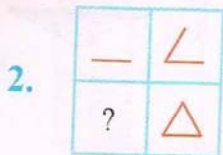
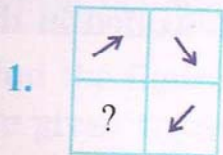
1) डिजनीलैंड पार्क सपनों की अद्भुत दुनिया है। यह कॉलिफोर्निया में ही स्थित है। वास्तव में इस थीम पार्क का निर्माण वाल्ट डिजनी ने किया और उनके नाम पर इसका नाम 'डिजनीलैंड' पड़ा। एक बार उन्होंने संसार के कई प्रसिद्ध मैके को ध्यान में रखा और फ्लोरिडा में 'थीम पार्क' को जोड़ने का प्रयास किया सोमवार 18 जुलाई

1955 को आम जनता के मनोरंजन के लिए खोला गया पहले दिन ही लगभग 50,000 लोगों ने इस जादुई नगरी का आनंद उठाया।

11

FIGURE MATRIX

In each of the following, tick (✓) the figure which completes the given figure matrix.













12






EMBEDDED FIGURES






A figure X is said to be embedded in figure Y, if figure Y contains figure X as its parts.






In each of the following, tick (✓) the figure which is embedded in the given figure.






1.  (a)  (b)  (c)  (d) 

2.  (a)  (b)  (c)  (d) 

3.  (a)  (b)  (c)  (d) 

4.  (a)  (b)  (c)  (d) 

5.  (a)  (b)  (c)  (d) 

6.  (a)  (b)  (c)  (d) 



Gurunanak & Chandraketu Pandya English Medium School
Shri Rajanikant Vyas & Chandraketu Pandya English Medium Higher Secondary School
(Pre-Primary, Primary, Secondary & Higher Secondary - Science and Commerce Stream)

Kumbhanath Society, Aavkar Hall Road, Maninagar, Ahmedabad-8. Ph. 25450086 • www.gnchool.com

STD 4th

F.A 1 EXAMINATION

MARKS 300

SUB ENV

DATE

Q-1 FILL IN THE BLANKS.

(80)

- 1 Aman and woman get _____ to each other.
- 2 Our ears alert us to dangerous _____
- 3 Teachers of practical subjects are called _____
- 4 Many old people live together in _____
- 5 Parents and teachers children to treat all friends _____
- 6 _____ is organized in kota in Rajasthan.
- 7 Stalls of Indian _____ and other trinkets are set up in Diwali fairs.
- 8 The full form of NCW is _____
- 9 Skin _____ our whole body.
- 10 A grandmother is mother's _____
- 11 Aman and woman get _____ to each other.
- 12 Our ears alert us to dangerous _____
- 13 Teachers of practical subjects are called _____
- 14 Many old people live together in _____
- 15 Parents and teachers children to treat all friends _____
- 16 _____ is organized in kota in Rajasthan.
- 17 Stalls of Indian _____ and other trinkets are set up in Diwali fairs.
- 18 The full form of NCW is _____
- 19 Skin _____ our whole body.
- 20 A grandmother is mother's _____
- 21 A _____ is a unit of people who live together .
- 22 Some organs send signals to the _____
- 23 University level teachers are called _____
- 24 People living in the same area from _____ association.
- 25 A winner should accept praise _____
- 26 A _____ is held every year in Goa.
- 27 _____ raise their trunks to salute people
- 28 _____ is a good way to spend time with friends and family members.
- 29 Teachers of practical subject are called _____
- 30 A _____ is a source of joy for all the family members.
- 31 We should protect food from getting _____
- 32 Activities of micro-organism like _____ and _____ spoil the food.
- 33 Merchants store grains in _____
- 34 Turmeric gives an intense _____ colour.
- 35 Many schools provide _____ to the students.
- 36 _____ is a combination of several raw spices blended together.
- 37 Chapatti is the staple food in the states of _____
- 38 Eid-ul-fitr is also called _____.
- 39 Use a good _____ and _____.
- 40 Visit the dentist once in _____ .

- 41 The new teeth that grow in place of milk teeth are called _____
- 42 Make sweets and chocolates an _____ treat.
- 43 There are total of four _____ in our month.
- 44 All animals have _____ covering their bodies.
- 45 An owl's ears are behind its _____
- 46 _____ eat different types of food.
- 47 Rabbits are _____ and timid animals.
- 48 _____ provide protection.
- 49 When a tree is cut down, many animals become _____
- 50 _____ live in underground tunnels.
- 51 Horses are kept in a _____
- 52 An _____ lives among the rocks in the sea.
- 53 The _____ ants are responsible for repairing a damaged ant hill.
- 54 The young ones _____ the old and dying adults.
- 55 All young babies need _____ and _____
- 56 Young cockroaches are called _____
- 57 Young birds have no _____
- 58 In mammals, babies grow inside the mother's _____
- 59 Always keep the food _____
- 60 Merchants store grains in _____
- 61 Many old people live together in _____
- 62 Parents and teachers children to treat all friends _____
- 63 _____ is organized in kota in Rajasthan.
- 64 Stalls of Indian _____ and other trinkets are set up in Diwali fairs.
- 65 The full form of NCW is _____
- 66 Teachers of practical subjects are called _____
- 67 Many old people live together in _____
- 68 Parents and teachers children to treat all friends _____
- 69 _____ is organized in kota in Rajasthan.
- 70 Stalls of Indian _____ and other trinkets are set up in Diwali fairs.
- 71 Some organs send signals to the _____
- 72 University level teachers are called _____
- 73 People living in the same area from _____ association.
- 74 A winner should accept praise _____
- 75 A _____ is held every year in Goa.

Q-2 MATCH THE FOLLOWING.

(43)

- | | |
|--------------------|----------------------|
| 1 Pictures | make muscles strong |
| 2 SEWA | uncle |
| 3 Sports and games | photographers |
| 4 Dussehra mela | see |
| 5 Eyes | women's organization |
| 6 Mother's brother | kota |
| 7 Pictures | make muscles strong |
| 8 SEWA | uncle |
| 9 Sports and games | photographers |
| 10 Dussehra mela | see |

11Eyes	women's organization
12Mother's brother	kota
13Aunt's child	nurses
14Tongue	towns and cities
15Care of patients	Ramlila
16Municipal corporation	cousin
17Indoor game	taste
18A cultural play	ludo
19Crown	Trains
20Monkey	caterpillar
21Tearing Teeth	Diwali
22Rabbit	embryo
23Flossing	part of the tooth which is seen
24Tiger	sharp pointed front teeth
25pantry car	canines
26Developing baby	tree
27Sweets	to remove food particles
28 Lion	shading of skin
29 Dog	shivratri
30 Moulting	burrow
31 Thandai	cave
32 Butterfly	Kennel
33 Aunt's child	pushkar
34 Tounge	shivratri
35 Machines	bristles
36 Gram panchayat	maggot
37 Indoor game	aunt
38 Cattle fair	cousin
39 Thandai	taste
40 Insects	engineers
41 Monkey	villages
42 Housefly	ludo
43 father's sister	s tree

Q-2 STATE WEATHER TICK THE STATEMENTS ARE TRUE OR FALSE.

(28)

- 1 Thandai is a popular drink of Durga puja-
- 2 Cloves are also used to freshen the breath after meals.
- 3 The Government provides Mid-Day meals.
- 4 Visit your dentist every six years.
- 5 Teeth improve our appearance-
- 6 Use any toothpaste and toothbrush-
- 7 Wheat is grown in fields-
- 8 We make chapattis from flour-
- 9 Germs cannot breed at high temperature-
- 10 Canines help in swallowing the food-
- 11 Sarson ka saag is a south Indian food-
- 13 Germs cannot breed at high temperatures-
- 14 We should throw away the surplus food-
- 15 We smell things with our tounge-
- 16 A blind person cannot speak-
- 17 Vendors sell rae products in the local market-
- 18 We should store the surplus food in the refrigerator-

19 Sweets are available on sale throughout the country on Diwali-

20 Sarson ka saag is a south Indian food-

21 Thumb sucking is the most common habit in childhood-

22 Visit your dentist every six years.

23 Teeth improve our appearance-

24 Use any toothpaste and toothbrush-

25 Wheat is grown in fields-

26 We make chapattis from flour-

27 We should store the surplus food in the refrigerator-

28 Sweets are available on sale throughout the country on Diwali-

Q-3 GIVE THE ANSWERS OF THE FOLLOWING SHORT QUESTIONS. (ANY 4)

(74)

1 Write the names of some indoor games.

2 Where is the Gangasagar fair held?

3 List some activities of school clubs.

4 How do weavers weave clothes?

5 Which organs send signals to the brain?

6 Write the names of some indoor games.

7 Where is the Gangasagar fair held?

8 List some activities of school clubs.

9 How do weavers weave clothes?

10 Which organs send signals to the brain?

11 On makar sankranti day, what do the people do?

12 What is the duty of good player?

13 Who is consumer?

14 Who are professionals?

15 What is good touch?

16 What do vendors sell?

17 What is the use of an air-tight container?

18 How is red chili used in food items?

19 Give the names of some food eaten in eastern india.

20 What are 'incisors'?

21 What does the root hold the tooth to?

22 Name three animals that gnaw their food.

23 Do fish have any ears?

24 Where do ants live?

25 Name some aquatic animals.

26 What is reproduction?

27 What are the young ones of a frog called?

28 Who is grandmother?

29 What are our sense organs.

30 Explain the various tasks of a nurse.

31 List some activities of school clubs.

32 What is the duty of a good player?

33 Where is the Gangasagar fair held?

34 What is the use of an air-tight container?

35 Name any two food items eaten on Eid-ul-fitr.

36 What does the root hold the tooth to?

37 Name three animals that gnaw their food.

Q-4 GIVE THE ANSWERS OF THE FOLLOWING LONG QUESTIONS. (ANY 2)

(75)

- 1 List the functions of Grampanchayat.
- 2 What is the role of beautician?
- 3 What is an adoption?
- 4 List the functions of Grampanchayat.
- 5 What is the role of beautician?
- 6 What is an adoption?
- 7 What is Nagaur fair?
- 8 How are games important for children?
- 9 Write a note on various kinds of occupations.
- 10 How does food get spoiled?
- 11 Explain the concept of kitchen on wheels.
- 12 Write about why grinding teeth are so important.
- 13 What do you know about a rabbit's ears?
- 14 Why should we not cut down trees?
- 15 How does a baby develop?
- 16 What is reproduction essential?
- 17 Where do domestic animals live?
- 18 Write a few lines about an elephant's ears.
- 19 What is the importance of teeth?
- 20 What do you mean by the term 'eating together'?
- 21 Write a few lines on a 'newborn baby'?
- 22 What is the function of the ears? Explain
- 23 What does a doctor do?
- 24 List the function of a gram panchayat.
- 25 How are games important for children?

s



Gurunanak & Chandraketu Pandya English Medium School
Shri Rajanikant Vyas & Chandraketu Pandya English Medium Higher Secondary School
(Pre-Primary, Primary, Secondary & Higher Secondary - Science and Commerce Stream)

Kumbhanath Society, Aavkar Hall Road, Maninagar, Ahmedabad-8. Ph. 25450086 • www.gnicschool.com
Std 4th Gujarati Date Marks 300

Q-૧ સમાનાર્થી શબ્દ લખો [30]

જગલ - પક્ષી - નોકર -
ભાઈ - રાજા - હવા
વાંદરો કમળ લાલચ ધોળું

[B] વિરોધી શબ્દ લખો [30]

દિવસ - મોટો - સુરજ ડાબો ધનવાન
ઠડી ધરતી કાળું હાર ઝેરી

Q-2 જોડણી જોડો [30]

] સુરજ ધુવડ - આરામગૃહ કીડી સુજ
નિર્ધાક પરિણામ આશ્વાશન ઘડીઆળ ઉતસાહ

પ્ર ૪ ખાલી જગ્યા પૂરો [૨૦]

- ૧ હાથી એ શિયાળ ને _____ માં પકડી ઉચે ઉછાળ્યુ
- ૨ રાજાએ દોડીને _____ લઇ લીધા.
- ૩ અચનાક માખી રાજા ની _____ પર જઈને બેઠી
- ૪ બાગમાં _____ ફૂલો ખીલે છે
- ૫ રાજા ને ખુબજ _____ થવા લાગ્યો
- ૬ મને પણ _____ લાવી આપો
- ૭ હમણા પૈસાની _____ તંગી છે
- ૮ દિવાળી આવી ગઈ , _____ પણ આવ્યું
- ૯ પેલા છોકરાને _____ માં ખુબ તકલીફ પડે છે .
- ૧૦ _____ એ મહાત્મા ની સેવાચાકરી કરવા લાગ્યા

Q-3 રૂઢીપ્રયોગ લખો [30]

- ૧ આવી ચઢવું ૨ કામ સોપવું ૩ તાલીમ આપવી
- ૪ વાત સંભાળવી ૫ દુખ દુર થવું ૬ ઉપદેશ આપવો
- ૭ કિમત સમજાઈ જવી ૮ કજીયો કરવો ૯ જીદ કરવી ૧૦
- ૧૦ આંસુ છલકાઈ આવવા

બ પ્રસ્નોના જવાબ લખો [30]

- ૧ રાજા હંસોની શી વિશિષ્ટતા હતી ?
- ૨ રાજા એ વાંદરા ને પોતાનો સેવક તરી કે કેમ રાખ્યો ?
- ૩ સોનેરી પંખી ને જોઈને રાજાએ શું વિચાર્યું ?

- ૬ આપણે ઉનાળા માં શું ગમે છે ?
 ૭ વીજળી નાં ચમકારા આપણે ક્યારે ગમ છે
 ૮ રીછ સિંહ ને શેનું ભોજન આપવાનું કહે છે ?
 ૯ રીછ સિંહ ને ક્યા લઇ જાય છે
 ૧૦ વનરાજા શું કહેતા કહેતા ભાગ્યા ?
 ૧૧ મહાત્મા પાસે જઇ યુવકે શું કહ્યું ?
 ૧૨ મહાત્મા એ યુવકને કેવીરીતે અમીર સાબિત કર્યો ?

પ્ર ૪ કાવ્ય પૂર્ણ કરો

[૨૦]

મને ચોમાસે _____
 વાદળ રમે
 મને માનવ _____
 છોરા રમે

પ્ર ૫ નીબધ લખો

[૨૦]

- ૧ ૧૫ મી ઓ ગસ્ત ૨ મોર ૩ રક્ષાબંધન

પ્ર ૬ જોડકા જોડો

[૨૦]

- | | |
|-----------|---------------|
| ૧ ચોમાસું | માનવ મહેરામણ |
| ૨ આભલે | સુરજ નો તડકો |
| ૩ ઉનાળો | વીજના ચમકારા |
| ૪ શિયાળો | સધ્યા ની સોબત |
| ૫ મેળા | ચમકતો ચાંદલો |

પ્ર ૭ સુદેર અક્ષરે લખો

[૩૦]

કોઈ એક ગામ માં એક સત પાસે એક યુવક આવી પચ્યો . તે ખુબ ગરીબ હતો
 યુવકે સંતને પ્રણામ કર્યા અને દુઃખી અવાજે પોતાના દુખ કહ્યા , તે વિનંતી કરતાં સંતને કહેવા લાગ્યો , " હે મહાત્મા , હું
 સાવ ગરીબ છું . મારી પાસે એક રૂપિયો નથી
 માટે દુખ દુર કરવાનો કોઈ ઉપાય બતાવો .

પ્ર ૮ શબ્દસમૂહ માટે એક શબ્દ લખો

[૨૦]

- ૧ ચાર પગે ચાલનાર _____
 ૨ આકાશ માં થતી વીજળી અને મેઘગર્જના _____
 ૩ અગ્નિમાંથી છુટો પડેલો સળગતો કણ _____
 ૪ સુર્યાસ્ત પછી અને રાત પડતા પહેલાનો સમય _____
 ૫ માણસોનો વિશાળ સમૂહ _____

પ્ર ૯ ખરાં ખોટા લખો

[૨૦]

- ૧ જંગલ માં રીછ હાથમાં સોટી લઇ એકલું ફરવા ચાલ્યું []
 ૨ રીછ ને જંગલમાં સામે હરણ મળ્યું []
 ૩ સિંહ જાય છે આગળ રીછ જાય છે પાછળ []
 ૪ રીછે સિંહને ખાવા માટે મધની લુંમેલુંમ આપી []

- ૬ આપણે ઉનાળા માં શું ગમે છે ?
 ૭ વીજળી નાં ચમકારા આપણે ક્યારે ગમ છે
 ૮ રીછ સિંહ ને શેનું ભોજન આપવાનું કહે છે ?
 ૯ રીછ સિંહ ને ક્યા લઇ જાય છે
 ૧૦ વનરાજા શું કહેતા કહેતા ભાગ્યા ?
 ૧૧ મહાત્મા પાસે જઇ યુવકે શું કહ્યું ?
 ૧૨ મહાત્મા એ યુવકને કેવીરીતે અમીર સાબિત કર્યો ?

પ્ર ૪ કાવ્ય પૂર્ણ કરો

[૨૦]

મને ચોમાસે _____
 વાદળ રમે

મને માનવ _____
 છોરા રમે

પ્ર ૫ નીબધ લખો

[૨૦]

- ૧ ૧૫ મી ઓ ગસ્ત ૨ મોર ૩ રક્ષાબંધન

પ્ર ૬ જોડકા જોડો

[૨૦]

- | | |
|-----------|---------------|
| ૧ ચોમાસું | માનવ મહેરામણ |
| ૨ આભલે | સુરજ નો તડકો |
| ૩ ઉનાળો | વીજના ચમકારા |
| ૪ શિયાળો | સધ્યા ની સોબત |
| ૫ મેળા | ચમકતો ચાંદલો |

પ્ર ૭ સુદેર અક્ષરે લખો

[૩૦]

કોઈ એક ગામ માં એક સત પાસે એક યુવક આવી પચ્યો . તે ખુબ ગરીબ હતો
 યુવકે સંતને પ્રણામ કર્યા અને દુઃખી અવાજે પોતાના દુખ કહ્યા , તે વિનંતી કરતાં સંતને કહેવા લાગ્યો , " હે મહાત્મા , હું
 સાવ ગરીબ છું . મારી પાસે એક રૂપિયો નથી
 માટું દુખ દુર કરવાનો કોઈ ઉપાય બતાવો .

પ્ર ૮ શબ્દસમૂહ માટે એક શબ્દ લખો

[૨૦]

- ૧ ચાર પગે ચાલનાર _____
 ૨ આકાશ માં થતી વીજળી અને મેઘગર્જના _____
 ૩ અગ્નિમાંથી છુટો પડેલો સળગતો કણ _____
 ૪ સુર્યાસ્ત પછી અને રાત પડતા પહેલાનો સમય _____
 ૫ માણસોનો વિશાળ સમૂહ _____

પ્ર ૯ ખરાં ખોટા લખો

[૨૦]

- ૧ જંગલ માં રીછ હાથમાં સોટી લઇ એકલું ફરવા ચાલ્યું []
 ૨ રીછ ને જંગલમાં સામે હરણ મળ્યું []
 ૩ સિંહ જાય છે આગળ રીછ જાય છે પાછળ []
 ૪ રીછે સિંહને ખાવા માટે મધની લુંમેલુંમ આપી []

14 Why could the little girl not buy a ~~for her father?~~

15 Why did Nipun decide to go to his house after buying the flowers?

Q-4 Q-A. (Story book)

1. Which tiny insect crawled across the grass?
2. Who lays eggs? (Mother ant)
3. What was the brownie's name?
4. Give the name of the little guinea pig?
5. Describe ant ant.

6. What kind of sons were they?

7. How did old John look after his orchard?

8. Why were his sons so joyful?

9. What treasure did they find?

10. How did the sons gather the fruit?

11. What sound did the spring make?

12. What did it become as it ran down hill side?

13. What was the stream called when it became much bigger?

- 20. The fisherman caught ugly - Red fish. X
- 21. The man on horseback did not stop on spotting the workers. X
- 22. The supervisor did not want to dirty his clothes. X
- 23. The man on horseback was the Prime Minister. X
- 24. Some jobs are more important than all other jobs. X.

Q3 Write Answers the following. MW

1. What kind of a person was the minister?
2. What might have happened if the guard had opened the gate for the ministers cars?
3. What did the driver ask the guard to do?
4. Why did the guard not open the gate?
5. What kind of a person was the fisherman?
6. What did the man give to the fisherman? (Cow)
7. What did the fisherman want to make the fisher man and his wife? (Happy)
8. What kind of a person was the man? (crook)
9. Which quality of the fisherman saved him and his wife? (Kindness)
10. Why did Nipun asked the driver to drive fast?
11. How did the Nipun feel when he entered his office building?
12. Why did Nipun thank his father?
13. Why did Nipun stop at the florist?

24 Nipun always felt proud when he entered the building.

Q.2. True or False

1. Sarojini wanted her mother's saree for orphanage.
2. Rina was a good friend to Suchi.
3. Suchi cared about her marks or studies.
4. The minister had a good reputation.
5. It is important to do our duty.
6. The guard and the minister were loyal to each other.
7. The saree was useless because Sarojini's mother's great grandfather had made it.
8. Rina helped Suchi in time of need.
9. Rina was not a good friend to Suchi.
10. The minister scolded the guard.
11. The guard allowed the ministers to pass.
12. It was a Mother's Day.
13. The girl's father was not alive.
14. Nipun had started the business himself.
15. Nipun went to meet his parents after the little girl.
16. The little girl wanted to buy a bouquet of flowers for her dead father.
17. The fisherman was a kind man.
18. The fish spoke to a fisherman.
19. Suddenly there was a loud knock on the door.

Q-I Fill in the blanks.

1. _____ had a very good reputation.
2. Minister's car reached a _____.
3. The _____ was surprised and angry with the guard.
4. _____ helped Suchi in time of need.
5. Suchi ~~need~~ did the _____ thing by going back to Hatida.
6. Sarojini wanted to give the saree to the _____.
7. Kandelhiji asked people to stop using _____.
8. Mother's great grandfather was a _____.
9. The _____ quietly listened to the driver.
10. _____ patted the guard.
11. Minister and guard, both were doing there _____.
12. Suchi went to her room feeding _____.
13. _____ replied sweetly as everybody around them looked at her.
14. ~~_____ does not come easily.~~
15. Spinning Khadi was one of way of ~~the~~ shadow in to the _____ that we are _____.
16. The British took _____ grown in India & sent it to _____.
17. Mother took the _____ from Sarojini.
18. We are all _____ (equal).
19. An act of kindness always brings _____ (reward).
20. Loving your parents is like loving God.
21. The girl's father was not alive.
22. It was _____ Day (Father's).
23. I will place the rose on his _____ (grave).

14. Why was the river sad when it entered a city?
15. Why did the river become excited at the docks?
16. What were the men doing on the cargo ship?

Q.5 Write Paragraph in Cursive writing.

Always breathe through the nose and not the mouth. Keep gentle smile to relax your body and mind and enjoy yoga. Before beginning yoga, it is better to do yoga as early in the day as possible. Yoga is best done on a light or a relatively empty stomach. Do yoga in a clean and airy place. Do not do yoga on a bare floor. Do it on a carpeted floor.



Gurunanak & Chandraketu Pandya English Medium School
Shri Rajanikant Vyas & Chandraketu Pandya English Medium Higher Secondary School
(Pre-Primary, Primary, Secondary & Higher Secondary - Science and Commerce Stream)

Kumbhanath Society, Aavkar Hall Road, Maninagar, Ahmedabad-8. Ph. 25450086 • www.gncschool.com

ADDY'S International Kindergarten & Curriculum @ GNC School

Std- 4th
sub- Hindi

S. A. I Assiment.

M-300

- Q-1 सही उत्तर पर (✓) का निशान लगाइए 165.
- 1) हम अनेक होकर भी 'एक' हैं क्योंकि
अ) हम सब भारतवासी हैं। (ब) हममें एकता है। (क) हम अलग-अलग हैं।
- 2) 'किंतु गीत-भाव एक' का अर्थ क्या है ?
अ) हमारे मन में एकता का भाव है। (ब) हमारा शारीरिक एकता का संदेश देता है। (क) हम सब मिल-जुलकर रहते हैं।
- 3) भारत के अंग क्या हैं ?
अ) भारत के अंग प्रदेश। (ब) भारत के पड़ोसी देश। (क) भारत के पड़ोसी देशों के अंग
- 4) सेठ कैसा था ?
अ) अच्छा। (ब) चालाक। (क) लालची
- 5) ब्राह्मण कैसा था ?
अ) सीधा-सादा। (ब) मुख्य। (क) धार्मिक
- 6) सेठ ने एक बाल्टी, पानी के लिए कितने रूपय माँगे ?
अ) सौ रूपय। (ब) दो सौ रूपय। (क) पचास रूपय
- 7) राजा ने सेठ से किशोरों के रूप में प्रतिदिन कितने रूपय देने का कहा ?
अ) पाँच सौ रूपय। (ब) हजार रूपय। (क) सौ रूपय
- 8) हमारे त्योहार किस पर आधारित हैं ?
अ) धर्म पर। (ब) अलग-अलग मौसम में आने वाली प्रसन्नता पर। (क) दोनों ही बातें
- 9) जीवन में प्रेम और खुशियों के शंख विखरने का प्रतीक कौन-सा त्योहार है ?
(अ) होली। (ब) दीवाली। (क) दशहरा
- 10) भाई-बहन के प्यार का त्योहार कौन-सा है ?
अ) दशहरा। (ब) राखी। (क) गुरुपर्व
- 11) ओणम का त्योहार कहाँ मनाया जाता है ?
अ) असम। (ब) केरल। (क) तमिलनाडु
- 12) रज्जी कौन-सा काम मन से करती था ?
अ) पढ़ना-लिखना। (ब) खेलना-कूदना। (क) निशाना-लड़ाना
- 13) माली को उसने कैसे डराया ?
अ) बिच्छू से। (ब) गुल्लक चलाकर। (क) मूँह बनाकर
- 14) बिच्छू से रज्जी ने किस को डराया ?
अ) मोहन को। (ब) स्वर्गादीप को। (क) सुबाई को।
- 15) रज्जी की शिकायत से परेशान होकर उसके भाला-नीपला ने क्या किया ?
अ) उसके शूब पिरार की। (ब) उसे शूलक जाने नहीं दिया। (क) उसके प्रधानाचार्य जी से मिलकर सामाधान निकाला।
- 16) आसमान में कैसे बादल आकर छाए ?



Gurunanak & Chandraketu Pandya English Medium School
Shri Rajanikant Vyas & Chandraketu Pandya English Medium Higher Secondary School
 (Pre-Primary, Primary, Secondary & Higher Secondary - Science and Commerce Stream)

Kumbhanath Society, Aavkar Hall Road, Maninagar, Ahmedabad-8. Ph. 25450086 • www.gnchool.com

ADDY'S International Kindergarten & Curriculum @ GNC School

- 17) नन्हे जल-कण क्या बन गए ?
 (अ) तालाब - पोखर (ब) सागर (क) भाप
- 18) अंधरे में राह कौन दिखाना है ?
 (अ) बाइक (ब) दिजली (क) बाइरिश
- 19) कौन मगन मन होकर नाचता है ?
 (अ) मोर (ब) मोरनी (क) बच्चे
- 20) ये बाइक कैसे लकाले हैं ?
 (अ) अलगा अलगा पशुओं जैसे (ब) पेड़ों जैसे (क) दोनों ही
- 21) अनुज और इशा उदास क्यों हो गए ?
 (अ) अचानक दिजली चली गई (ब) अपना मनपसंद प्रोग्राम नहीं देख पाए
 (क) दोनों ही बातें
- 22) अनुज और इशा का पडोशी कौन था ?
 (अ) शेरिल (ब) सुनील (क) मोरित
- 23) चाँड़ किस रात सब से अधिक चमकता है ?
 (अ) अमावस्या की (ब) पूर्णिमा की (क) अंधेरी रात की
- 24) धरती से कछ लोग चाँड़ पर कैसे गए ?
 हवाप जहास के शेकरे के मेरे के
- 25) चाँड़ में रतनी चमक कहाँ से आती है ?
 (अ) सूरज के (ब) धरती के (क) अन्य तारों के
- 26) फोजबी और बमबेम कहाँ रहती थी ?
 (अ) दिल्ली में (ब) चेन्नई में (क) गुवाहाटी में
- 27) दोनों बहनें का आशते कैसा थी ?
 (अ) एक जैसे (ब) बिल्कुल अलगा (क) बहुत अरथी
- 28) फोजबी कौन से गृह्य उच्छा करती थी ?
 (अ) बाइ (ब) कल्पक (क) मणिपुरी
- 29) स्कूल के वार्षिक उत्सव में कौन भाग नहीं ले सकी ?
 (अ) फोजबी (ब) बमबेम (क) रमन्ना
- 30) ये इसे कहाँ रहत थी ?
 (अ) गड्डर में (ब) वील में (क) तालाब के किनारे
- 31) इसे कछप का लकाल कहाँ चले ?
 (अ) नर में (ब) समुद्र में (क) आसमान में
- 32) तारक समुद्र में कैसे जा गिरा ?
 (अ) इसने से (ब) शेर के (क) अधिक बोलने के
- 33) तारक समुद्र में पहुँचकर थकित इह बाया क्योंकि
 (अ) वहाँ चारा और पाना ही पाना था।
 (ब) उहाँ धरती नहीं दिखाई दे रही थी।

Q-2 प्रश्नों के उत्तर लिखिए

85

- 1) हम अनेक होकर भी एक कैसे हैं ?
- 2) विविध रंग-रूप के लोग किस का अंग हैं ?
- 3) सैठ ने ब्राह्मण को कुंदा से पानी क्यों नहीं भरने दिया ?
- 4) ब्राह्मण दुखी क्यों हो गया ?
- 5) न्याय के लिए ब्राह्मण किस के पास गया ?
- 6) राजा का फौसला सुनकर सैठ अपना-बचका क्यों रह गया ?
- 7) भारत में कौन कौन से त्योहार बहुत धूमधाम से मनाए जाते हैं ?
- 8) श्रावण का त्योहार कैसे मनाया जाता है ?
- 9) ईद के दिन मुसलमान भाई क्यों करते हैं ?
- 10) सिक्ख धर्म के मानने वाले 'गुरुपव' को कैसे मनाते हैं ?
- 11) राजा का पुरा नाम क्या था और वह कैसे लड़का था ?
- 12) राजा ने तालाब में बिरी गेड़े को कैसे निकाला ?
- 13) राजा के भाला-पिता क्यों परेशान थे ?
- 14) बाइलो को कौन पकड़कर लाता है ?
- 15) कवि को बाइल कैसे कैसे लंबाते हैं ?
- 16) बाइल में जल की लूँ कहीं से आती है ?
- 17) बाइलों को शेरजले देखकर भोर क्यों करता है ?
- 18) अनुज और बर्र खेत पर जाकर क्यों बैठे गेड़े ?
- 19) उस शत चारों अधिक क्यों चमक रहा था ?
- 20) सूरज क्या है ? और इसे लारों का आकार छोटा क्यों दिखाए ?
- 21) प्राणबी और बमबम कहीं रहती थी ?



Gurunanak & Chandraketu Pandya English Medium School
Shri Rajanikant Vyas & Chandraketu Pandya English Medium Higher Secondary School
 (Pre-Primary, Primary, Secondary & Higher Secondary - Science and Commerce Stream)

Kumbhanath Society, Aavkar Hall Road, Maninagar, Ahmedabad-8. Ph. 25450086 • www.gnchool.com

ADDY'S International Kindergarten & Curriculum @ GNC School

- 22) વીંદોનો વર્ણ દુસરે રીં કિસ લઘ્ અલગા થી ?
- 23) કામલી બામાર કોસે, પડ ગઈ ?
- 24) સાંસ્કૃતિક કાર્યક્રમ દરમિયાને સમય ફામલી વપ્ત સોચ રહી થી ?
- 25) શાહરે સમુદ્ર મેં ઘિરને પર તારક કો કોન મિકા ?
- 26) તારક ને લડે કદમ સે લ્યા કદા ?
- 27) કોન - સો જીવ હોથી સે કઈ ગુણ લડા હોતા હૈ ?
- 28) તારક ને સમુદ્ર મં ઓર કોન કોન - સે જીવ રેલે ?

Q-3 વિક્રોમ શબ્દ લિખિય

- 56

1) અનેક x	13) સફલા x	24) દિન x
2) શરા x	14) પરિચિત x	25) જીવન x
3) ગોત x	15) અંધકાર x	26) વિશ્વાસ x
4) રૂશ x	16) યુશી x	27) પરિચિત x
5) શહર x	17) દાકતા x	28) સંઘાત x
6) શરાઈના x	18) દેશ x	29) નિરૂચય x
7) દાક x	19) દુઃસ્વ x	30) નિર્ણય x
8) માલિક x	20) પ્રેમ x	31) વિનય x
9) દુઃસ્વી x	21) અચ્છાઈ x	32) આધ્યાત્મ x
10) ચોલાકી x	22) ગુણ x	33) આસમાન x
11) સત્ય x	23) મુખ x	34) સુદર x
12) ઈમ x		35) નન્દા x
36) કાલકા x	44) ઘરતી x	36) રોસા x
37) પ્રકાશ x	45) અચ્છા x	37) અચ્છા x
38) પુનિમા x	46) યુશા x	38) તેજ x
39) અપર x	47) સ્વસ્થ x	39) નમકીન x
40) અનેક x	48) પ્રસન્ન x	40) ખ્યાશ x
41) પ્રસન્ન x	49) ચતમ x	41) દુર x
42) શરમી x	48) કમજોર x	42) રૂશ x
43) અચ્છી x	49) ગહરા x	

- 30

Q-4 પદ્યધિવાચી	શબ્દ	નૂત્તર	પ્રસન્નતા
1) કંઠ	કારાગૃહ	વિદ્યાથી	અસ્પૃશ્ય
2) ગોત	શામ	ઉત્સવ	પ્રકાશ
3) વિવિધ	ચાંદ	નમકીન	અંધકાર
4) સ્વર	સૂરજ	સ્કૂલ	ભંડકા
5) પાની	તારા	અસ્પૃશ્ય	વિદ્યાથી

Q-5 शब्दांचे लिखित				(60)
वोल्क्या	भुजो	सामाधान	पुस्तक	प्राथमिक
शाश	आधारित	लघुवहार	उद्देश	परिष्कार
टोल्क्या	उत्साह	चमत्कार	पुणिर्मा	उम्मीद
शास	पुस्तक	पुस्तिका	अभावस्था	वार्षिक उत्सव
कठ	आजीवन	विनमृता	अधेश	कुशल
पदेश	पुस्तकता	कारिशा	नजारा	धुमकास
अंश	पुस्तक	नन्ह	तारा	समुद्र
कालची	उपहार	भाप	सुत्र	चकित
सोधा - साश	अंश	जलकण	जुडवा	संसार
न्याय	दोषता	भगन मन	नशीरत	बापूनी
किश्या	गुंश	अध्याय में	आनाकाना	आकृति
अभा	मध्योवकाश	क्रांतीकाम	क्रास्ट फूड	श्वारा
कोरागृह	कारनामे रु	मंड मंड	सांस्कृतिक क्रांति	पडाथ

Q-5 निबंध लिखो

(20)

1) शब्द शुभरी भा 2) पन्ड अगस्ट 3) दिवाली

Q-5 पत्र लिखो - (copy & down)

(20)

* In Text book

4th



Gurunanak & Chandraketu Pandya English Medium School
Shri Rajanikant Vyas & Chandraketu Pandya English Medium Higher Secondary
(Pre-Primary, Primary, Secondary & Higher Secondary - Science and Commerce S

Kumbhanath Society, Aavkar Hall Road, Maninagar, Ahmedabad-8. Ph. 25450086 • www.gncschool.com

ADDY'S International Kindergarten & Curriculum @ GNC School

- अनेक शब्दों के लिए एक शब्द
- 1) भरी बरतने पढ़ने आते हैं (7)
 - 2) एक शब्द पैरा हूँ से बरतते
 - 3) विरुद्ध ब्रह्म करने वाला
 - 4) स्वीकारों के संबंधित
 - 5) धारण करने वाला
 - 6) वह स्थान भरी शोधियों का इलाक़ होता है।
 - 7) देखने वाले लोग
 - 8) मुहावरों का अर्थ लिखिए। (11)
 - 9) अंगर भरकर करना
 - 10) अपने पैरों पर खड़ा होना
 - 11) कमर करके
 - 12) छपक छुड़ाना
 - 13) चहरी बिल्क उठना
 - 14) फूलों न समान
 - 15) दिल बाँका बाँका होना
 - 16) मन में लड्डू फूटना
 - 17) धी के दिनें अलाना
 - 18) हक्का बक्का बह जाना
 - 19) आवें खोलना

— (complete) —

Best of Luck.

