



Gurunanak & Chandraketu Pandya English Medium School
Shri Rajanikant Vyas & Chandraketu Pandya English Medium Higher Secondary School
(Pre-Primary, Primary, Secondary & Higher Secondary - Science and Commerce Stream)

Kumbhanath Society, Aavkar Hall Road, Maninagar, Ahmedabad-8. Ph. 25450086 • www.gnchool.com
STD 5TH F A 3 m 90

પ્ર - ૧ પ્રશ્નો ના જવાબ આપો

- ૧ વિષ્ણુદત્ત નું ગાડું કાદવ કીચડ માં કેવી રીતે ફાઈલ ગયું ?
- ૨ ગાડું કાદવકીચડમાંથી નીકળે તે માટે વિષ્ણુદત્તે શું કર્યું ?
- ૩ પ્રગટ થયેલા વનદેવતા એ વિષ્ણુદત્તે શું કહ્યું ?
- ૪ પૈડું કાદવ કીચડ માંથી બહાર આવ્યા બાદ વનદેવતા એ વિષ્ણુને શું કહ્યું ?
- ૫ ફાગણ મહિનો ક્યાં ક્યાં ફોર્મ લઈ આવ્યો ?
- ૬ સંગીતની મહેફિલ માં કયો રાગ ગવાયો છે ?
- ૭ કઈ ઋતુને ઋતુરાજ કહેવાય છે ?
- ૮ આનાદિત લોકો શું ઝીને ધૂમ મચાવે છે ?
- ૯ ગાડો કેવો હતો ?
- ૧૦ બાજ સસલાને કેવી રીતે પકડતા
- ૧૧ સસલાને પકડવા કાગડા એ શું વિચાર્યું ?
- ૧૨ સસલું ખડક પાછળ સતાઈ જતા કાગડા નું શું થયું ?
- ૧૩ નાના બાળકો મોટા થઈને શું કરશે ?
- ૧૪ પ્રકૃતિમાં થતા ક્યાક્યા ફેરફાર ને કાવ્ય માં દર્શાવાયા છે ?
- ૧૫ બાળકો અજાણ્યા પંથે શી રીતે જશે ?
- ૧૬ સદા હસતા રહેવાની શિખામણ કાવ્ય ની કી પંક્તિ માંથી મળે છે ?
- ૧૭ મધમાખી અચાનક શું થયું ?
- ૧૮ વૃક્ષ પર બેઠેલા કબુતરે મધમાખી નો જીવ કેવી રીતે બચાવ્યો ?
- ૧૯ પારેવા પર કયું સંકટ આવ્યું ?
- ૨૦ પારેવા નું સંકટ કેવી રીતે દુર થયું ?

પ્ર - ૨ રૂઢિપ્રયોગો ના અર્થ આપો વાક્ય બનાવો

- ૧ ટસ નું મસ ન થવું હાથ જોડવા, પોકાર સાંભળવી, બીજા ના ભરોસે બેસવું, અંતર્ધાન થવું, મોમાં પાણી આવવું, બરાબરી કરવી, પ્રાણ છોડી દેવા, આભાર માનવો, અજાણ હોવું, દઈ થી તડપી ઉઠવું, મૃત્યુ નિશ્ચિત હોવું, સંકટ હોવું

પ્ર - ૩ ખતી જગ્યા પૂરો

- ૧ વિષ્ણુદત્ત પૈડું કાઢવા બળદો ને ----- ફટકારવા લાગ્યા .
- ૨ હે વનદેવતા ! મારી સહાયતા કરો
- ૩ તું બીજાના ભરોસે બેઠો છે , એટલે _____ છે ,
- ૪ હું તમને ઘેર પહોંચતા જ _____ ચઢાવીશ

૫ લહર લહર લહતો ફાગણ _____ ફોરમ લાવ્યો .

૭ પાને પાને ફૂલડાં _____ .

૯ કાવ્યમાં _____ શબ્દ ના અર્થ માટે ઉજાણી શબ્દ વપરાયો છે .

૧૧ પર્વત ની _____ પર બાજ પક્ષીઓ નું એક ગુંડ રહેતું હતું .

૧૨ બુજા દિવસે કાગડો પર્વતના _____ પહોચી ગયો .

૧૪ કાગડાની _____ અને _____ તૂટી ગઈ .

૧૬ મધમાખી એ શિકારી ના હાથ પર _____ માર્યો .

પ્ર - ૩ જોડણી સુધારો

૧ નિસાન મૃત્યુ મધમાંખી શીકારી ગુલાબિ કુલ દરીયો ગિત નાન્કડી સમિત સુવાડું તળેતિ શીકર પરવત છુંતીય મહેફીલ કોયલડી કેસુડો ટહુકિ પીચકારી વિશ્વંદત પરસાદ અંતર્ધ્યાન પરીણામ ચાબૂક

પ્ર - ૪ ખરા કે ખો ઠા વિધાનો જણાવો

૧ કોયલ કોકિલ કાંઠે ફાગ વધાવ્યો .

૩ ફાગણ મહિનામાં રક્ષાબંધન નો તહેવાર આવે છે

૫ શિયાળામાં ઋતુ અઓનો રાજા કહેવામાં આવ્યો છે

૭ કાગડો પર્વત ની ટોચ પર રહેતા બાજને જોતો.

૯ કાગડા ની પાંખ અને ગરદન તૂટી ગઈ

૧૧ મધમાખી દરીયોમાં પડી ગઈ

૧૩ શિકારી એ બંદુક થી પારેવા તરફ નિશાન તાક્યું

૧૪ કબૂતરે પણ મધમાખી નો આભાર માન્યો

૬ લોકો ના હૈથે _____ માયો .

૮ કવી એ _____ ને કોકિલ કાનથી ખી છે

૧૦ કાગડો ખૂબ જ _____ અને ધૂતારો હતો

૧૮ કર ભલા તો હો _____

૧૩ કાગડો ભલા બાજની શી _____ કરે.

૧૫ માંધમાંખી નું _____ નિશ્ચિત હતું

૧૭ પારેવું આ _____ થી અજાણ હતું

૨ ફાગણીયો ગુલાબની કડી એ બેસી લ્હાયો છે.

૪ ફાગણ મહિનામાં સી રાગ ભરી પીચકારી ઉડાડે છે .

૬ પર્વત ની તળેટી માં એક પીપળા નું વૃક્ષ હતું.

૮ કાગડા એ ગીધ ની જેમ ઉડાન ભરી

૧૦ કાગડો તરત જ મરતું પામ્યો

૧૨ કબૂતરે વૃક્ષ પાંદડું મધમાંખી તરફ નાખ્યું

૧૩ મધમાખી એ શિકારી ના પગ પર ડંખ માર્યો



Gurunanak & Chandraketu Pandya English Medium School

Shri Rajanikant Vyas & Chandraketu Pandya English Medium Higher Secondary School

(Pre-Primary, Primary, Secondary & Higher Secondary - Science and Commerce Stream)

Kumbhanath Society, Aavkar Hall Road, Maninagar, Ahmedabad-8. Ph. 25450086 • www.gnchool.com

5th Hindi

F a 3

Ch-9 to 12

m-90

प्र - १ सही उत्तर पर () का निशान लगाए

- १ शीश उठाकर कौन कहता है ? अ) सागर ब) आकाश क) पर्वत
- २ सागर क्या कहता है ? अ) उचा बनने के लिए ब) मचलने के लिए क) मन में गहराए लेन के लिए
- ३ मृदुल उमंग भरने की बात कोण करता है ? अ) लहरे ब) आकाश क) पृथ्वी
- ४ धैर्य न छोड़ने के लिए कौन कहता /कहती है अ) नदी ब) जरना क) पृथ्वी
- ५ सारा संसार ढक लेने के लिए कौन कहता है ? अ) पर्वत ब) सागर क) आकाश
- ६ मेट्रो से आप क्या क्या करशकते हैं अ) खरीदारी के लिए जाना ब) घार्मिक स्थलों पर जाना क) दोनों ही बातों
- ७ गाड़ी पकड़वाने के लिए मेट्रो आप कहाँ ले जाएगी ? अ) कश्मीरी गेट ब) नई दिल्ली स्टेशन क) हवाई अड्डा
- ८ मेट्रो का सफर कैसा है ? अ) शानदार और आरामदायक ब) भीड़-भाड वाला क) मजेदार
- ९ म्चचालित सीढिया कहाँ लगी है अ) मेट्रो स्टेशन पर बी) मेट्रो के डिब्बों में क) स्टेशन के बहार
- १० सुरक्षा की जाच किसकी की जाती है अ) मेट्रो की बी) जवानों की क) यात्रीको
- ११ कवि अनुसार चाँद क्या हैं अ) हमारी दुनिया का एक टुकड़ा बी) एक दूसरी दुनिया
क) हमारी दुनिया से छुट गया गुब्बारा
- १२ किसके हाथ से यह छुट गया ? क) कवि के बी) हमारी दुनिया के क) हमारे
- १३ किसे देखकर हम ललचाते है ? क) चाँद को बी) गुब्बारे क) धरती को
- १४ कवि किसके पास जाना चाहता हैं ? क) हवाई जहाज से बी) रोकट से क) जादू के सहारे

प्र - २ प्रश्नों के उत्तर दीजिए

- १ पर्वत हमें क्या संदेश देता है ?
- २ मन में गहरेई लेन की बात कौन कहता है ?
- ३ तरल तरंगे का क्या उदेस्य है ?
- ४ पृथ्वी आकाश हमें क्या संदेश देता है ?
- ५ आकाश हमें क्या संदेश देता है ?
- ६ दिल्ली की शान क्या है ?
- ८ दिल्ली में कौन सा मेट्रो स्टेशन घरती में सबसे नीचे बना है ?
- ९ मेट्रो रेल आपको कहाँ कहाँ ले जाकर खरीदारी करती है ?
- १० टोकन या स्मार्टकार्ड किस कम आता है ?
- ११ स्टीफन होकीन्स का जन्म कहाँ और अब हुआ था ?
- १२ स्टीफन के पिता का नाम क्या था और वे पेशे से क्या थे ?
- १३ स्टीफन ने किन विश्वविद्यालयों से उच्च शिक्षा प्राप्त की ?
- १४ अपने जीवन में स्टीफन को किन किन समस्याओं का सामना करना पड़ा ?
- १५ आजकल स्टीफन किस विषय पर घहन शोध कर रहे थे ?
- १६ चाद के बारे में कवि का क्या ख्याल है ?
- १७ दूर से कौन भुत प्यारा लगता है और क्यों ?
- १८ हमारी दुनिया के साथ चाँद का क्या रिश्ता है ?

प्र - २ पर्यायवाची शब्द लिखो

१ पर्वत , सागर, संसार, पृथ्वी, नभ ,शीश , , रात्रि यात्री कोशिश वुद्ध अचानक प्रतिभा बीमार परिश्रम व्याखान
चाँद , हाथ दुनिया आसमान

प्र - ३ विलोम शब्द लखो

तरल सिर धैर्य , मुदुल , गहरा मीठी , महान विलक्षण नवीनतम देश प्रभावित विकट उपर दूर बहुत घरती

.....



Gurunanak & Chandraketu Pandya English Medium School
Shri Rajanikant Vyas & Chandraketu Pandya English Medium Higher Secondary School
(Pre-Primary, Primary, Secondary & Higher Secondary - Science and Commerce Stream)

Kumbhanath Society, Aavkar Hall Road, Maninagar, Ahmedabad-8. Ph. 25450086 • www.gncschool.com
STD:5 Chap : 8,9 F.A.-3 Assignment SUB: Science Total marks:90

Q. 1. Fill in the blanks.

(12)

1. The brain is protected in the _____
2. The _____ of the brain regulate the Heartbeat and breathing.
3. The vertebral column is made up of _____
4. The _____ of the brain controls movement and maintains the balance of the body.
5. The space between the brain and the skull bones is filled with a _____
6. _____ is done when force causes and object to move.
7. A lever can be moved about a fixed point called the _____
8. In a first class Lever the _____ is in between the lord and effort.
9. A _____ is an example of a second class Lever.
10. A _____ is a simple machine used to hoist a flag.
11. A second class Lever has the _____ in between.
12. A pair of tongs is a _____ class lever.

Q-2 Tick the true statements and cross the false ones.

(5)

1. When you try to push a wall you do work even if it does not move.
2. A second class Lever has the load between the fulcrum and effort.
3. It is easier to climb a steep slope rather than a gradual one.
4. A washing machine is a simple machine.
5. The wheel and axle form Complex machine.

Q-3 match the following.

(4)

- | A | B |
|------------------------|---|
| 1. Brain. | 1. Links the brain to the other parts of the body |
| 2. Spinal cord | 2. Carry messages from the sense organ to the brain |
| 3. Sensory nervous. | 3. Beating of the heart |
| 4. Involuntary action. | 4. Soft and delicate like jelly |

Q-4 write Key words:

1. Brain. 2. Reflex action. 3. Machine 4. Wedge. 5. Lever (10)

Q-5 give an example for the following.

(10)

1. Inclined plane. 2. Lever. 3. Pulley 4. Wedge. 5. Wheel and axle

Q-6 Tick the correct option to complete each sentence.

(11)

- 1) The nervous system is made up of the
a) brain, spinal cord and nerves
b) brain, heart and liver
c) nerves, arteries and veins
d) eardrum, taste buds and nerves
- 2) The spinal cord is protected inside the
a) brain b) rib cage c) vertebral column d) skull
- 3) Motor nerves carry messages from the...
a) sense organs to the brain or spinal cord
b) brain or spinal cord to the parts of the body
c) eyes to the spinal cord
d) brain to the heart
- 4) An automatic, quick response to a stimulus is called...
a) a rapid action b) a reflex action c) a reaction d) an automatic action
- 5) The lowermost part of the brain is the....
a) medulla b) cerebrum c) cerebellum d) vertebral column
- 6) A simple machine that consists of a fulcrum is...
a) a lever b) an inclined plane c) a wedge d) a pulley
- 7) A Machine made of two or more simple machines is called a....
a) Wheel and axle b) wedge c) pulley d) complex machine
- 8) An axe is a... a) wedge b) pulley c) wheel and axle d) lever

- 9) A simple machine consisting of a slanting flat slop that helps in the movement of heavy objects is...
a) a lever b) an inclined plane c) a wedge d) a screw
- 10) A simple machine that can be used to fix two pieces of wood together is..
a) a screw b) a wheel and axle c) a pulley d) an inclined plane
- 11) A nutcracker is...
a) a pulley b) an inclined plane c) a wedge d) a lever

Q-7 Answer the following:

(38)

- 1) What forms the human nervous system?
- 2) What protects the brain from jerks?
- 3) List two functions of the cerebrum.
- 4) Describe the three types of nerves.
- 5) When you look at an object, how does the information reach your brain?
- 6) What is a reflex action? Describe with an example.
- 7) How can you keep your eyes healthy?
- 8) What is a simple machine?
- 9) List any three types of simple machines.
- 10) Why is an inclined plane called a simple machine?
- 11) Describe a wedge. Give any two examples.
- 12) Draw and describe a wheel and axle.
- 13) Differentiate between a first class lever and a third class lever.



Gurunanak & Chandraketu Pandya English Medium School
Shri Rajanikant Vyas & Chandraketu Pandya English Medium Higher Secondary School
(Pre-Primary, Primary, Secondary & Higher Secondary - Science and Commerce Stream)

Kumbhanath Society, Aavkar Hall Road, Maninagar, Ahmedabad-8. Ph. 25450086 • www.gnchool.com

STD:5 Chap 9,10,11 *Maths* F.A.-3 Assignment Marks:90

Q-1 Short type questions:

(50)

- 1) Write as decimals: $\frac{1002}{1000}$
- 2) Write as decimals: $\frac{273}{100}$
- 3) Write as decimals: $\frac{153}{10}$
- 4) Write fraction or mixed number as decimal: $\frac{3}{4}$
- 5) Write fraction or mixed number as decimal: $\frac{4}{5}$
- 6) Write fraction or mixed number as decimal: $\frac{7}{20}$
- 7) Write decimal as a fraction in simplest form: 1.2
- 8) Write decimal as a fraction in simplest form: 4.25
- 9) Write decimal as a fraction in simplest form: 3.4
- 10) Multiply: 4.67×3
- 11) 7.42×5
- 12) 28.07×6
- 13) Divide: $3.5 \div 0.5$
- 14) Divide: $3.2 \div 0.8$
- 15) Divide: $32.4 \div 0.06$
- 16) Round off each decimal to the nearest whole number: 9.7
- 17) Round off each decimal to the nearest whole number: 12.78
- 18) Round off each decimal to the nearest whole number: 999.99
- 19) Round off each decimal to the nearest tenths: 9.48
- 20) Round off each decimal to the nearest tenths: 4.85
- 21) Round off each decimal to the nearest tenths: 12.53
- 22) Express in metres and centimeters: 382.14m
- 23) Express in metres and centimeters: 0.03m
- 24) Using decimal notation, express in Km: 540 Km 7 hm 3 dam 6m.
- 25) Using decimal notation, express in Km: 857 Km 2 m.

Q-2 Long type questions:

(40)

- 1) If 1 litre of petrol costs Rs. 65.34, find the cost of 25 litres.
- 2) A small car has a petrol tank whose capacity is 30 litres. Its capacity in millilitres.
- 3) Manish's weight is 83 Kg 450 g and Ashish is 6 Kg 900 g heavier than him. Find Ashish's weight in Kg.
- 4) Find the weight in grams of the contents of the breakfast cereal package if the gross weight is in 1 Kg 200 g the packaging weighs 15 g.
- 5) Aryan bought $\frac{4}{5}$ L of milk. On his way back home, he spilled $\frac{3}{4}$ of it. How many milliliters of milk did he spill?
- 6) Anshu had $\frac{4}{5}$ Kg of wafers. He packed all the wafers equally into 5 small packets. How many grams of wafers were there in each packet? For Rachna's birthday 3250 g cake was ordered. The weight of the cake in Kilograms is.
- 7) Find the value of: $3.0468 + 4.6251 + 9.6024$ correct to 3 decimal places.
- 8) 5.798×0.8 correct to 3 decimal places.
- 9) A roll of fabric has 85.63 metres on it. If 43.76 metres are sold, how much is left?
- 10) Sonu runs 153.35 m in 50 seconds and John runs 92.87 m in the same time. How much farther does sonu run than John?
- 11) A tailor needs 52.18 cm of white lace for Richa's skirt and 75.85 cm of the same lace for the top. How much lace does he need in all?
- 12) 15 bags of wheat were delivered at a grocery shop, the total weight being 144 Kg 780g. If all the bags contain equal amount of wheat, Find the weight of each bag?
- 13) If a circle is divided into 12 equal parts, What will be the measure of the angle of each part?
- 14) Name the number of right angles the hour hand on the clock face turns through in the direction from:
7:30 1) 12 to 3 2) 12 to 12 3) 3 to 3 4) 3 to 6 5) 8 to 11
- 15) How many degrees are there in each of 1) a right angle 2) a straight angle
- 16) Use protractor to draw angles: 1) 150 2) 56 3) 90 4) 165



Sheet - 13/14/15

Gurunanak & Chandraketu Pandya English Medium School
Shri Rajanikant Vyas & Chandraketu Pandya English Medium Higher Secondary School
(Pre-Primary, Primary, Secondary & Higher Secondary - Science and Commerce Stream)

Kumbhanath Society, Aavkar Hall Road, Maninagar, Ahmedabad-8. Ph. 25450086 • www.gncschool.com

STD 5th

F.A 3 ASSIGNMENT

SUB S.S

Q-1 FILL IN THE BLANKS. (15)

- 1 You can send _____ and _____ through the post office.
- 2 An e-mail is sent through a _____
- 3 Short films which spread knowledge are called _____
- 4 SMS stands for _____
- 5 The fax machine works through _____
- 6 _____ invented the television.
- 7 Bahadur Shah zafar was arrested and exiled to _____
- 8 The immediate cause of the 1857 was the introduction of the _____
- 9 The revolt of 1857 is also known as _____
- 10 The battle of buxer was fought in the year _____
- 11 The ghadar party printed a newspaper called _____
- 12 The british partitioned bengal to divide _____ and _____
- 13 The british followed the policy of _____ and rule.
- 14 Swami dayanand saraswati was the founder of the _____
- 15 The indian national congress was founded by _____

Q-2 TICK THE CORRECT ANSWERS. (16)

- 1 E-mail can be sent through (1) computer (2) tv (3) radio
- 2 Alexander graham bell invented the telephone in (1) 1876 (2) 1886 (3) 1896
- 3 Satelites provide us live audio visual programmes on (1) fax (2) television (3) newspaper
- 4 The battle of plassey took place in (1) 1757 (2) 1857 (3) 1867
- 5 Who set up the first trading center in india? (1) french (2) portuguese (3) british
- 6 The battle of buxer took place in (1) 1764 (2) 1864 (3) 1867
- 7 The indian national congress was established in (1) 1912 (2) 1905 (3) 1885
- 8 Raja Ram Mohan Roy was the founder of (1) Arya samaj (2) brahmo samaj (3) indian national congress
- 9 The battle of plassy took place in (1) 1757 (2) 1857 (3) 1867
- 10 The leader of the Revolt of 1857 was (1) Bahadur shah zafar (2) nana sahib (3) Tantya tope
- 11 The opposition to the partition of bengal led to the (1) jalianwala bagh massarce (2) swadeshi movement (3) non-cooperation movement
- 12 The leader who belived in revolution (1) mahatma gandhi (2) dadabhai navroji (3) bal gangadhar tilak
- 13 Satelites provide us live audio visual programmes on (1) fax (2) television (3) newspaper
- 14 The battle of plassey took place in (1) 1757 (2) 1857 (3) 1867
- 15 Who set up the first trading center in india? (1) french (2) portuguese (3) british
- 16 The battle of buxer took place in (1) 1764 (2) 1864 (3) 1867

Q-3 MATCH THE FOLLOWING. (15)

- | | |
|-------------------------------|---|
| 1 The moderates | founded the brahmo samaj |
| 2 The revolutionaries | fought for equality of all casts |
| 3 ishwar chandra vidyasagar | belived in solving problems through request |
| 4 Swami dayanand sarswati | wanted to boycott the british |
| 5 Raja Rammonan Roy | founded the Arya samaj |
| 6 Siraj-ud-Daula | lord richard welllesley |
| 7 Bahadur shah zafar | 1600 CE |
| 8 French | Nawab of bengal |
| 9 British East india company | last mughal emperor |
| 10 Subsidiary Alliance policy | pondicherry |
| 11 Radio | newspaper |
| 12 Television | guglielmp marconi |
| 13 Live programmes | Fax |
| 14 Documents are sent by | satelite |
| 15 Mass communication | john logie baired |

Q-4 GIVE THE ANSWERS OF SHORT ANSWERS. (20)

- 1 How do we see live programmes?
- 2 How are telegraph messages sent?
- 3 What changes did the printing press bring about?
- 4 What was the 'Doctrine of lapse'?
- 5 How did the british exploit the indian farmers?
- 6 Who was the last Mughal emperor? where was he sent after his arrest?
- 7 Explain the 'divide and rule' policy of the british.
- 8 Write a note on swadeshi movement?
- 9 Who founded the indian national congress?
- 10 Why is Raja rammohan Roy known as the 'maker of modern india'?

Q-5 GIVE THE ANSWERS OF LONG TYPE QUESTIONS. (24)

- 1 What is communication? mention its essence.
- 2 Why do we need to send and receive an e-mail?
- 3 Why were indians exploited by the british?
- 4 Why is the revolt of 1857 important in india history?
- 5 What do you know about the Ghadar party?
- 6 Moderates and nationalists had different opinions. discuss.
- 7 Write in brief about the formation of the indian national congress.
- 8 How was trade with india profitable for the british east india company?



Ch. - 13 to 16

Gurunanak & Chandraketu Pandya English Medium School
Shri Rajanikant Vyas & Chandraketu Pandya English Medium Higher Secondary School
(Pre-Primary, Primary, Secondary & Higher Secondary - Science and Commerce Stream)

Kumbhanath Society, Aavkar Hall Road, Maninagar, Ahmedabad-8. Ph. 25450086 • www.gnchool.com

Std: 5th
Marks : 90

F.A.3.

Sub: Grammar

Q.1. Rewrite the following sentences using to before one of Nouns. [20 Marks]

1. The teacher gave the class a lot of homework.
2. The man offered the child a piece of bread.
3. The old woman told my sister a story.
4. The Headmaster promised the boys a holiday.
5. Did the woman give the dog any food?
6. Have those pupils given their teacher any trouble?
7. The doctor gave the patient some medicine.
8. The woman offered their husbands no food.
9. The king gave the soldiers a rich reward.
10. Did the man offer woman any money?

Q.2. Turn the following possessives into the Plural: [15 Marks]

1. the monkey's tail
2. the baby's frock
3. the lady's hat
4. the woman's husband
5. the child's toy

Q.3. Write down the possessive form of the following. [10 Marks]

1. the tails of the horses
2. the cousin of my friend
3. the hoofs of these oxen
4. the parents of these boys
5. the dog of Mr. White

Q.4. Change the following sentences into plural: [15 Marks]

1. She hurt herself.
2. Mine are in this room, his are not in this room.
3. Has he seen her?
4. I hurt myself.
5. This book is mine. Where is yours? Have you lost it.

Q.5. Fill in the blanks with suitable Pronouns: [10 Marks]

1. Have _____ a ticket, Sir?
2. We have done _____ work.
3. Do _____ want to help me or not?
4. _____ are all happy.
5. I shall do _____ work.
6. _____ love our parents.
7. Tell _____ to leave this place.
8. I can play much better than _____.
9. Did you call me or _____?
10. Call Hari here. I must see _____.

Q.6. Give the Comparative and Superlative Degrees of the following Adjectives:[20 Marks]

1. Red 2. Proud 3. Cold 4. Beautiful 5. Lovely 6. Famous 7. Light 8. Intelligent 9. Ripe 10. Thick



Ch- 9 7012
Gurunanak & Chandraketu Pandya English Medium School

Shri Rajanikant Vyas & Chandraketu Pandya English Medium Higher Secondary School

(Pre-Primary, Primary, Secondary & Higher Secondary - Science and Commerce Stream)

Kumbhanath Society, Aavkar Hall Road, Maninagar, Ahmedabad-8. Ph. 25450086 • www.gncschool.com

Std: 5th

F.A.3.

Sub: Reader

Marks: 90

Q.1 Meanings: [20 Marks]

- | | | | | |
|----------------|-------------|-------------|---------------|-------------|
| 1. celebrities | 2. trustee | 3. flitted | 4. stealthily | 5. aghast |
| 6. glutton | 7. smuggler | 8. morosely | 9. lazed | 10. bruises |

Q.2. Tick the correct option: [20Marks]

- As the two men _____, the donkey ran away.
a. slept b. argued
- The driver said the man had hired only the _____.
a. shade b. donkey
- The farmer was a
a. rich man b. poor man
- The old man buys sweets
a. daily b. sometimes
- When invites to dinner by the boys, the old man was
a. angry b. embarrassed
- The boy think the old man is a
a. thief b. smuggler
- Jerusha has just
a. left the college b. joined college
- Jerusha doesn't like
a. her friend's name b. her trustee's name
- Children should not
a. overtrain b. traint at all
- Adults like news more than
a. children b. doctor

Q.3. True or false: [10 Marks]

- The narrator of this story is the old man's neighbour.
- The old man goes out of his house everyday.
- The famer lived alone on the farm with his animals.
- The donkey agreed that he had an easier life than the bull.
- The farmer used to feed the animals himself.

Q.4. Answer the following Questions: [20 Marks]

- Do people really feel sorry for the speaker?
 - What does hang my head mean?
 - Why is he being invited?
 - What is the person's reaction?
 - Whom are they inviting?
 - What kind of a room did she have so earlier?
 - To whom is she saying all this?
 - Why is she now getting to know herself better?
 - What had happened just before the invitation was given?
 - ' We have come to invite you to join us for dinner tonight'
- Q-What does we refer to?

Q.5. Do as directed: [20 Marks]

- Write how many syllables each word has:

- a. conversation _____ b. Prosperous _____
c. donkey _____ d. ridicule _____ e. donkey _____

2. Rewrite the following using 'Would you':

- a. Do you want to come to my party?
- b. Do you want to have coffee?
- c. Do you want to see a film?
- d. Do you want to sleep now?



STD 5th

F.A 3 ASSIGNMENT

SUB cambridge

Q-1 DO AS DIRECTED

- 1 Fly bees flower to flower from (put in right order)
- 2 What a horrible sight it was! (which kind of sentence)
- 3 The earth moves round the sun. (underline subject)
- 4 An _____ consists of soldiers and commanders. (army , mob)
- 5 My sister seemed upset. (underline verb)
- 6 A black cat is sitting under a tree. (underline Adjectives)
- 7 He is entirely deaf. (underline Adverb)
- 8 The horse has hurt _____ (write pronoun)
- 9 He hung the picture _____ the fireplace. (on , over)
- 10 Ice is cold _____ fire is hot. (but , and)
- 11 cheese , butter and milk made are from (put in right order)
- 12 How do you do? (what kind of sentences)
- 13 The elephant has a long trunk. (underline predicate)
- 14 A large _____ of people gathered in the street. (crowd , committee)
- 15 A dog is an animal. (underline verb)
- 16 My mother is a classical singer. (underline Adjective)
- 17 She left early. (underline Adverb)
- 18 She _____ is to blame for it. (write pronoun)
- 19 We enjoyed our picnic _____ the beach. (over , on)
- 20 I like Tony _____ he is always cheerful. (because , so)
- 21 here came Ashok ago minutes a few (put in right order)
- 22 Keep off the grass. (which kind of sentences)
- 23 The sheep are grazing in the field. (underline subject)
- 24 Our _____ won the match. (team , crowd)
- 25 The woman became sad. (underline verb)
- 26 My father is reading an interesting book. (underline Adjective)
- 27 He was nearly exhausted. (underline Adverb)
- 28 You _____ wanted this. (write pronoun)
- 29 The ladies are sitting _____ the table and chatting.
- 30 It is raining _____ i cannot go to school. (because, therefore)
- 31 The boys trouser's _____ torn. (was , were)
- 32 A widower is one who has lost his wife. (change gender)
- 33 He was _____ and good to all. (kind , kindness)
- 34 a wide / it / and / was / deep river. (put in right order)
- 35 Work for home-
- 36 My father is _____ engineer. (a , an)
- 37 This book is mine. (change into plural form)
- 38 There are not _____ birds. (much , many)
- 39 The mice _____ not in this trap. (is , are)
- 40 Your aunt warned the maidservants. (change gender)
- 41 I want to go _____ the river, (cross , across)
- 42 game / requires / This / an umpire (put in right order)

43 leader of the class-

44 Sri Lanka is _____ island. (the , an)

45 That ribbon is hers (change into plural form)-

46 There is not _____ water in glass. (many , much)

47 Good children _____ their parents, (obeys , obey)

48 He ate his breakfast. (change gender)

49 He was a man of giant size and _____ (strong , strength)

50 what makes / do you / a shadow / know? (put in right order)

51 _____ earth moves round the sun. (the , a)

52 Cloth for table-

53 My friend helped me . (change into plural form)

54 There is not _____ food in house. (much , many)

Q-2 READ THE PARAGRAPH AND GIVE THE ANSWERS OF FOLLOWING QUESTION.

When an object vibrates, it sends sound waves through the air. When these vibrations reach our ears, we hear them as sounds. In our throat, we have thin strips of muscles, called vocal cords. When the air from our lungs passes around these cords, vibrations are caused. As a result, sound is produced. By using our tongue, teeth, nose and lips, we can change these sounds into words of speech.

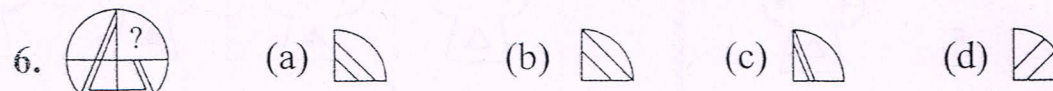
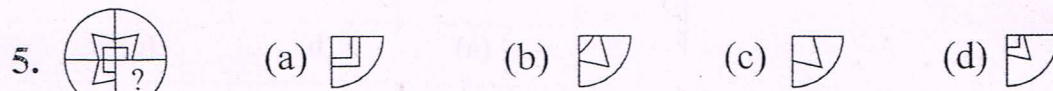
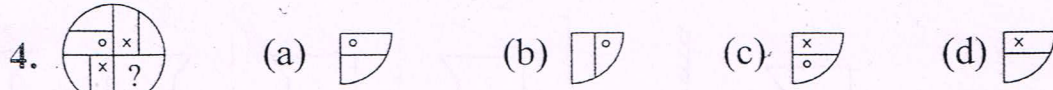
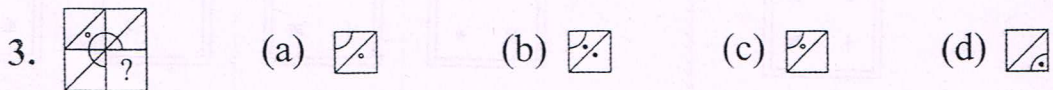
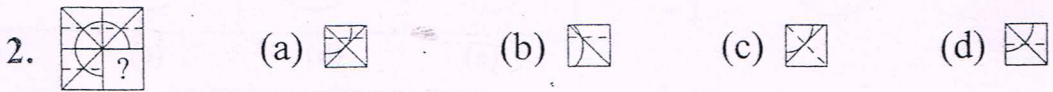
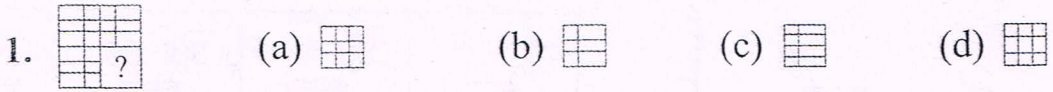
- 1 What happens when an object vibrates?
- 2 What helps us to hear sounds?
- 3 When do we hear sounds?
- 4 What are vocal cords?
- 5 How do vocal cords produce sounds?
- 6 How can we change sounds into words of speech?

Look at the narrow end of a coconut. You'll notice three little brown pits on the surface. Two of these are blocked by quite hard material. But the third one has a thin covering which can be easily bored through with a pocketknife. People often do this to let out the milk before cracking the shell.

- 1 What is there on the narrow end of a coconut?
- 2 What is blocked by hard material?
- 3 What can be bored through with a knife?
- 4 How can we have milk from a coconut shell?
- 5 What come before and after third?
1 _____ 2 _____
- 6 Find from the passage the opposites of
1 broad _____ 2 hard _____

Here an incomplete figure is given in which a part (generally a quarter) is left blank. The candidate has to select the answer from the options which fits into the blank space so that the main figure gets completed.

Tick (✓) the figure from the options which replaces the question mark in the given figure.




Mirror Image - 1

Tick (✓) the correct mirror image of the given figure.

ter)
ons


mark

1.



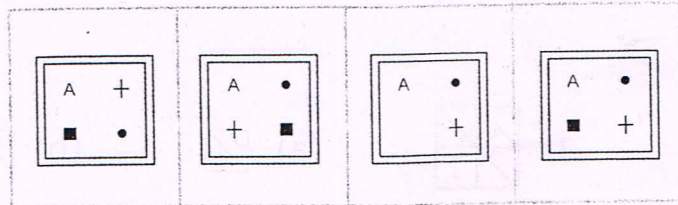
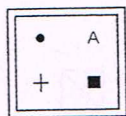
(a) (b) (c) (d)

2.



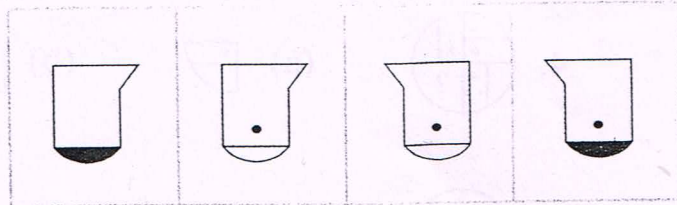
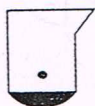
(a) (b) (c) (d)

3.




(a) (b) (c) (d)

4.



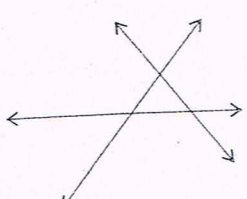
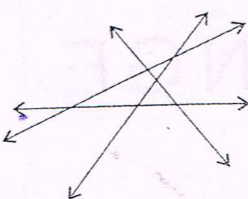
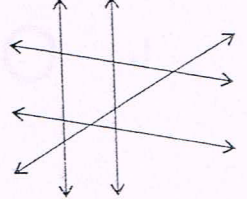
(a) (b) (c) (d)

5.



(a) (b) (c) (d)

In how many points do the following lines meet? Fill in the boxes.

<p>1.</p>  <p><input type="text"/> Lines meet in <input type="text"/> points.</p>	<p>2.</p>  <p><input type="text"/> Lines meet in <input type="text"/> points.</p>	<p>3.</p>  <p><input type="text"/> Lines meet in <input type="text"/> points.</p>
--	---	--

By drawing figures show the following.

<p>4.</p> <p>4 lines meeting in 1 point.</p>	<p>5.</p> <p>4 lines meeting in 3 points.</p>	<p>6.</p> <p>4 lines meeting in 4 points.</p>
<p>7.</p> <p>5 lines meeting in 4 points.</p>	<p>8.</p> <p>5 lines meeting in 5 points.</p>	<p>9.</p> <p>5 lines meeting in 9 points.</p>

Mirror Image - 2

Draw the mirror image of the following words.

1. ORANGE

2. CRICKET

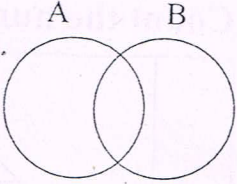
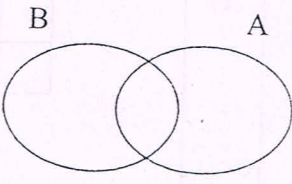
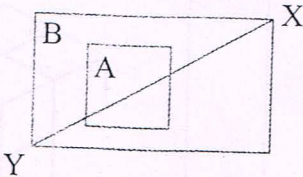
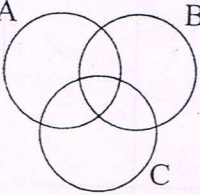
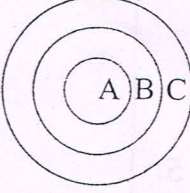
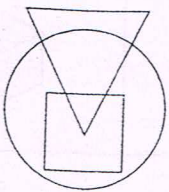
3. PIZZA

Write the words whose mirror images are given.

4. MUMBAI

5. PAPAYA

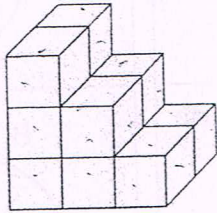
6. FERRY

<p>1. A and B are two overlapping circles. Shade the common part of the two circles.</p>	
<p>2. A and B are two overlapping ovals. Shade the part A which is not common with B.</p>	
<p>3. Square A lies inside rectangle B. XY is diagonal of the rectangle. Shade the part of the rectangle above the diagonal XY which does not lie in the square.</p>	
<p>4. A, B and C are three intersecting circles. Shade the part of circle A which it does not share with either B or C or both.</p>	
<p>5. A, B and C are three concentric circles. Shade the part of C which it share with B but not with A.</p>	
<p>6. A circle, a square and a triangle are drawn as shown. Shade the part which is common to all three of them.</p>	

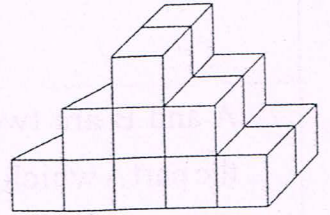
Counting Cubes

Count the number of cubes in each figure and write it in the box.

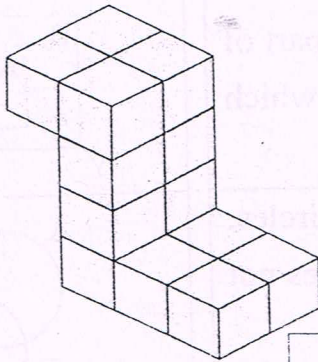
1.



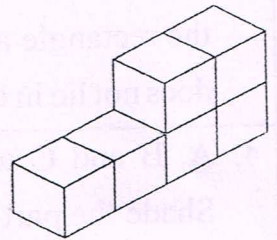
2.




3.



4.



5.



6.

